




Solve each problem.

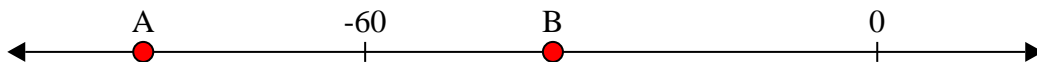
**Answers**

1) Which letter best shows -11?




1. \_\_\_\_\_

2) Which letter best shows -38?



2. \_\_\_\_\_

3) Which letter best shows -78?




3. \_\_\_\_\_

4) Which letter best shows -28?



4. \_\_\_\_\_

5) Which letter best shows -109?



5. \_\_\_\_\_

6) Which letter best shows -68?




6. \_\_\_\_\_

7) Which letter best shows -10?



7. \_\_\_\_\_

8) Which letter best shows -20?




8. \_\_\_\_\_

9) Which letter best shows -82?



9. \_\_\_\_\_

10) Which letter best shows -79?




10. \_\_\_\_\_

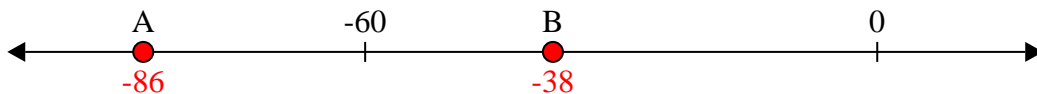


Solve each problem.

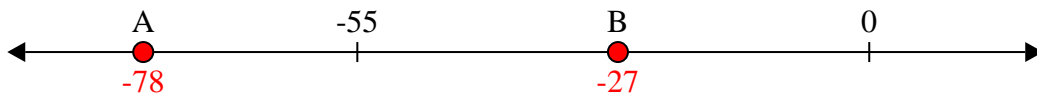
1) Which letter best shows -11?




2) Which letter best shows -38?




3) Which letter best shows -78?



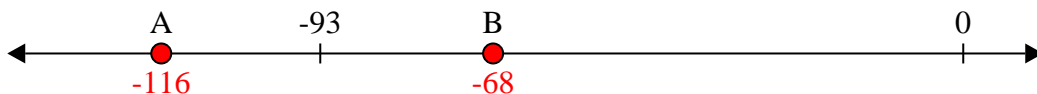
4) Which letter best shows -28?




5) Which letter best shows -109?




6) Which letter best shows -68?



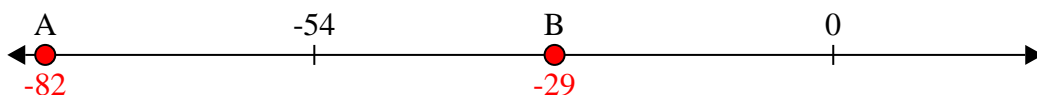
7) Which letter best shows -10?



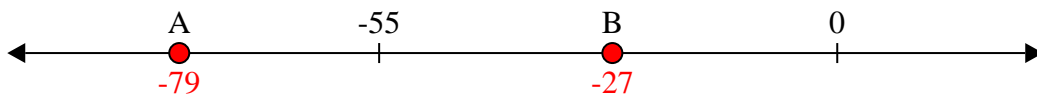
8) Which letter best shows -20?



9) Which letter best shows -82?



10) Which letter best shows -79?



**Answers**

1. **B**

2. **B**

3. **A**

4. **B**

5. **A**

6. **B**

7. **B**

8. **B**

9. **A**

10. **A**