




Solve each problem.


Answers

1) Which letter best shows -101?




1. _____

2) Which letter best shows -42?




2. _____

3) Which letter best shows -76?



3. _____

4) Which letter best shows -110?



4. _____

5) Which letter best shows -106?




5. _____

6) Which letter best shows -114?




6. _____

7) Which letter best shows -21?




7. _____

8) Which letter best shows -20?




8. _____

9) Which letter best shows -79?



9. _____

10) Which letter best shows -97?




10. _____

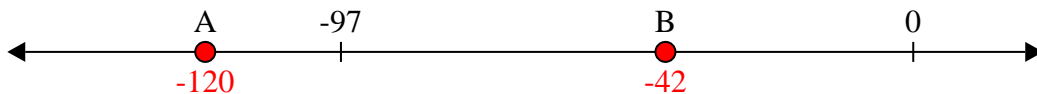


Solve each problem.

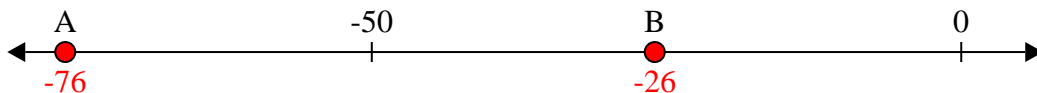
1) Which letter best shows -101?



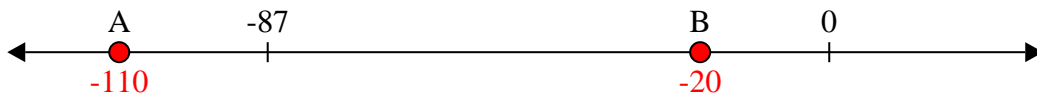
2) Which letter best shows -42?




3) Which letter best shows -76?




4) Which letter best shows -110?




5) Which letter best shows -106?




6) Which letter best shows -114?




7) Which letter best shows -21?




8) Which letter best shows -20?



9) Which letter best shows -79?



10) Which letter best shows -97?



Answers

1. **A**

2. **B**

3. **A**

4. **A**

5. **A**

6. **A**

7. **B**

8. **B**

9. **A**

10. **A**