




Solve each problem.

Answers

- 1) Which letter best shows -77?



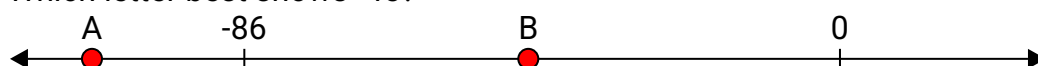
1. _____

- 2) Which letter best shows -31?




2. _____

- 3) Which letter best shows -45?



3. _____

- 4) Which letter best shows -11?



4. _____

- 5) Which letter best shows -33?



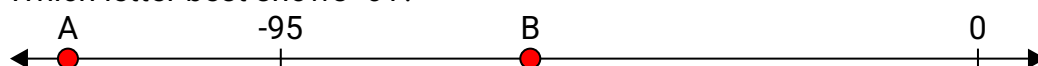
5. _____

- 6) Which letter best shows -81?




6. _____

- 7) Which letter best shows -61?



7. _____

- 8) Which letter best shows -91?




8. _____

- 9) Which letter best shows -24?



9. _____

- 10) Which letter best shows -76?




10. _____




Solve each problem.

Answers

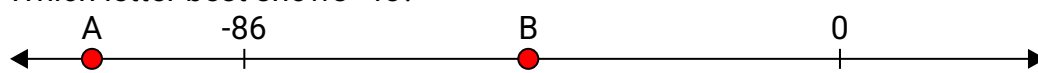
- 1) Which letter best shows -77?

1. **A**


- 2) Which letter best shows -31?

2. **B**

- 3) Which letter best shows -45?

3. **B**


- 4) Which letter best shows -11?

4. **B**

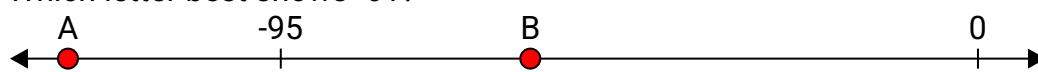
- 5) Which letter best shows -33?

5. **B**


- 6) Which letter best shows -81?

6. **A**


- 7) Which letter best shows -61?

7. **B**

- 8) Which letter best shows -91?

8. **A**

- 9) Which letter best shows -24?

9. **B**

- 10) Which letter best shows -76?

10. **A**