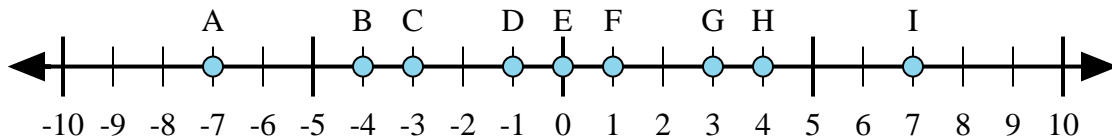




Determine which letter in the numberline best represents the answer to each problem.

Answers



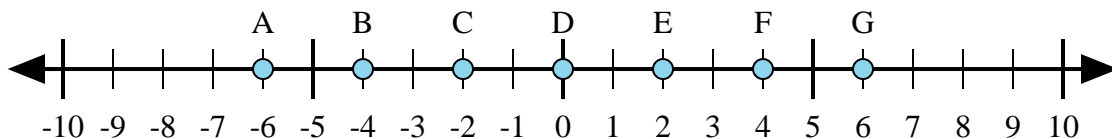
1) $4 + (-3) =$

2) $3 + (-4) =$

3) $(-3) + (-4) =$

4) $(-4) + 3 =$

5) $3 + 4 =$



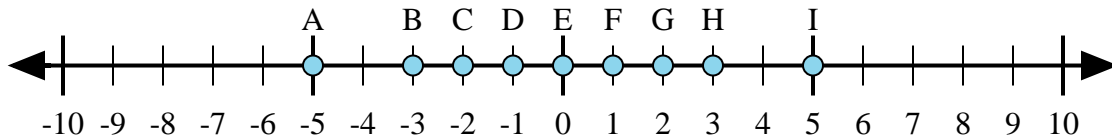
6) $(-4) + 2 =$

7) $(-2) + 4 =$

8) $4 + 2 =$

9) $(-4) + (-2) =$

10) $2 + (-4) =$



11) $(-3) + 2 =$

12) $2 + (-3) =$

13) $(-2) + 3 =$

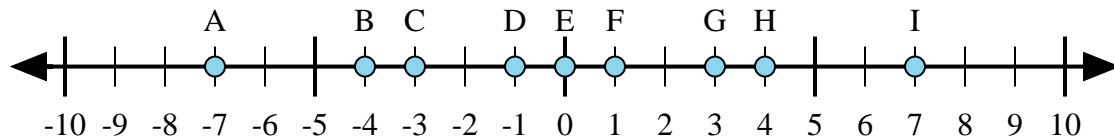
14) $(-3) + (-2) =$

15) $3 + (-2) =$

1. _____
2. _____
3. _____
4. _____
5. _____
6. _____
7. _____
8. _____
9. _____
10. _____
11. _____
12. _____
13. _____
14. _____
15. _____



Determine which letter in the numberline best represents the answer to each problem.



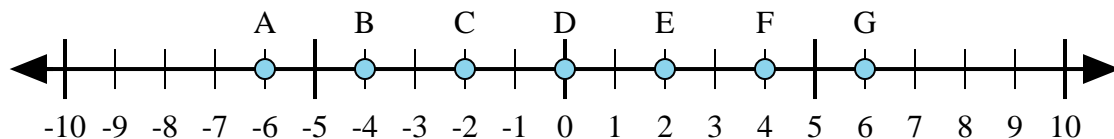
1) $4 + (-3) =$

2) $3 + (-4) =$

3) $(-3) + (-4) =$

4) $(-4) + 3 =$

5) $3 + 4 =$



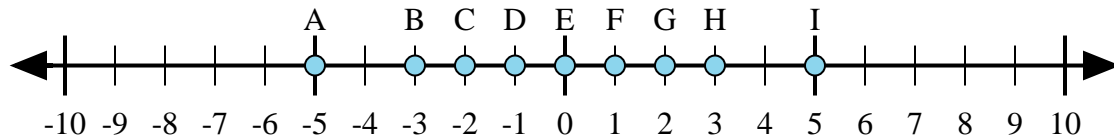
6) $(-4) + 2 =$

7) $(-2) + 4 =$

8) $4 + 2 =$

9) $(-4) + (-2) =$

10) $2 + (-4) =$



11) $(-3) + 2 =$

12) $2 + (-3) =$

13) $(-2) + 3 =$

14) $(-3) + (-2) =$

15) $3 + (-2) =$

Answers

1. F

2. D

3. A

4. D

5. I

6. C

7. E

8. G

9. A

10. C

11. D

12. D

13. F

14. A

15. F