



Solve each problem. Use the numberline if needed.

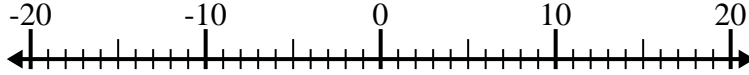
Answers

1) $(-11) - 2 =$ _____



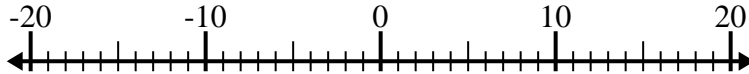
1. _____

2) $(-2) - (-1) =$ _____



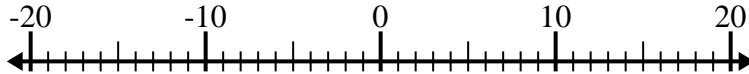
2. _____

3) $4 - (-14) =$ _____



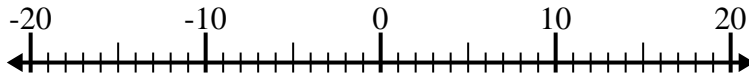
3. _____

4) $8 - (-4) =$ _____



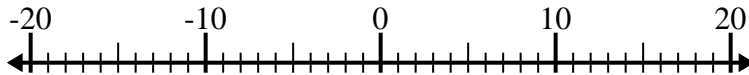
4. _____

5) $(-8) + (-12) =$ _____



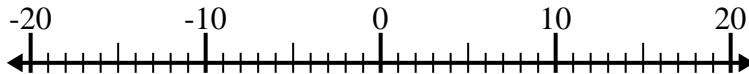
5. _____

6) $(-14) + 9 =$ _____



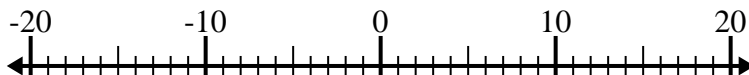
6. _____

7) $(-6) + (-8) =$ _____



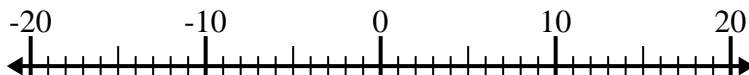
7. _____

8) $15 + (-6) =$ _____



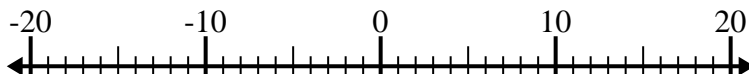
8. _____

9) $7 + (-11) =$ _____



9. _____

10) $(-5) - 4 =$ _____



10. _____

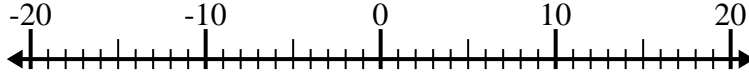


Solve each problem. Use the numberline if needed.

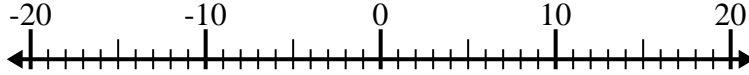
1) $(-11) - 2 = \underline{-13}$



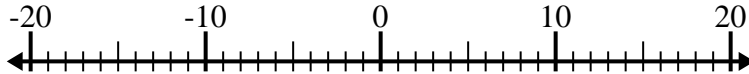
2) $(-2) - (-1) = \underline{-1}$



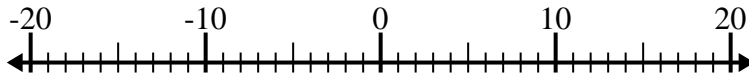
3) $4 - (-14) = \underline{18}$



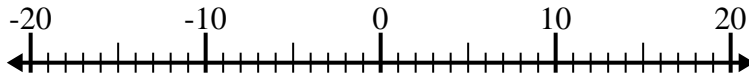
4) $8 - (-4) = \underline{12}$



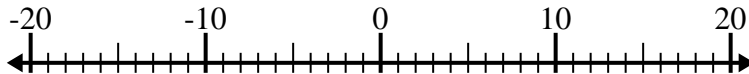
5) $(-8) + (-12) = \underline{-20}$



6) $(-14) + 9 = \underline{-5}$



7) $(-6) + (-8) = \underline{-14}$



8) $15 + (-6) = \underline{9}$



9) $7 + (-11) = \underline{-4}$



10) $(-5) - 4 = \underline{-9}$



Answers

1. **-13**

2. **-1**

3. **18**

4. **12**

5. **-20**

6. **-5**

7. **-14**

8. **9**

9. **-4**

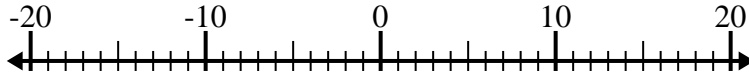
10. **-9**



Solve each problem. Use the numberline if needed.

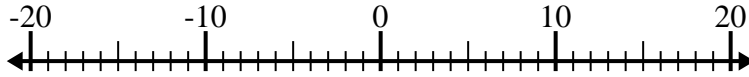
Answers

1) $(-15) - (-7) =$ _____



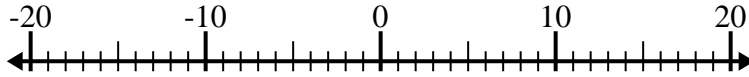
1. _____

2) $(-9) - 4 =$ _____



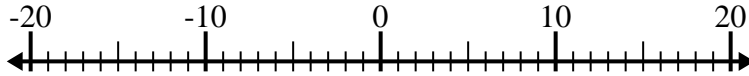
2. _____

3) $7 - (-13) =$ _____



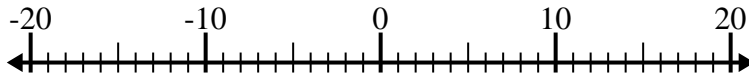
3. _____

4) $(-5) + (-11) =$ _____



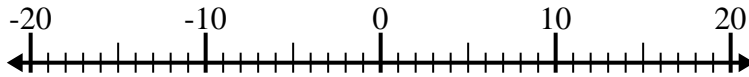
4. _____

5) $(-12) + 4 =$ _____



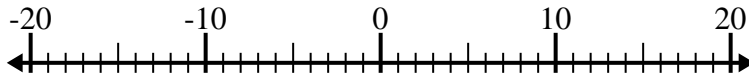
5. _____

6) $14 - (-2) =$ _____



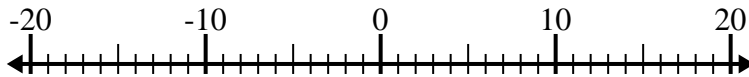
6. _____

7) $1 + (-13) =$ _____



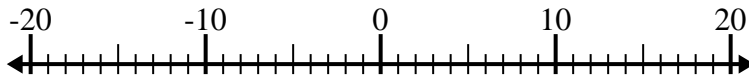
7. _____

8) $(-4) - (-7) =$ _____



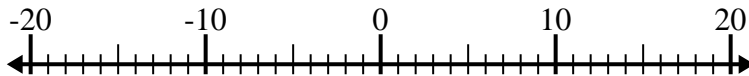
8. _____

9) $(-9) - 11 =$ _____



9. _____

10) $(-15) + (-1) =$ _____

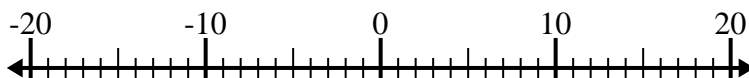


10. _____

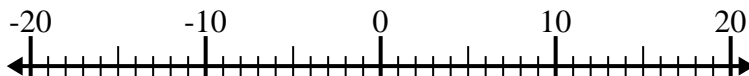


Solve each problem. Use the numberline if needed.

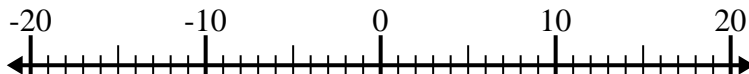
1) $(-15) - (-7) = \underline{-8}$



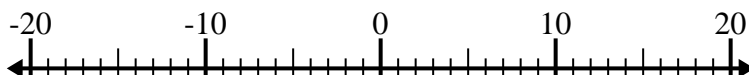
2) $(-9) - 4 = \underline{-13}$



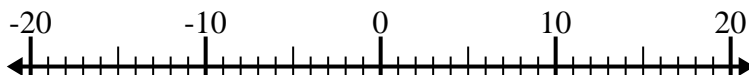
3) $7 - (-13) = \underline{20}$



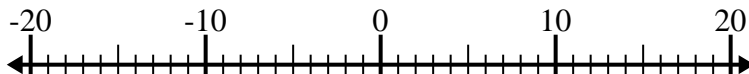
4) $(-5) + (-11) = \underline{-16}$



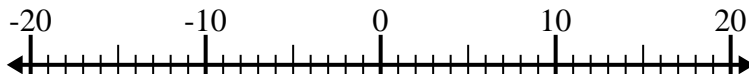
5) $(-12) + 4 = \underline{-8}$



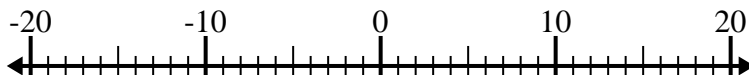
6) $14 - (-2) = \underline{16}$



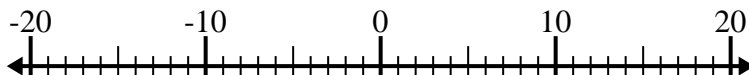
7) $1 + (-13) = \underline{-12}$



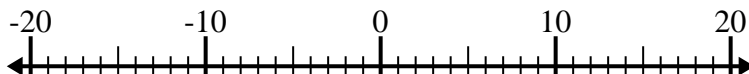
8) $(-4) - (-7) = \underline{3}$



9) $(-9) - 11 = \underline{-20}$



10) $(-15) + (-1) = \underline{-16}$



Answers

1. **-8**

2. **-13**

3. **20**

4. **-16**

5. **-8**

6. **16**

7. **-12**

8. **3**

9. **-20**

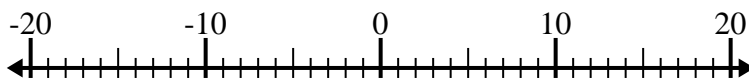
10. **-16**



Solve each problem. Use the numberline if needed.

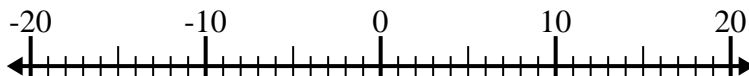
Answers

1) $8 - (-12) = \underline{\hspace{2cm}}$



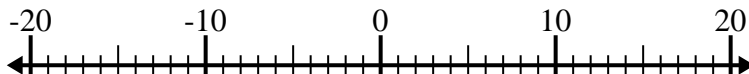
1. _____

2) $(-8) + (-6) = \underline{\hspace{2cm}}$



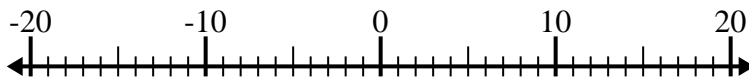
2. _____

3) $12 + (-2) = \underline{\hspace{2cm}}$



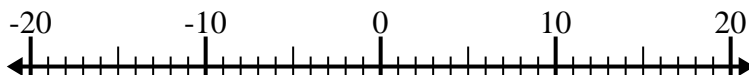
3. _____

4) $(-2) + (-13) = \underline{\hspace{2cm}}$



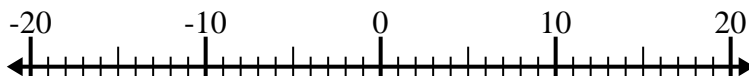
4. _____

5) $(-6) + 8 = \underline{\hspace{2cm}}$



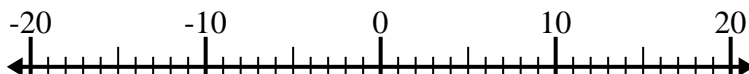
5. _____

6) $(-5) - 10 = \underline{\hspace{2cm}}$



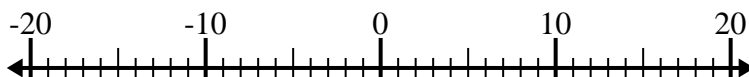
6. _____

7) $(-14) - (-8) = \underline{\hspace{2cm}}$



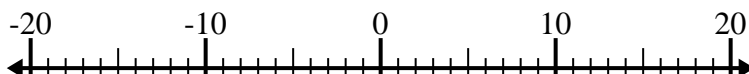
7. _____

8) $5 - (-2) = \underline{\hspace{2cm}}$



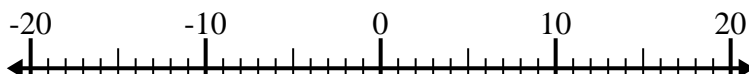
8. _____

9) $(-11) - (-14) = \underline{\hspace{2cm}}$



9. _____

10) $14 + (-10) = \underline{\hspace{2cm}}$

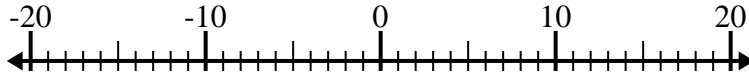


10. _____

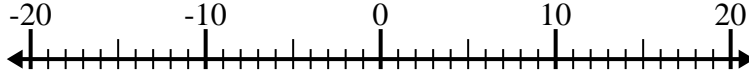


Solve each problem. Use the numberline if needed.

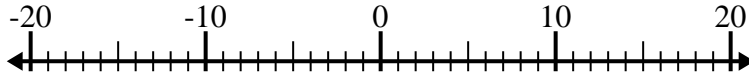
1) $8 - (-12) = \underline{20}$



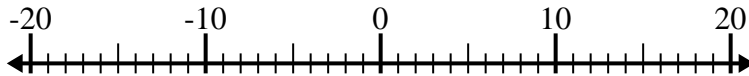
2) $(-8) + (-6) = \underline{-14}$



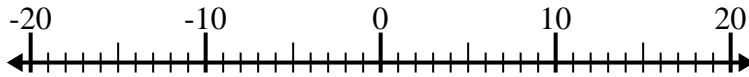
3) $12 + (-2) = \underline{10}$



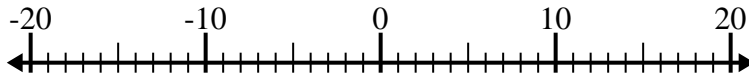
4) $(-2) + (-13) = \underline{-15}$



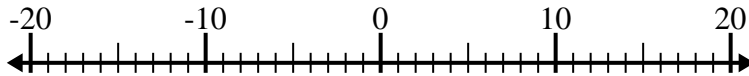
5) $(-6) + 8 = \underline{2}$



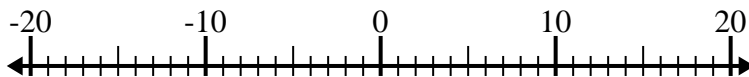
6) $(-5) - 10 = \underline{-15}$



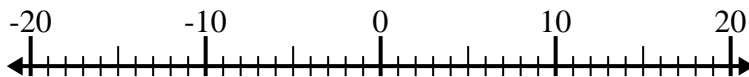
7) $(-14) - (-8) = \underline{-6}$



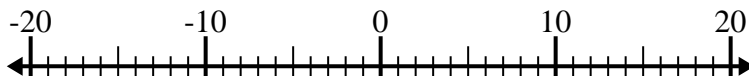
8) $5 - (-2) = \underline{7}$



9) $(-11) - (-14) = \underline{3}$



10) $14 + (-10) = \underline{4}$



Answers

1. 20

2. -14

3. 10

4. -15

5. 2

6. -15

7. -6

8. 7

9. 3

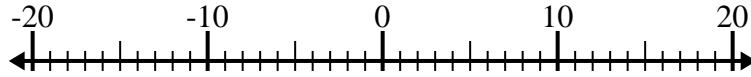
10. 4



Solve each problem. Use the numberline if needed.

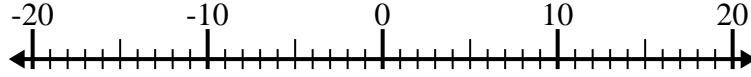
Answers

1) $(-2) + (-8) =$ _____



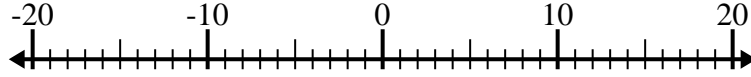
1. _____

2) $9 - (-7) =$ _____



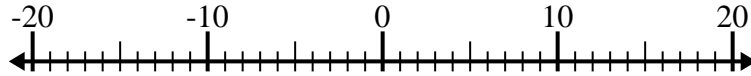
2. _____

3) $(-7) + 13 =$ _____



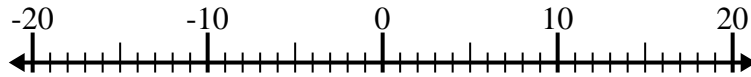
3. _____

4) $(-11) - 3 =$ _____



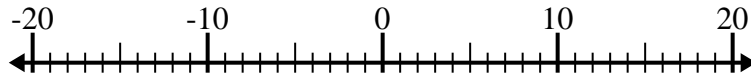
4. _____

5) $1 + (-2) =$ _____



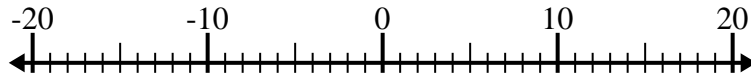
5. _____

6) $(-8) - (-4) =$ _____



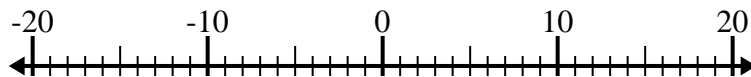
6. _____

7) $(-4) - (-13) =$ _____



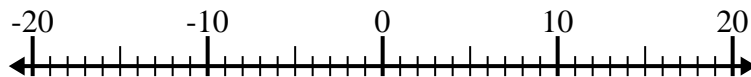
7. _____

8) $1 - (-14) =$ _____



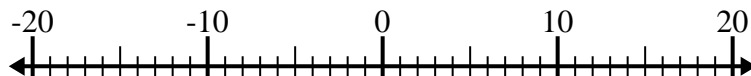
8. _____

9) $(-7) + 15 =$ _____



9. _____

10) $(-5) + (-4) =$ _____

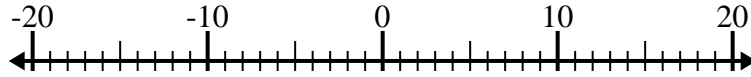


10. _____

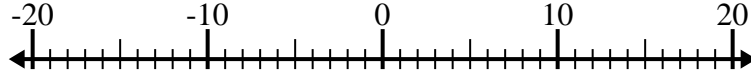


Solve each problem. Use the numberline if needed.

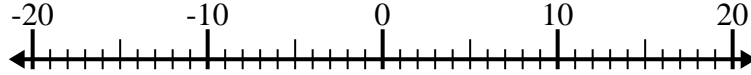
1) $(-2) + (-8) = \underline{-10}$



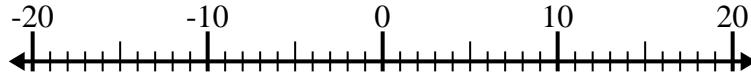
2) $9 - (-7) = \underline{16}$



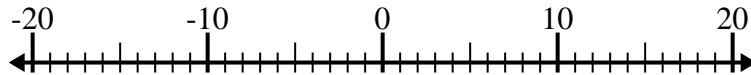
3) $(-7) + 13 = \underline{6}$



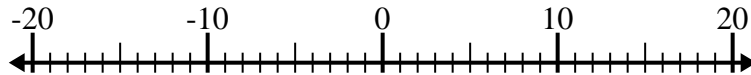
4) $(-11) - 3 = \underline{-14}$



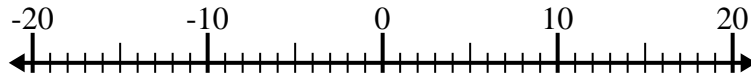
5) $1 + (-2) = \underline{-1}$



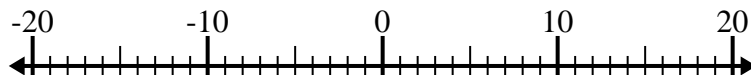
6) $(-8) - (-4) = \underline{-4}$



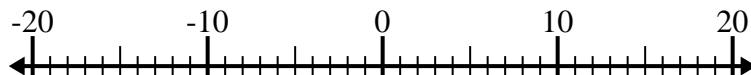
7) $(-4) - (-13) = \underline{9}$



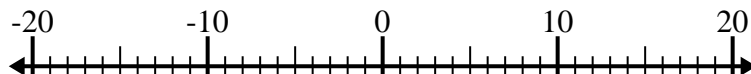
8) $1 - (-14) = \underline{15}$



9) $(-7) + 15 = \underline{8}$



10) $(-5) + (-4) = \underline{-9}$



Answers

1. **-10**

2. **16**

3. **6**

4. **-14**

5. **-1**

6. **-4**

7. **9**

8. **15**

9. **8**

10. **-9**



Solve each problem. Use the numberline if needed.

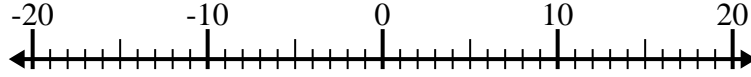
Answers

1) $(-3) - 9 =$ _____



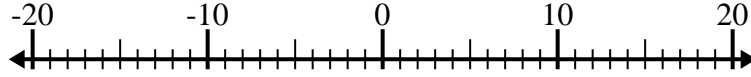
1. _____

2) $(-11) + (-7) =$ _____



2. _____

3) $(-15) + 11 =$ _____



3. _____

4) $10 - (-4) =$ _____



4. _____

5) $(-2) + (-5) =$ _____



5. _____

6) $(-14) - (-7) =$ _____



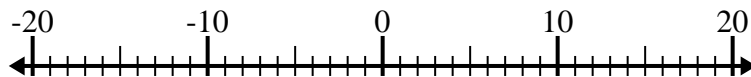
6. _____

7) $(-10) - 1 =$ _____



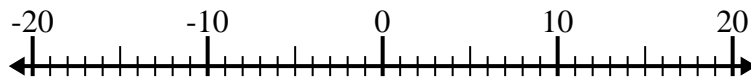
7. _____

8) $10 - (-6) =$ _____



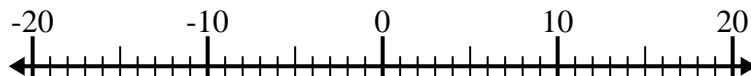
8. _____

9) $13 + (-1) =$ _____



9. _____

10) $(-8) + 4 =$ _____



10. _____



Solve each problem. Use the numberline if needed.

1) $(-3) - 9 = \underline{-12}$



2) $(-11) + (-7) = \underline{-18}$



3) $(-15) + 11 = \underline{-4}$



4) $10 - (-4) = \underline{14}$



5) $(-2) + (-5) = \underline{-7}$



6) $(-14) - (-7) = \underline{-7}$



7) $(-10) - 1 = \underline{-11}$



8) $10 - (-6) = \underline{16}$



9) $13 + (-1) = \underline{12}$



10) $(-8) + 4 = \underline{-4}$

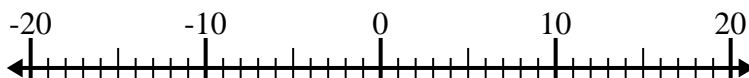
**Answers**1. **-12**2. **-18**3. **-4**4. **14**5. **-7**6. **-7**7. **-11**8. **16**9. **12**10. **-4**



Solve each problem. Use the numberline if needed.

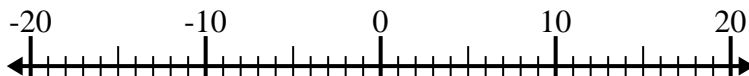
Answers

1) $(-12) - (-8) =$ _____



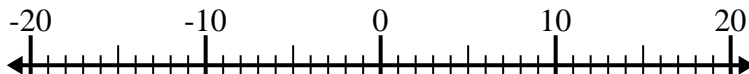
1. _____

2) $(-7) + (-5) =$ _____



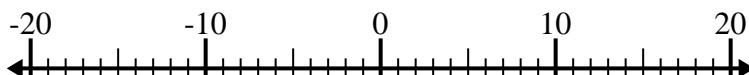
2. _____

3) $13 + (-4) =$ _____



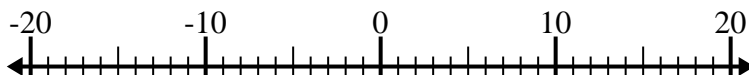
3. _____

4) $(-6) + 7 =$ _____



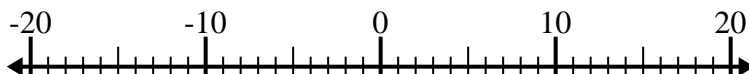
4. _____

5) $9 + (-10) =$ _____



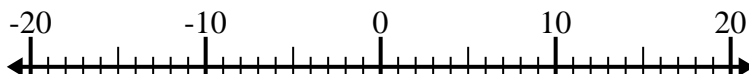
5. _____

6) $(-2) + 4 =$ _____



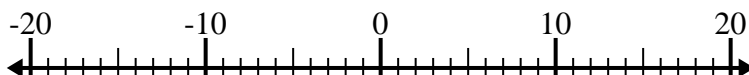
6. _____

7) $(-6) - (-15) =$ _____



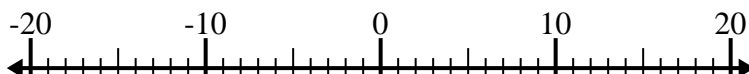
7. _____

8) $(-11) - 3 =$ _____



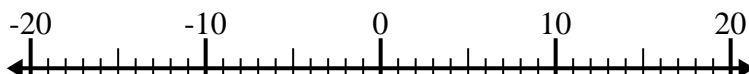
8. _____

9) $(-5) - 2 =$ _____



9. _____

10) $11 - (-4) =$ _____

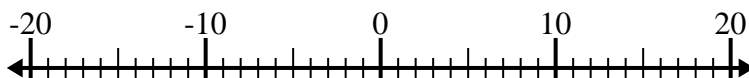


10. _____

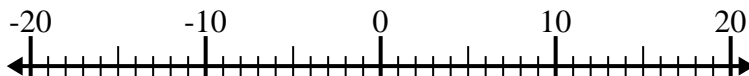


Solve each problem. Use the numberline if needed.

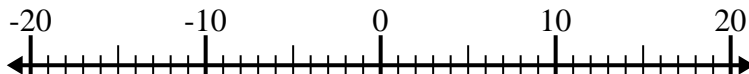
1) $(-12) - (-8) = \underline{-4}$



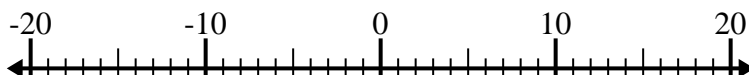
2) $(-7) + (-5) = \underline{-12}$



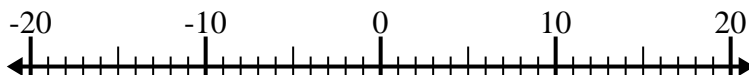
3) $13 + (-4) = \underline{9}$



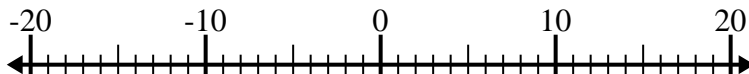
4) $(-6) + 7 = \underline{1}$



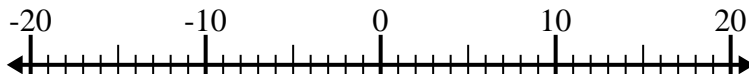
5) $9 + (-10) = \underline{-1}$



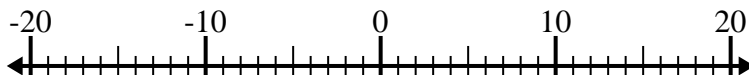
6) $(-2) + 4 = \underline{2}$



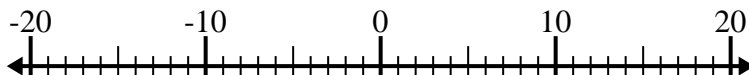
7) $(-6) - (-15) = \underline{9}$



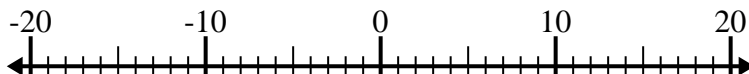
8) $(-11) - 3 = \underline{-14}$



9) $(-5) - 2 = \underline{-7}$



10) $11 - (-4) = \underline{15}$



Answers

1. **-4**

2. **-12**

3. **9**

4. **1**

5. **-1**

6. **2**

7. **9**

8. **-14**

9. **-7**

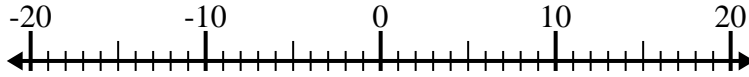
10. **15**



Solve each problem. Use the numberline if needed.

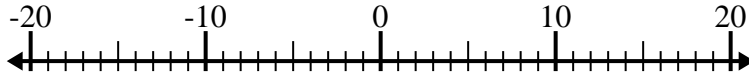
Answers

1) $(-4) - (-5) =$ _____



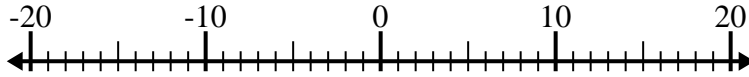
1. _____

2) $5 - (-12) =$ _____



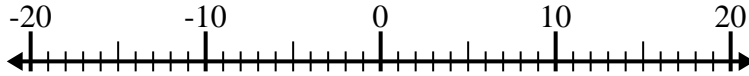
2. _____

3) $(-4) - (-13) =$ _____



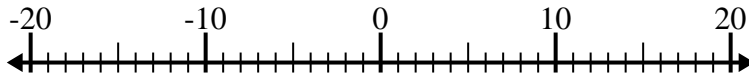
3. _____

4) $12 + (-10) =$ _____



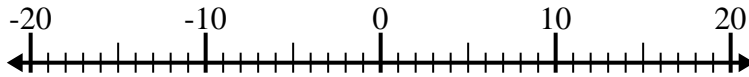
4. _____

5) $(-1) - 13 =$ _____



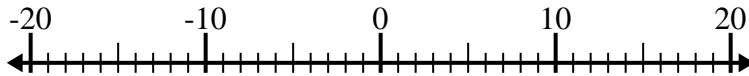
5. _____

6) $(-5) + 15 =$ _____



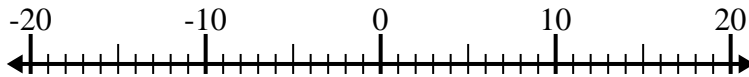
6. _____

7) $(-11) + 1 =$ _____



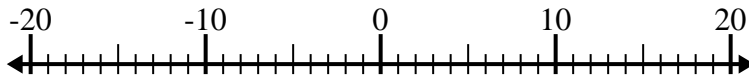
7. _____

8) $14 - (-4) =$ _____



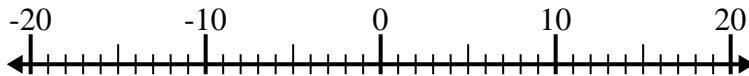
8. _____

9) $(-2) - 14 =$ _____



9. _____

10) $(-4) + (-1) =$ _____

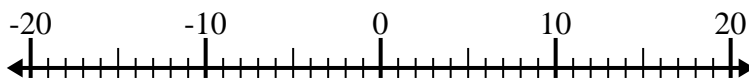


10. _____

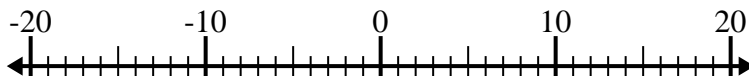


Solve each problem. Use the numberline if needed.

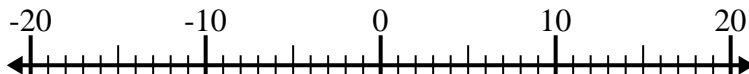
1) $(-4) - (-5) = \underline{1}$



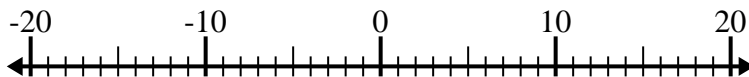
2) $5 - (-12) = \underline{17}$



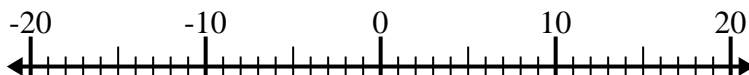
3) $(-4) - (-13) = \underline{9}$



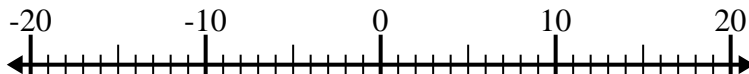
4) $12 + (-10) = \underline{2}$



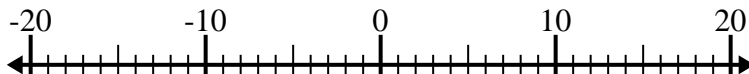
5) $(-1) - 13 = \underline{-14}$



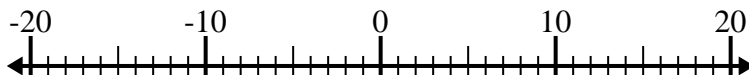
6) $(-5) + 15 = \underline{10}$



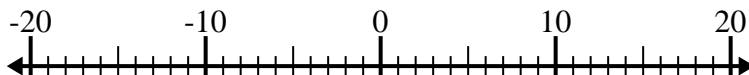
7) $(-11) + 1 = \underline{-10}$



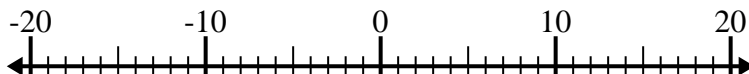
8) $14 - (-4) = \underline{18}$



9) $(-2) - 14 = \underline{-16}$



10) $(-4) + (-1) = \underline{-5}$



Answers

1. 1

2. 17

3. 9

4. 2

5. -14

6. 10

7. -10

8. 18

9. -16

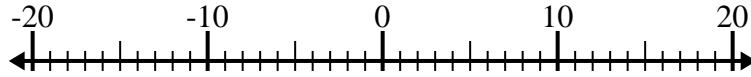
10. -5



Solve each problem. Use the numberline if needed.

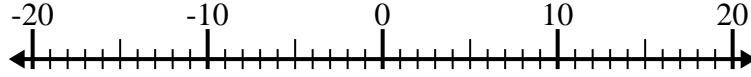
Answers

1) $12 + (-15) =$ _____



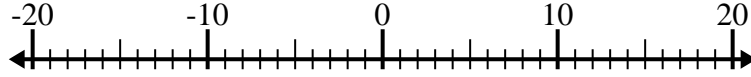
1. _____

2) $(-8) - (-6) =$ _____



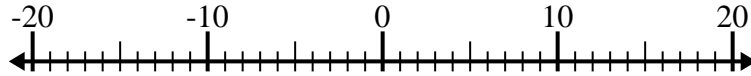
2. _____

3) $5 - (-9) =$ _____



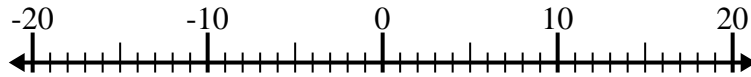
3. _____

4) $(-10) + (-6) =$ _____



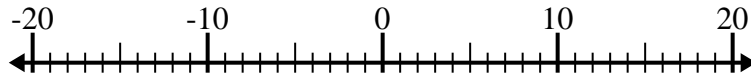
4. _____

5) $3 + (-15) =$ _____



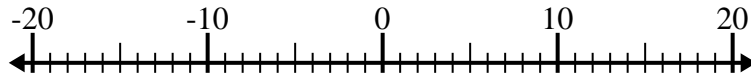
5. _____

6) $(-12) - (-14) =$ _____



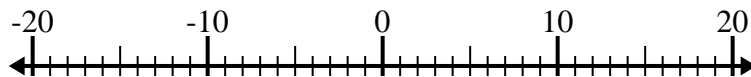
6. _____

7) $(-11) - 7 =$ _____



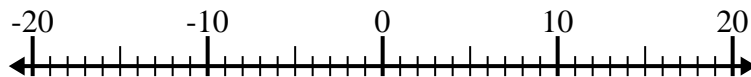
7. _____

8) $(-4) + 10 =$ _____



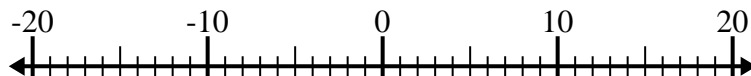
8. _____

9) $(-13) - 2 =$ _____



9. _____

10) $(-13) + (-7) =$ _____

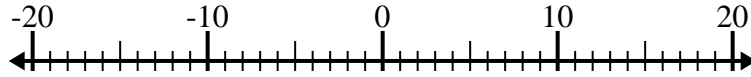


10. _____

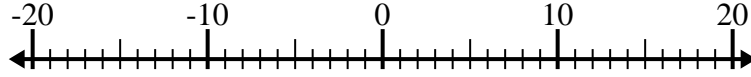


Solve each problem. Use the numberline if needed.

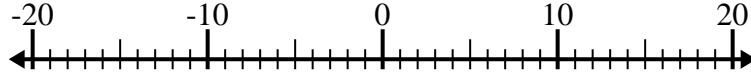
1) $12 + (-15) = \underline{-3}$



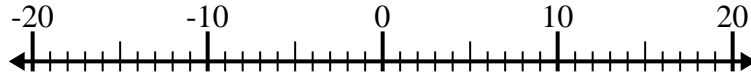
2) $(-8) - (-6) = \underline{-2}$



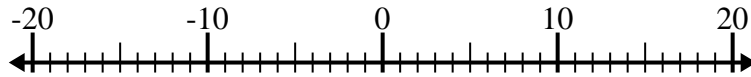
3) $5 - (-9) = \underline{14}$



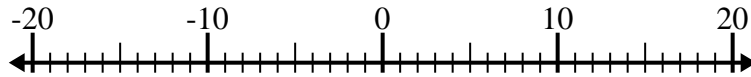
4) $(-10) + (-6) = \underline{-16}$



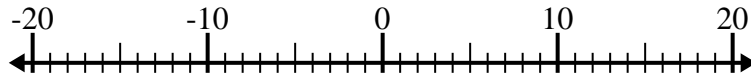
5) $3 + (-15) = \underline{-12}$



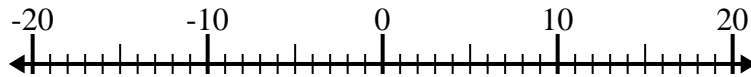
6) $(-12) - (-14) = \underline{2}$



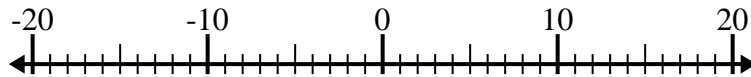
7) $(-11) - 7 = \underline{-18}$



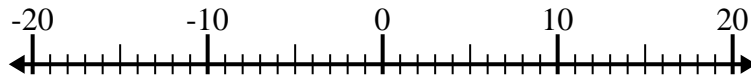
8) $(-4) + 10 = \underline{6}$



9) $(-13) - 2 = \underline{-15}$



10) $(-13) + (-7) = \underline{-20}$



Answers

1. **-3**

2. **-2**

3. **14**

4. **-16**

5. **-12**

6. **2**

7. **-18**

8. **6**

9. **-15**

10. **-20**



Solve each problem. Use the numberline if needed.

Answers

1) $(-4) - (-1) =$ _____



1. _____

2) $(-11) + 14 =$ _____



2. _____

3) $(-8) - 12 =$ _____



3. _____

4) $4 + (-5) =$ _____



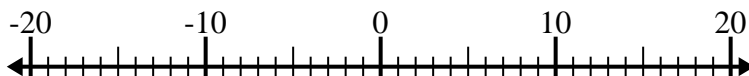
4. _____

5) $11 - (-3) =$ _____



5. _____

6) $(-13) - 6 =$ _____



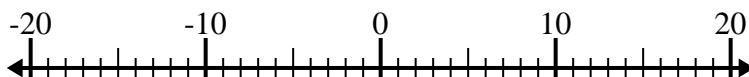
6. _____

7) $12 + (-8) =$ _____



7. _____

8) $(-7) - (-12) =$ _____



8. _____

9) $(-3) + (-1) =$ _____



9. _____

10) $(-5) + 2 =$ _____

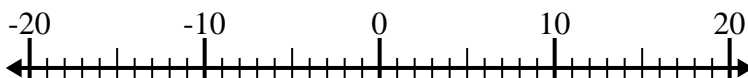


10. _____

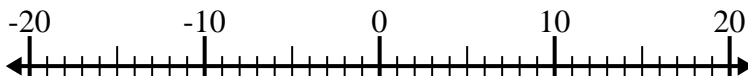


Solve each problem. Use the numberline if needed.

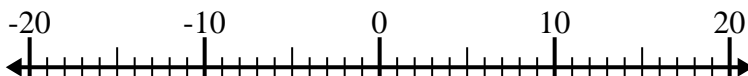
1) $(-4) - (-1) = \underline{-3}$



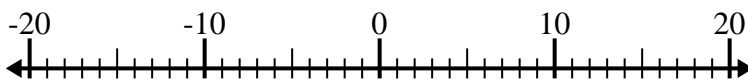
2) $(-11) + 14 = \underline{3}$



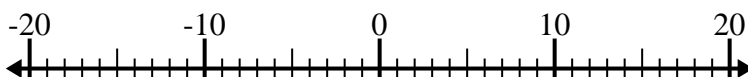
3) $(-8) - 12 = \underline{-20}$



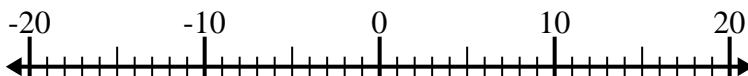
4) $4 + (-5) = \underline{-1}$



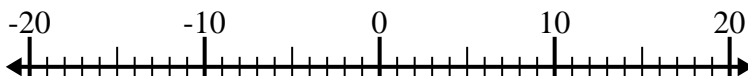
5) $11 - (-3) = \underline{14}$



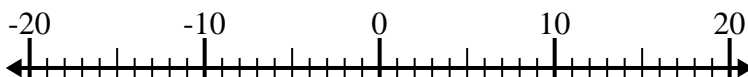
6) $(-13) - 6 = \underline{-19}$



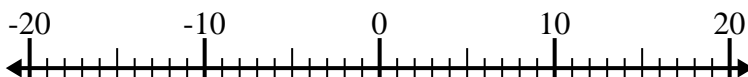
7) $12 + (-8) = \underline{4}$



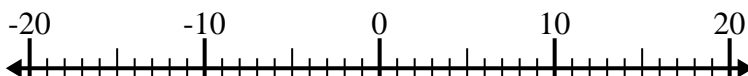
8) $(-7) - (-12) = \underline{5}$



9) $(-3) + (-1) = \underline{-4}$



10) $(-5) + 2 = \underline{-3}$

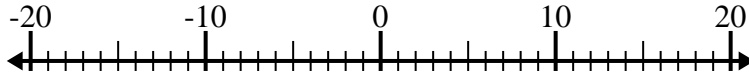
**Answers**1. **-3**2. **3**3. **-20**4. **-1**5. **14**6. **-19**7. **4**8. **5**9. **-4**10. **-3**



Solve each problem. Use the numberline if needed.

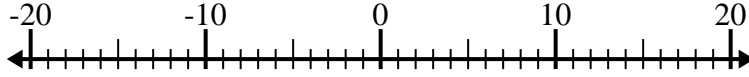
Answers

1) $(-9) - 11 =$ _____



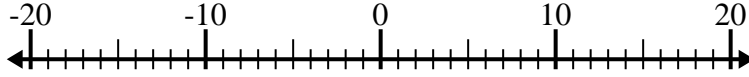
1. _____

2) $(-14) - (-1) =$ _____



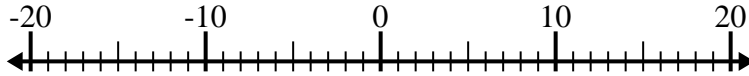
2. _____

3) $7 + (-1) =$ _____



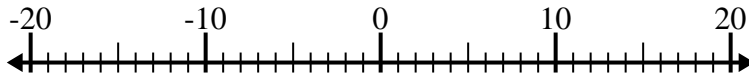
3. _____

4) $(-13) + (-3) =$ _____



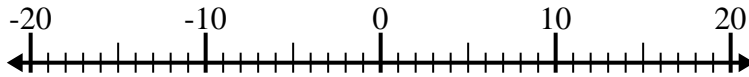
4. _____

5) $11 + (-15) =$ _____



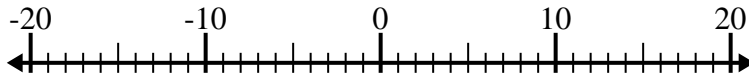
5. _____

6) $10 - (-4) =$ _____



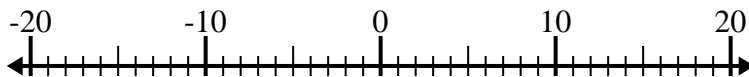
6. _____

7) $(-4) - 9 =$ _____



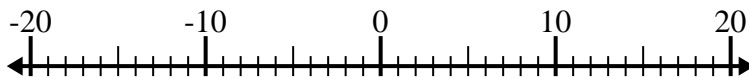
7. _____

8) $3 - (-14) =$ _____



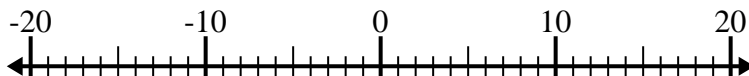
8. _____

9) $(-3) + 6 =$ _____



9. _____

10) $(-10) - (-7) =$ _____

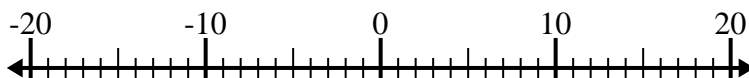


10. _____

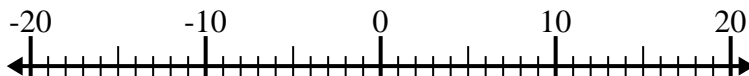


Solve each problem. Use the numberline if needed.

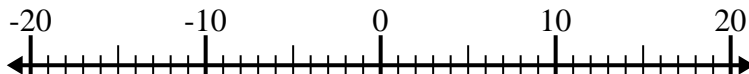
1) $(-9) - 11 = \underline{-20}$



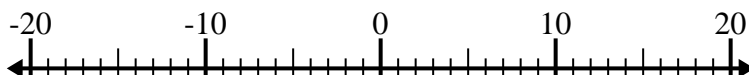
2) $(-14) - (-1) = \underline{-13}$



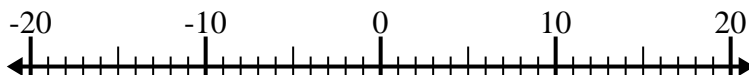
3) $7 + (-1) = \underline{6}$



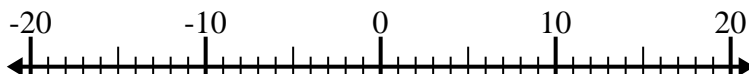
4) $(-13) + (-3) = \underline{-16}$



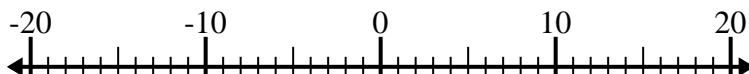
5) $11 + (-15) = \underline{-4}$



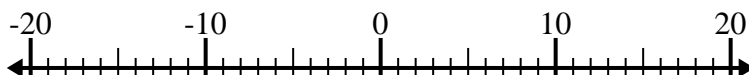
6) $10 - (-4) = \underline{14}$



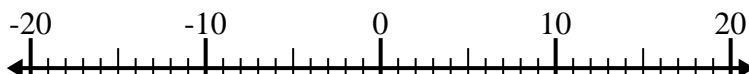
7) $(-4) - 9 = \underline{-13}$



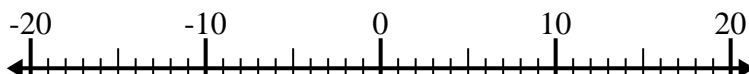
8) $3 - (-14) = \underline{17}$



9) $(-3) + 6 = \underline{3}$



10) $(-10) - (-7) = \underline{-3}$



Answers

1. **-20**

2. **-13**

3. **6**

4. **-16**

5. **-4**

6. **14**

7. **-13**

8. **17**

9. **3**

10. **-3**