



Express each set as a multiplication problem.

Answers

Ex)

Ex. $6 \times 7 = 42$

1)

1. _____
2. _____

2)

3. _____
4. _____

3)

5. _____
6. _____

4)

7. _____
8. _____

5)


6)

7)

8)

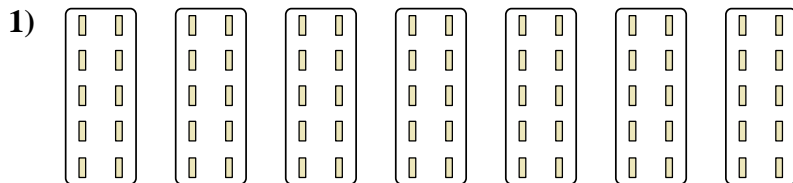


Express each set as a multiplication problem.



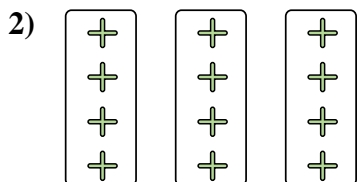
Answers

Ex. 6x7=42




1. 7x10=70

2. 3x4=12



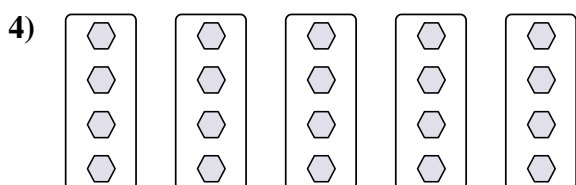
3. 3x7=21

4. 5x4=20



5. 7x4=28

6. 4x9=36



7. 4x10=40

8. 2x8=16

