



Express each set as a multiplication problem.

**Answers**

Ex)

Ex.  $6 \times 7 = 42$

1)

1. \_\_\_\_\_  
2. \_\_\_\_\_

2)

3. \_\_\_\_\_  
4. \_\_\_\_\_

3)

5. \_\_\_\_\_  
6. \_\_\_\_\_

4)

7. \_\_\_\_\_  
8. \_\_\_\_\_

5)


6)

7)

8)

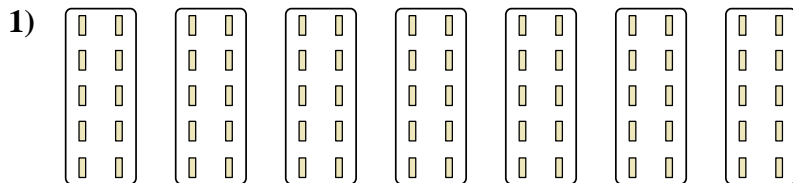


Express each set as a multiplication problem.



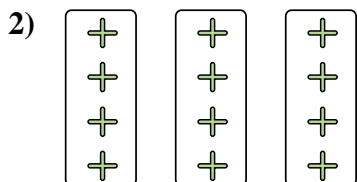
Answers

Ex. 6×7=42




1. 7×10=70

2. 3×4=12



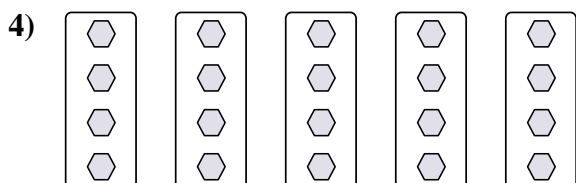
3. 3×7=21

4. 5×4=20



5. 7×4=28

6. 4×9=36



7. 4×10=40

8. 2×8=16

