



Express each set as a multiplication problem.

Answers

Ex)

Ex.  $10 \times 10 = 100$

1)

1. \_\_\_\_\_

2. \_\_\_\_\_

2)

3. \_\_\_\_\_

4. \_\_\_\_\_

3)

5. \_\_\_\_\_

6. \_\_\_\_\_

4)

7. \_\_\_\_\_

8. \_\_\_\_\_

5)


6)

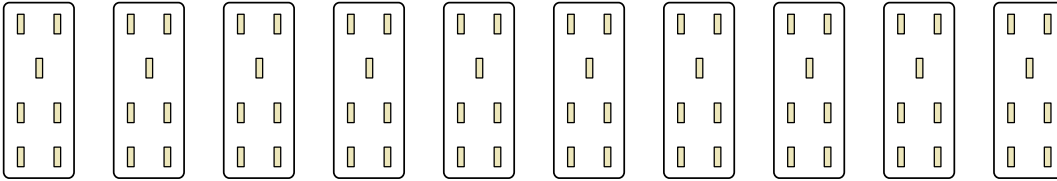
7)


8)




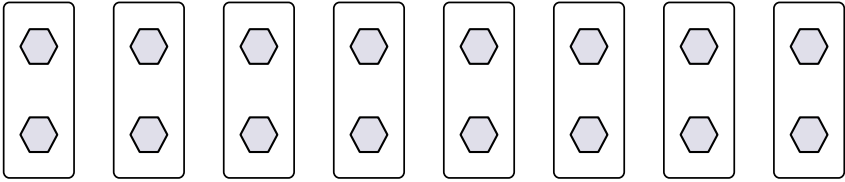
Express each set as a multiplication problem.

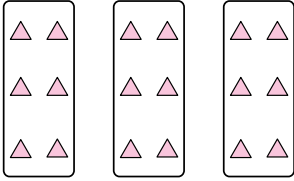
Ex) 

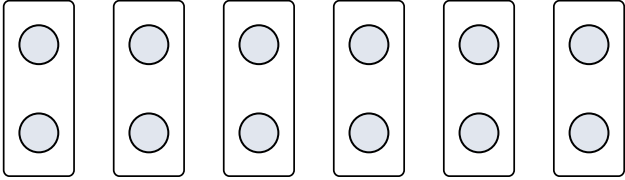
1) 

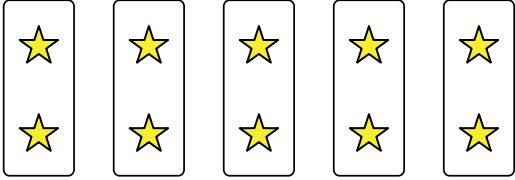
2) 

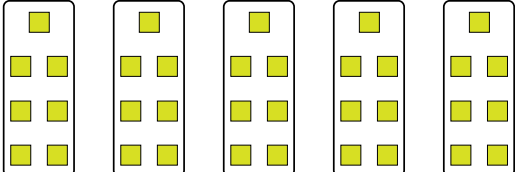
3) 

4) 

5) 

6) 

7) 

8) 

Answers

- Ex.  $10 \times 10 = 100$
1.  $10 \times 7 = 70$
2.  $4 \times 7 = 28$
3.  $10 \times 6 = 60$
4.  $8 \times 2 = 16$
5.  $3 \times 6 = 18$
6.  $6 \times 2 = 12$
7.  $5 \times 2 = 10$
8.  $5 \times 7 = 35$