





Use the array provided to solve each problem.


1) $28 \times 30 =$




2) $23 \times 20 =$




3) $20 \times 25 =$




4) $28 \times 20 =$



5) $26 \times 20 =$



6) $20 \times 27 =$



Answers

1. _____

2. _____

3. _____

4. _____

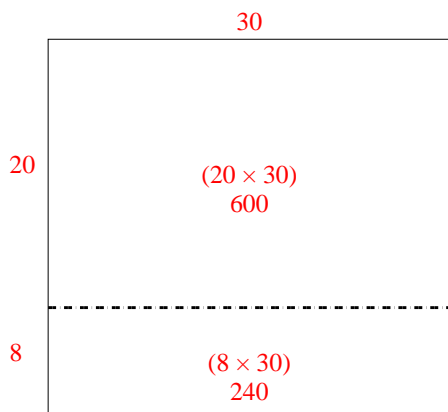
5. _____

6. _____

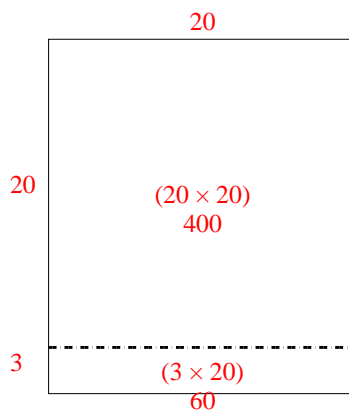


Use the array provided to solve each problem.

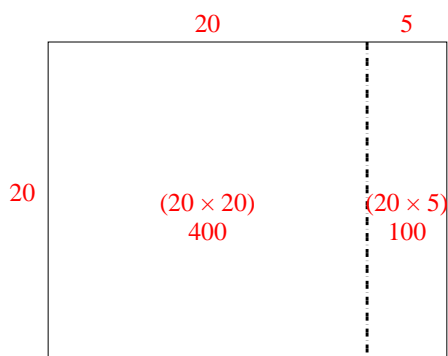
1) $28 \times 30 =$



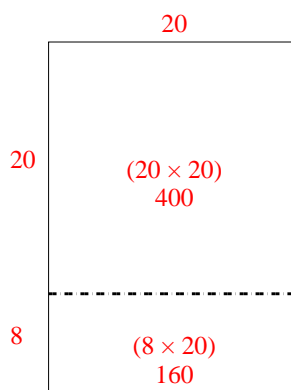
2) $23 \times 20 =$



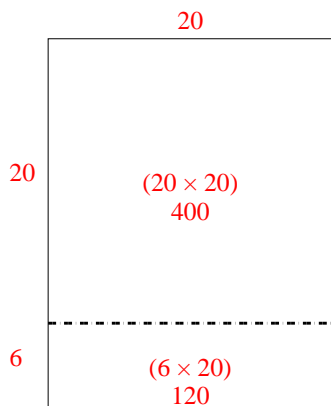
3) $20 \times 25 =$



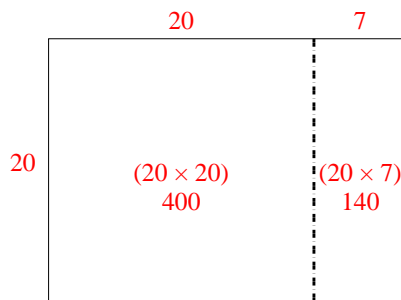
4) $28 \times 20 =$



5) $26 \times 20 =$



6) $20 \times 27 =$



Answers

1. **840**

2. **460**

3. **500**

4. **560**

5. **520**

6. **540**