





Use the array provided to solve each problem.


1) $10 \times 21 =$




2) $14 \times 10 =$




3) $10 \times 15 =$




4) $12 \times 10 =$



5) $16 \times 10 =$



6) $10 \times 18 =$



Answers

1. _____

2. _____

3. _____

4. _____

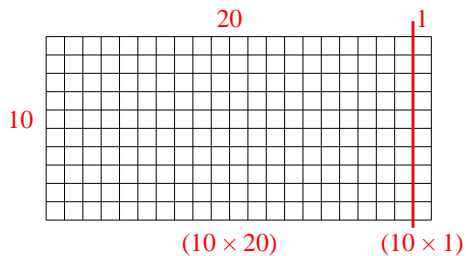
5. _____

6. _____

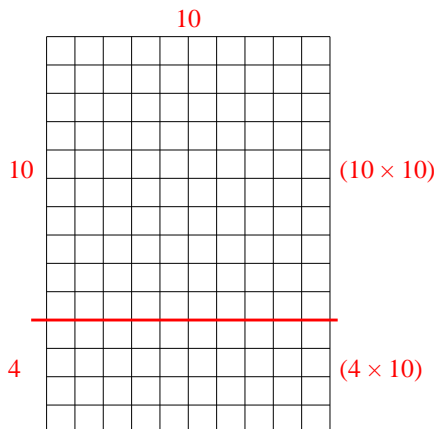


Use the array provided to solve each problem.

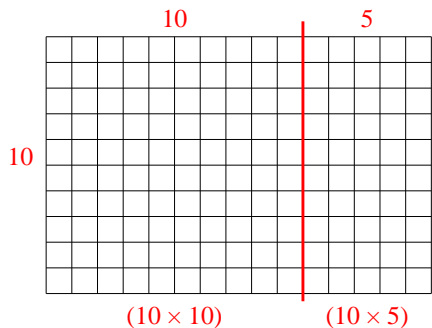
1) $10 \times 21 =$



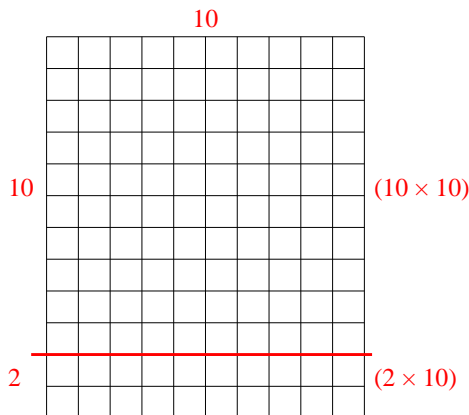
2) $14 \times 10 =$



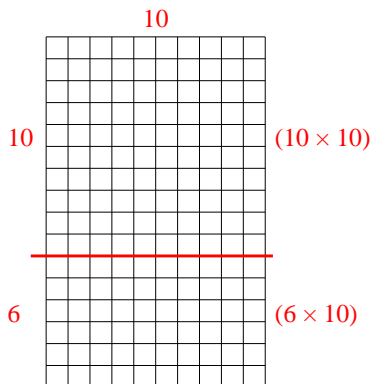
3) $10 \times 15 =$



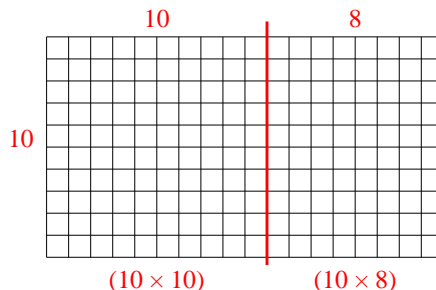
4) $12 \times 10 =$



5) $16 \times 10 =$



6) $10 \times 18 =$



Answers

1. 210

2. 140

3. 150

4. 120

5. 160

6. 180