





Use the array provided to solve each problem.


1) $22 \times 10 =$




2) $10 \times 14 =$




3) $17 \times 10 =$




4) $10 \times 17 =$



5) $10 \times 12 =$



6) $16 \times 10 =$



Answers

1. _____

2. _____

3. _____

4. _____

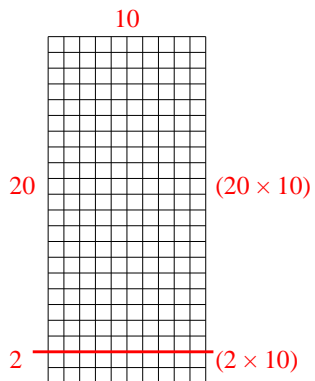
5. _____

6. _____

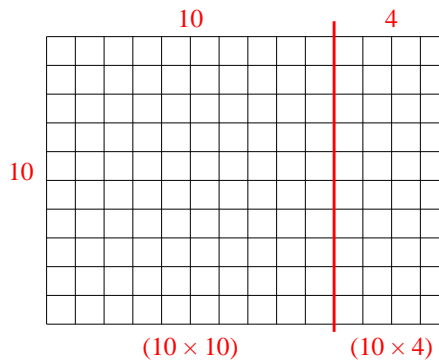


Use the array provided to solve each problem.

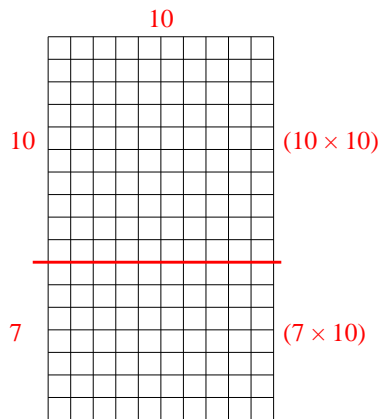
1) $22 \times 10 =$



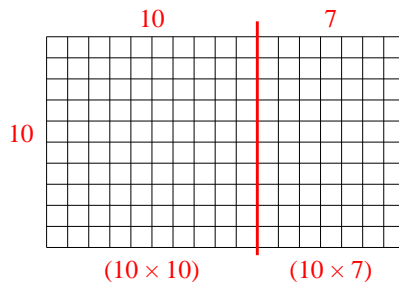
2) $10 \times 14 =$



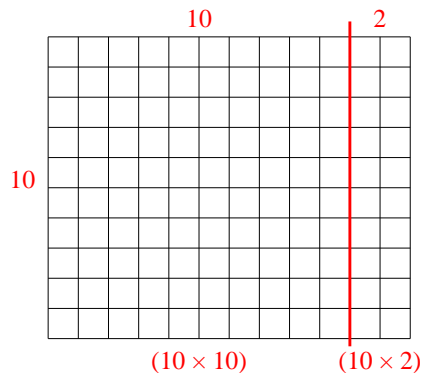
3) $17 \times 10 =$



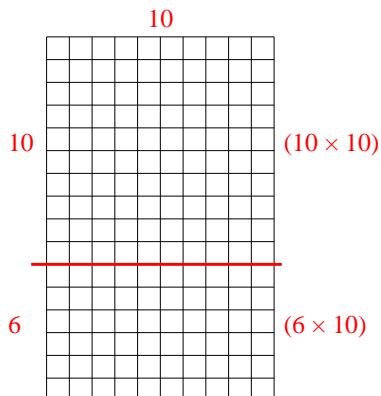
4) $10 \times 17 =$



5) $10 \times 12 =$



6) $16 \times 10 =$



Answers

1. **220**

2. **140**

3. **170**

4. **170**

5. **120**

6. **160**