





Use the array provided to solve each problem.


1) $16 \times 10 =$




2) $10 \times 12 =$




3) $19 \times 10 =$




4) $10 \times 19 =$



5) $15 \times 10 =$



6) $10 \times 18 =$



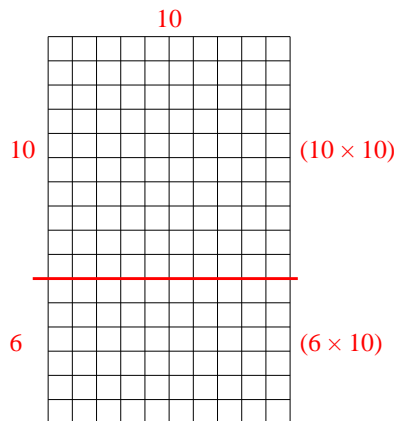
Answers

- 1. _____
- 2. _____
- 3. _____
- 4. _____
- 5. _____
- 6. _____

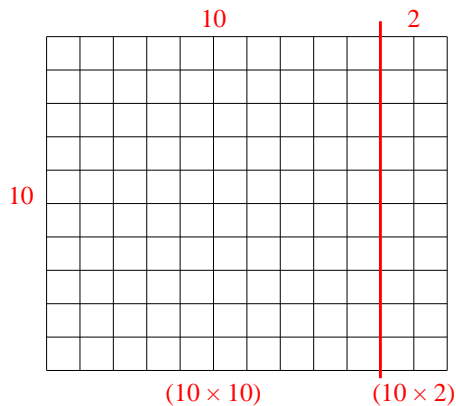


Use the array provided to solve each problem.

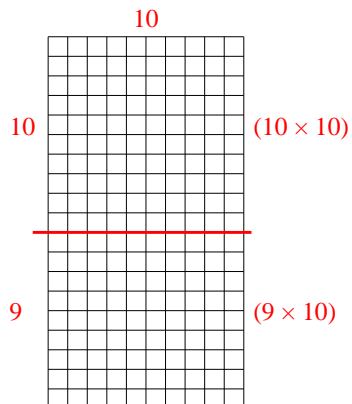
1) $16 \times 10 =$



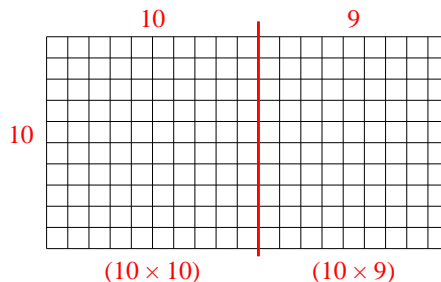
2) $10 \times 12 =$



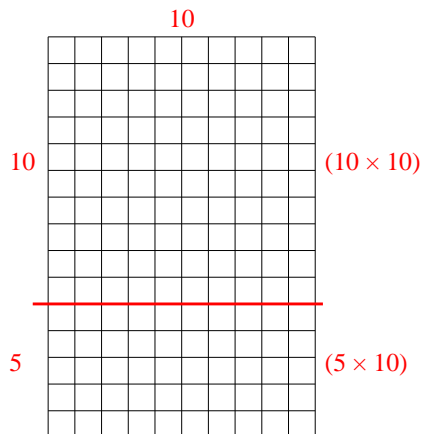
3) $19 \times 10 =$



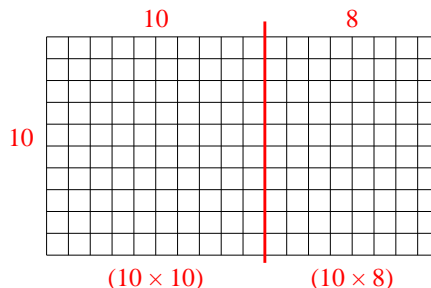
4) $10 \times 19 =$



5) $15 \times 10 =$



6) $10 \times 18 =$



Answers

1. 160

2. 120

3. 190

4. 190

5. 150

6. 180