





Use the array provided to solve each problem.


1) $29 \times 20 =$




2) $18 \times 10 =$




3) $11 \times 10 =$




4) $17 \times 10 =$



5) $10 \times 18 =$



6) $10 \times 11 =$



Answers

1. _____

2. _____

3. _____

4. _____

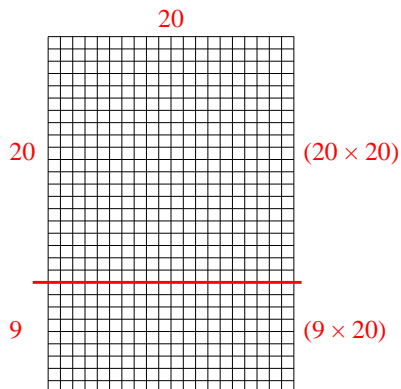
5. _____

6. _____

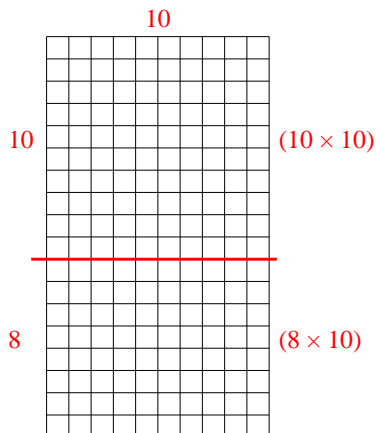


Use the array provided to solve each problem.

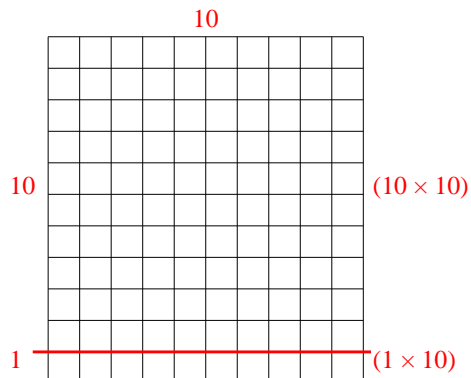
1) $29 \times 20 =$



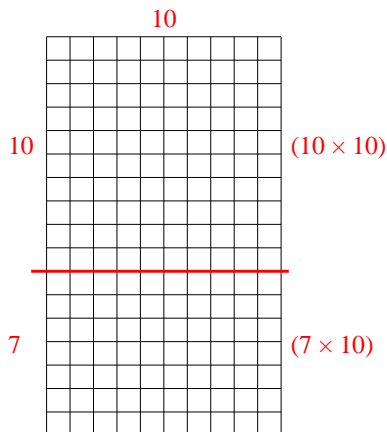
2) $18 \times 10 =$



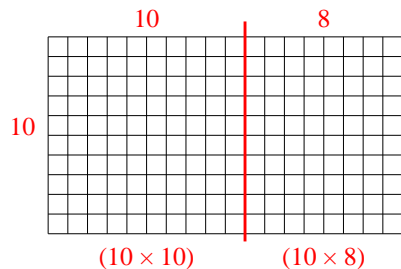
3) $11 \times 10 =$



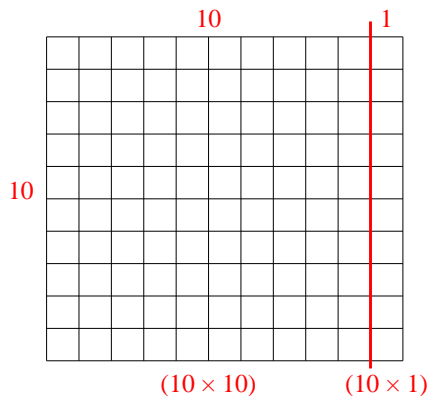
4) $17 \times 10 =$



5) $10 \times 18 =$



6) $10 \times 11 =$



Answers

1. **580**

2. **180**

3. **110**

4. **170**

5. **180**

6. **110**