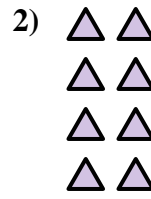
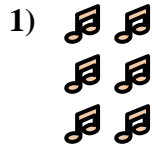
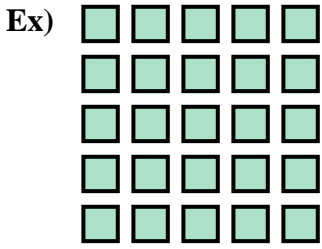




Write an equation to express the array and then find the number of shapes.

Answers





Ex. $5 \times 5 = 25$

1. _____

2. _____

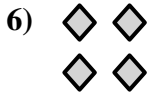
3. _____



4. _____

5. _____

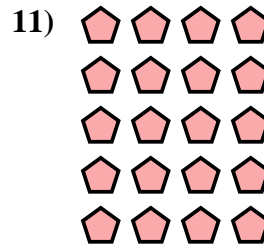
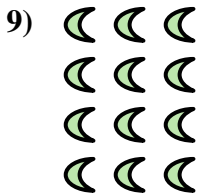
6. _____



7. _____

8. _____

9. _____



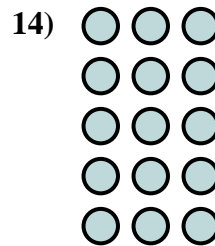
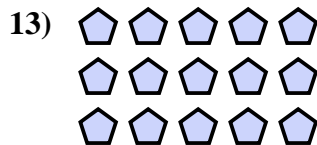
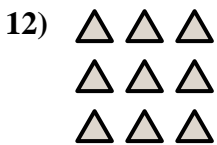
10. _____

11. _____

12. _____

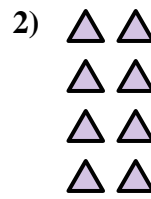
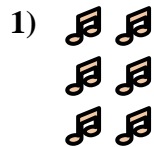
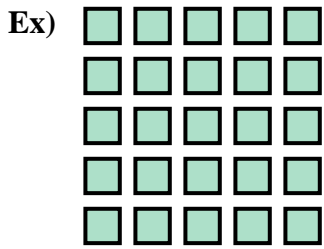
13. _____

14. _____







Write an equation to express the array and then find the number of shapes.



Answers

Ex. $5 \times 5 = 25$



1. $3 \times 2 = 6$

2. $4 \times 2 = 8$

3. $2 \times 3 = 6$

4. $4 \times 5 = 20$

5. $5 \times 2 = 10$

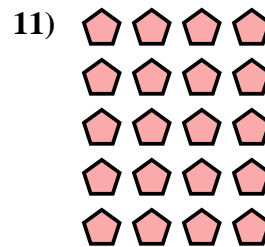

6. $2 \times 2 = 4$

7. $3 \times 4 = 12$



8. $2 \times 5 = 10$

9. $4 \times 3 = 12$



10. $4 \times 4 = 16$

11. $5 \times 4 = 20$

12. $3 \times 3 = 9$

13. $3 \times 5 = 15$

14. $5 \times 3 = 15$

