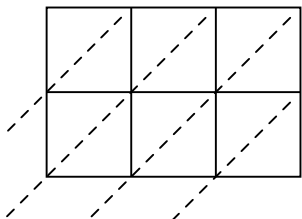




Use lattice multiplication to solve each problem.

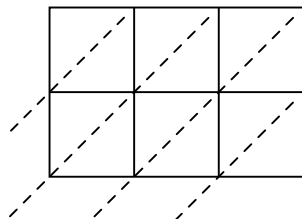
1) $485 \times 11 =$



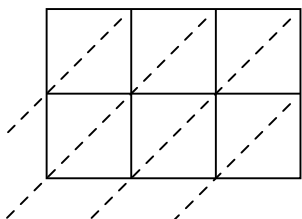
2) $401 \times 55 =$



3) $665 \times 39 =$



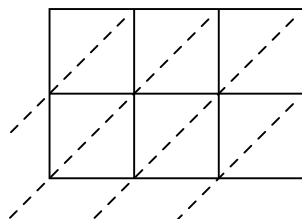
4) $257 \times 58 =$



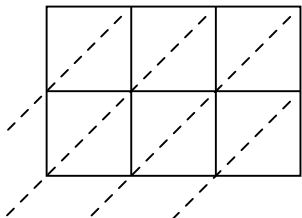
5) $242 \times 51 =$



6) $338 \times 18 =$



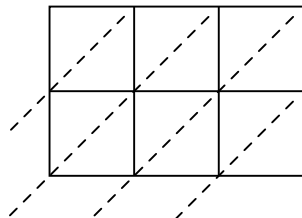
7) $690 \times 32 =$



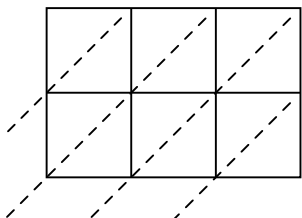
8) $309 \times 90 =$



9) $211 \times 95 =$



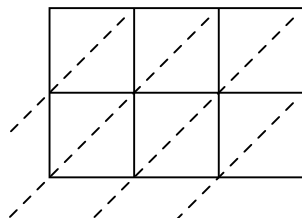
10) $226 \times 83 =$



11) $329 \times 59 =$



12) $306 \times 62 =$



Answers

1. _____

2. _____

3. _____

4. _____

5. _____

6. _____

7. _____

8. _____

9. _____

10. _____

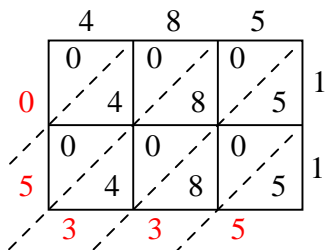
11. _____

12. _____

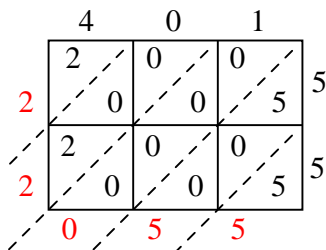


Use lattice multiplication to solve each problem.

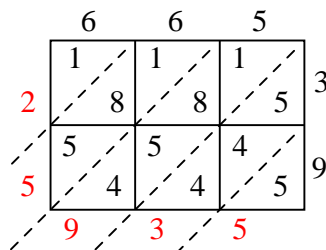
1) $485 \times 11 =$



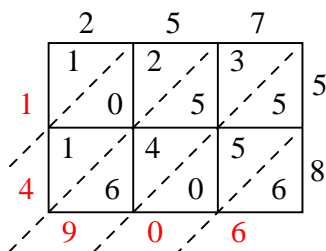
2) $401 \times 55 =$



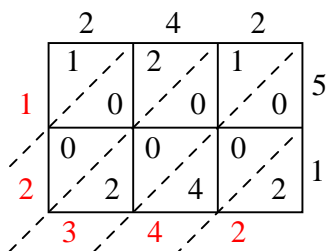
3) $665 \times 39 =$



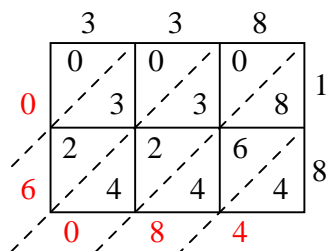
4) $257 \times 58 =$



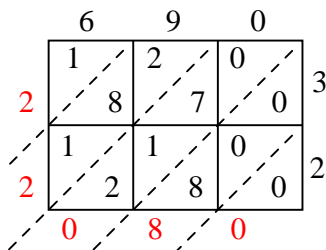
5) $242 \times 51 =$



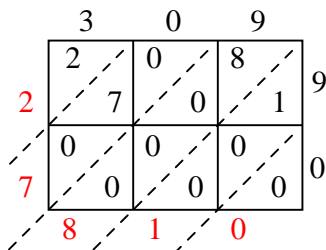
6) $338 \times 18 =$



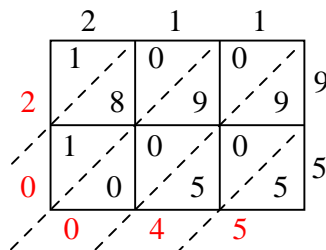
7) $690 \times 32 =$



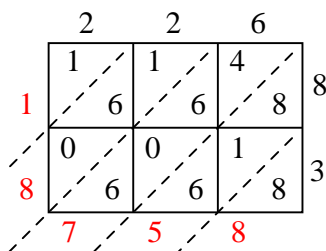
8) $309 \times 90 =$



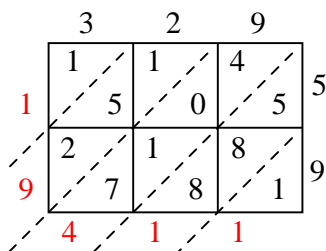
9) $211 \times 95 =$



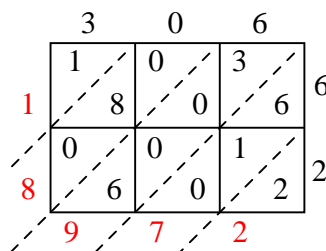
10) $226 \times 83 =$



11) $329 \times 59 =$



12) $306 \times 62 =$



Answers

1. 5,335

2. 22,055

3. 25,935

4. 14,906

5. 12,342

6. 6,084

7. 22,080

8. 27,810

9. 20,045

10. 18,758

11. 19,411

12. 18,972