



Use lattice multiplication to solve each problem.

1)  $43 \times 55 =$



2)  $50 \times 53 =$



3)  $92 \times 51 =$



4)  $73 \times 44 =$



5)  $20 \times 57 =$



6)  $97 \times 90 =$



7)  $81 \times 62 =$



8)  $91 \times 36 =$



9)  $23 \times 53 =$



10)  $74 \times 41 =$



11)  $99 \times 94 =$



12)  $52 \times 89 =$



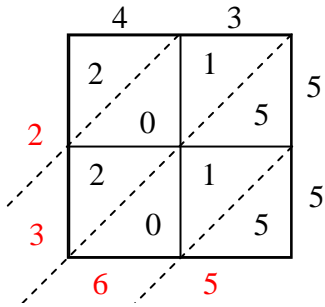
**Answers**

1. \_\_\_\_\_
2. \_\_\_\_\_
3. \_\_\_\_\_
4. \_\_\_\_\_
5. \_\_\_\_\_
6. \_\_\_\_\_
7. \_\_\_\_\_
8. \_\_\_\_\_
9. \_\_\_\_\_
10. \_\_\_\_\_
11. \_\_\_\_\_
12. \_\_\_\_\_

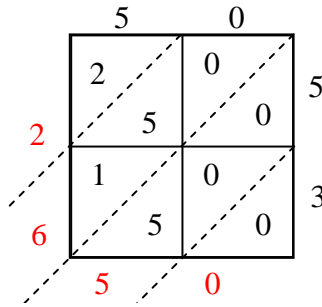


Use lattice multiplication to solve each problem.

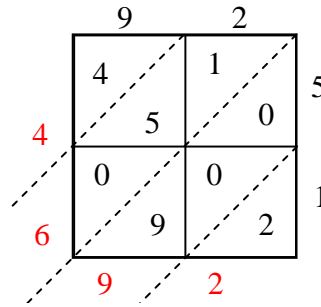
1)  $43 \times 55 =$



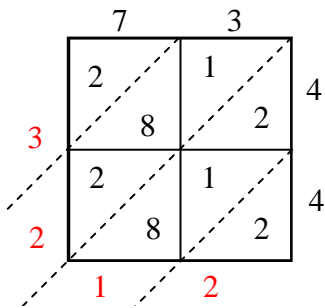
2)  $50 \times 53 =$



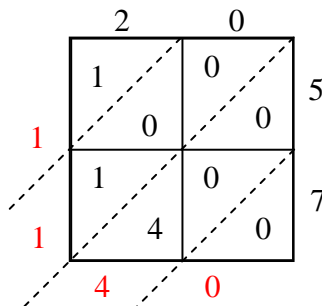
3)  $92 \times 51 =$



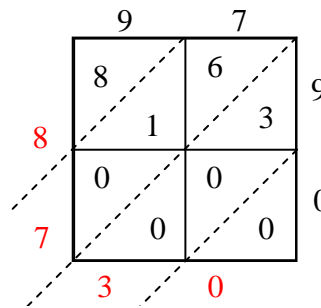
4)  $73 \times 44 =$



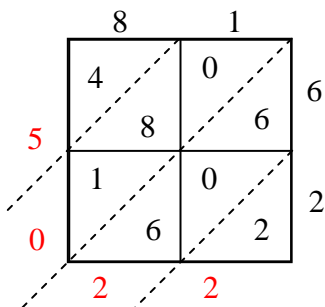
5)  $20 \times 57 =$



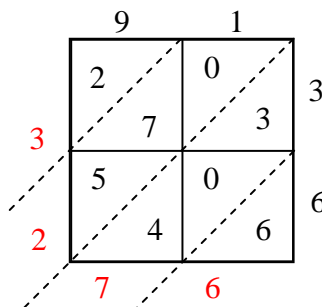
6)  $97 \times 90 =$



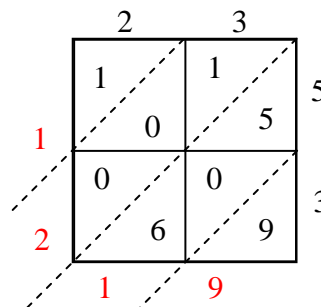
7)  $81 \times 62 =$



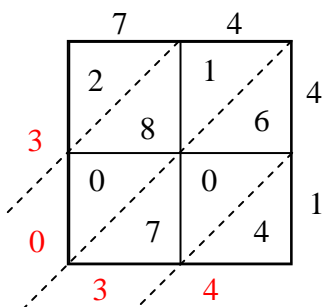
8)  $91 \times 36 =$



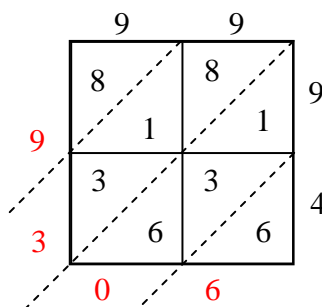
9)  $23 \times 53 =$



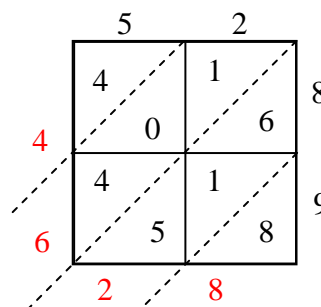
10)  $74 \times 41 =$



11)  $99 \times 94 =$



12)  $52 \times 89 =$



Answers

1. **2,365**

2. **2,650**

3. **4,692**

4. **3,212**

5. **1,140**

6. **8,730**

7. **5,022**

8. **3,276**

9. **1,219**

10. **3,034**

11. **9,306**

12. **4,628**