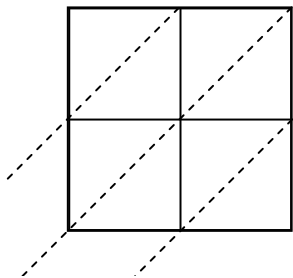


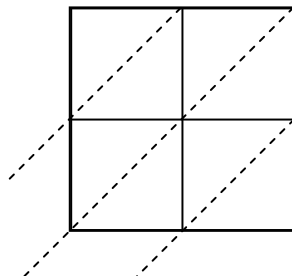


Use lattice multiplication to solve each problem.

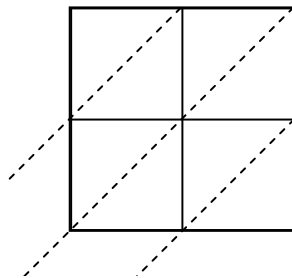
1)  $77 \times 36 =$



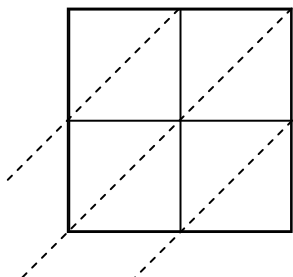
2)  $92 \times 60 =$



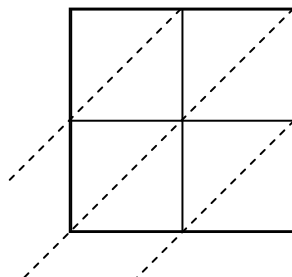
3)  $36 \times 11 =$



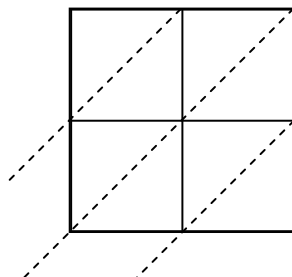
4)  $56 \times 97 =$



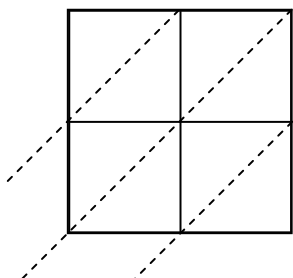
5)  $15 \times 92 =$



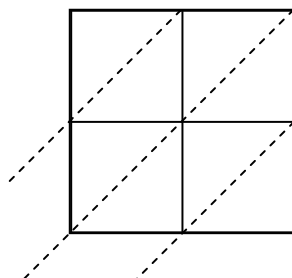
6)  $44 \times 94 =$



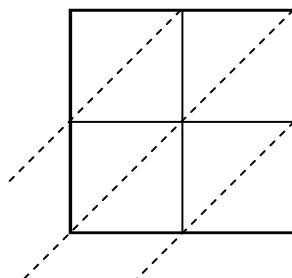
7)  $53 \times 32 =$



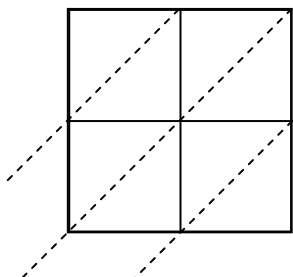
8)  $84 \times 54 =$



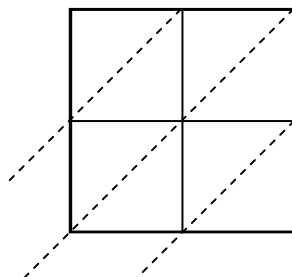
9)  $50 \times 35 =$



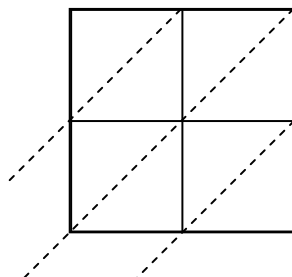
10)  $68 \times 49 =$



11)  $19 \times 74 =$



12)  $80 \times 32 =$



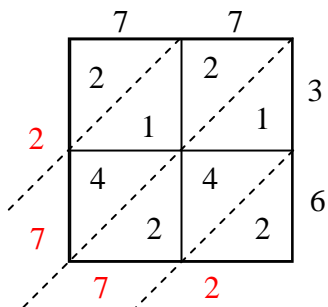
**Answers**

1. \_\_\_\_\_
2. \_\_\_\_\_
3. \_\_\_\_\_
4. \_\_\_\_\_
5. \_\_\_\_\_
6. \_\_\_\_\_
7. \_\_\_\_\_
8. \_\_\_\_\_
9. \_\_\_\_\_
10. \_\_\_\_\_
11. \_\_\_\_\_
12. \_\_\_\_\_

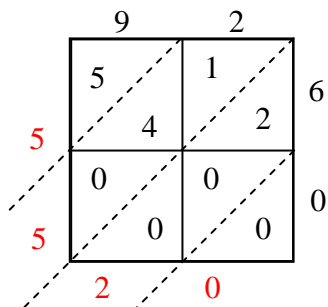


Use lattice multiplication to solve each problem.

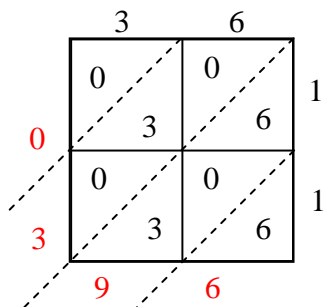
1)  $77 \times 36 =$



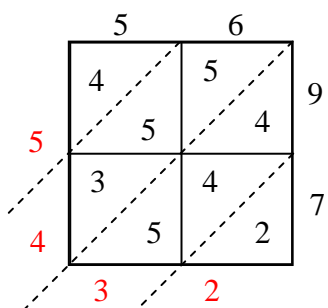
2)  $92 \times 60 =$



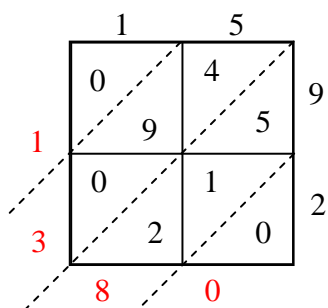
3)  $36 \times 11 =$



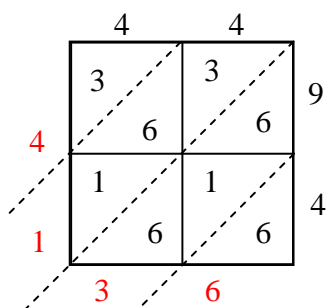
4)  $56 \times 97 =$



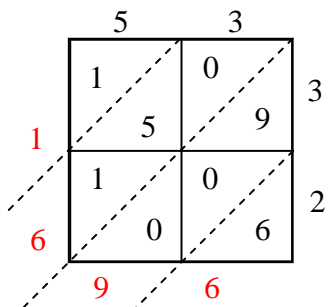
5)  $15 \times 92 =$



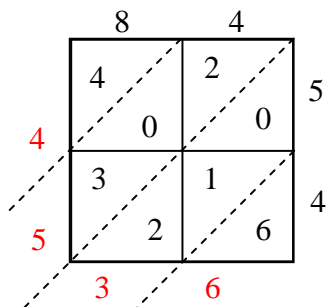
6)  $44 \times 94 =$



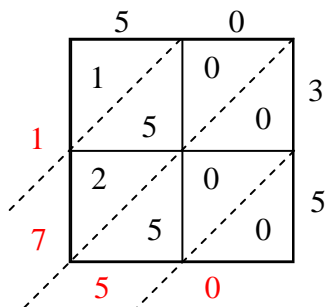
7)  $53 \times 32 =$



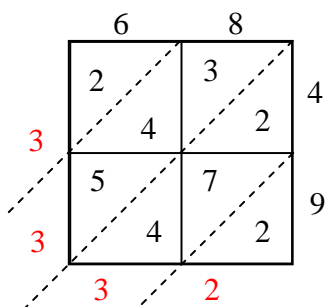
8)  $84 \times 54 =$



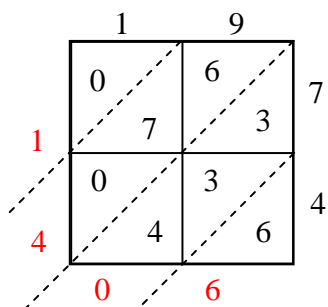
9)  $50 \times 35 =$



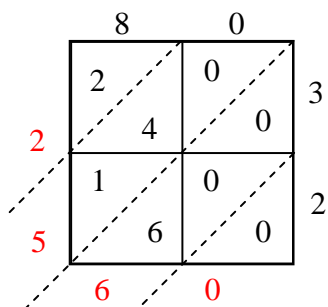
10)  $68 \times 49 =$



11)  $19 \times 74 =$



12)  $80 \times 32 =$



Answers

1. 2,772

2. 5,520

3. 396

4. 5,432

5. 1,380

6. 4,136

7. 1,696

8. 4,536

9. 1,750

10. 3,332

11. 1,406

12. 2,560