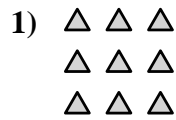
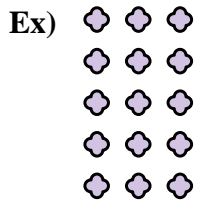




Write each array as an addition problem and solve.

Answers



Ex. 3+3+3+3+3=15

1. \_\_\_\_\_

2. \_\_\_\_\_

3. \_\_\_\_\_

4. \_\_\_\_\_

5. \_\_\_\_\_

6. \_\_\_\_\_

7. \_\_\_\_\_

8. \_\_\_\_\_

9. \_\_\_\_\_

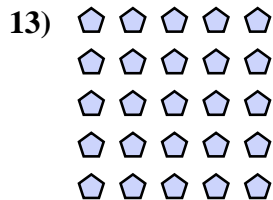

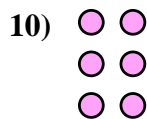
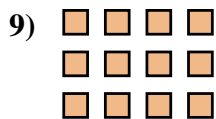

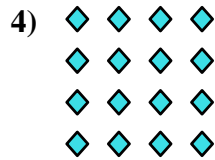

10. \_\_\_\_\_

11. \_\_\_\_\_

12. \_\_\_\_\_

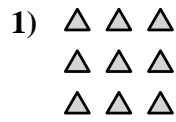
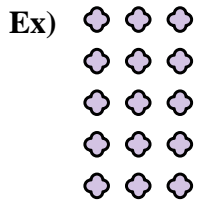
13. \_\_\_\_\_

14. \_\_\_\_\_





Write each array as an addition problem and solve.



Answers

Ex. 3+3+3+3+3=15

1. 3+3+3=9

2. 3+3=6

3. 2+2+2+2=8

4. 4+4+4+4=16

5. 5+5=10

6. 4+4=8

7. 3+3+3+3=12

8. 4+4+4+4+4=20

9. 4+4+4=12

10. 2+2+2=6

11. 5+5+5=15

12. 5+5+5+5=20

13. 5+5+5+5+5=25

14. 2+2=4

