



Determine which choice best describes the coins in the order shown.

Answers

1)



- A. quarter, nickel, penny, dime  
B. nickel, quarter, penny, dime  
C. quarter, penny, dime, nickel  
D. dime, quarter, penny, nickel

1. \_\_\_\_\_

2)



- A. nickel, dime, penny, quarter  
B. nickel, quarter, dime, penny  
C. penny, quarter, dime, nickel  
D. quarter, dime, nickel, penny

2. \_\_\_\_\_

3)



- A. dime, nickel, quarter, penny  
B. penny, dime, quarter, nickel  
C. penny, dime, nickel, quarter  
D. nickel, dime, penny, quarter

3. \_\_\_\_\_

4)



- A. quarter, dime, penny, nickel  
B. nickel, dime, quarter, penny  
C. dime, quarter, nickel, penny  
D. nickel, quarter, dime, penny

4. \_\_\_\_\_


5)



- A. nickel, dime, penny, quarter  
B. penny, nickel, quarter, dime  
C. dime, quarter, nickel, penny  
D. penny, quarter, nickel, dime

5. \_\_\_\_\_

6)



- A. dime, penny, quarter, nickel  
B. quarter, dime, penny, nickel  
C. nickel, quarter, dime, penny  
D. penny, nickel, quarter, dime

6. \_\_\_\_\_

7)



- A. quarter, penny, dime, nickel  
B. nickel, quarter, penny, dime  
C. dime, quarter, nickel, penny  
D. dime, nickel, penny, quarter

7. \_\_\_\_\_

8)



- A. dime, nickel, penny, quarter  
B. nickel, penny, dime, quarter  
C. quarter, dime, nickel, penny  
D. dime, nickel, quarter, penny

8. \_\_\_\_\_




Determine which choice best describes the coins in the order shown.

1)



- A. quarter, nickel, penny, dime  
B. nickel, quarter, penny, dime  
C. quarter, penny, dime, nickel  
D. dime, quarter, penny, nickel

2)



- A. nickel, dime, penny, quarter  
B. nickel, quarter, dime, penny  
C. penny, quarter, dime, nickel  
D. quarter, dime, nickel, penny

3)



- A. dime, nickel, quarter, penny  
B. penny, dime, quarter, nickel  
C. penny, dime, nickel, quarter  
D. nickel, dime, penny, quarter

4)




- A. quarter, dime, penny, nickel  
B. nickel, dime, quarter, penny  
C. dime, quarter, nickel, penny  
D. nickel, quarter, dime, penny

5)



- A. nickel, dime, penny, quarter  
B. penny, nickel, quarter, dime  
C. dime, quarter, nickel, penny  
D. penny, quarter, nickel, dime

6)



- A. dime, penny, quarter, nickel  
B. quarter, dime, penny, nickel  
C. nickel, quarter, dime, penny  
D. penny, nickel, quarter, dime

7)



- A. quarter, penny, dime, nickel  
B. nickel, quarter, penny, dime  
C. dime, quarter, nickel, penny  
D. dime, nickel, penny, quarter

8)



- A. dime, nickel, penny, quarter  
B. nickel, penny, dime, quarter  
C. quarter, dime, nickel, penny  
D. dime, nickel, quarter, penny

Answers1. **C**2. **A**3. **A**4. **B**5. **B**6. **B**7. **D**8. **B**