

**Determine which choice best describes the coins in the order shown.****Answers**

1)



- A. nickel, dime, quarter, penny
B. penny, dime, quarter, nickel
C. nickel, quarter, penny, dime
D. nickel, quarter, dime, penny

1. _____

2. _____

2)



- A. quarter, nickel, penny, dime
B. dime, nickel, quarter, penny
C. penny, nickel, quarter, dime
D. nickel, penny, quarter, dime

3. _____

4. _____

3)



- A. penny, dime, nickel, quarter
B. quarter, dime, nickel, penny
C. quarter, penny, nickel, dime
D. penny, quarter, nickel, dime

5. _____

6. _____

4)



- A. quarter, penny, dime, nickel
B. penny, nickel, quarter, dime
C. quarter, penny, nickel, dime
D. nickel, penny, dime, quarter

7. _____


8. _____

5)




- A. penny, dime, nickel, quarter
B. dime, quarter, nickel, penny
C. quarter, dime, penny, nickel
D. penny, quarter, dime, nickel

6)



- A. dime, penny, quarter, nickel
B. dime, quarter, nickel, penny
C. penny, nickel, quarter, dime
D. quarter, dime, penny, nickel

7)



- A. nickel, quarter, dime, penny
B. quarter, penny, dime, nickel
C. dime, nickel, quarter, penny
D. dime, penny, nickel, quarter

8)



- A. penny, quarter, nickel, dime
B. dime, nickel, quarter, penny
C. quarter, nickel, penny, dime
D. penny, nickel, quarter, dime



Determine which choice best describes the coins in the order shown.

Answers

1)



- A. nickel, dime, quarter, penny
B. penny, dime, quarter, nickel
C. nickel, quarter, penny, dime
D. nickel, quarter, dime, penny

1. **C**

2)



- A. quarter, nickel, penny, dime
B. dime, nickel, quarter, penny
C. penny, nickel, quarter, dime
D. nickel, penny, quarter, dime

2. **D**

3)



- A. penny, dime, nickel, quarter
B. quarter, dime, nickel, penny
C. quarter, penny, nickel, dime
D. penny, quarter, nickel, dime

3. **C**


4)



- A. quarter, penny, dime, nickel
B. penny, nickel, quarter, dime
C. quarter, penny, nickel, dime
D. nickel, penny, dime, quarter

4. **B**


5)



- A. penny, dime, nickel, quarter
B. dime, quarter, nickel, penny
C. quarter, dime, penny, nickel
D. penny, quarter, dime, nickel

5. **C**

6)



- A. dime, penny, quarter, nickel
B. dime, quarter, nickel, penny
C. penny, nickel, quarter, dime
D. quarter, dime, penny, nickel

6. **D**

7)



- A. nickel, quarter, dime, penny
B. quarter, penny, dime, nickel
C. dime, nickel, quarter, penny
D. dime, penny, nickel, quarter

7. **B**

8)



- A. penny, quarter, nickel, dime
B. dime, nickel, quarter, penny
C. quarter, nickel, penny, dime
D. penny, nickel, quarter, dime

8. **A**