

Solve each problem.

Answers

- 1) At the fair Faye spent \$7.00 buying fair food. She gave the cashier a twenty dollar bill. How much change should she get back?




1. _____

2. _____

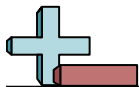
3. _____

- 2) At the book fair Oliver spent \$5.77 buying books. He gave the cashier a ten dollar bill. How much change should he get back?



- 3) Billy spent \$10.74 buying some new toys. He bought them using a twenty dollar bill. How much change should he get back?






Solve each problem.

Answers

- 1) At the fair Faye spent \$7.00 buying fair food. She gave the cashier a twenty dollar bill. How much change should she get back?

1. **B**2. **C**3. **C**

- 2) At the book fair Oliver spent \$5.77 buying books. He gave the cashier a ten dollar bill. How much change should he get back?



- 3) Billy spent \$10.74 buying some new toys. He bought them using a twenty dollar bill. How much change should he get back?

