



Solve each problem.

Answers

- 1) Gwen spent \$6.92 on a movie ticket. She gave the cashier the money shown. How much change should she get back?



1. _____

2. _____

3. _____

- 2) Victor spent \$8.05 buying some new toys. He bought them using the money shown. How much change should he get back?



4. _____

5. _____

6. _____


- 3) At the fair Janet spent \$17.24 buying fair food. She gave the cashier the money shown. How much change should she get back?



- 4) George spent \$17.07 on candy at the mall. He gave the cashier the money shown. How much change should he get back?



- 5) Carol bought a new board game for \$12.24. She gave the cashier the money shown. How much change should she get back?



- 6) Edward bought \$12.97 worth of groceries. He gave the cashier the money shown. How much change should he get back?





Solve each problem.


- 1) Gwen spent \$6.92 on a movie ticket. She gave the cashier the money shown. How much change should she get back?



- 2) Victor spent \$8.05 buying some new toys. He bought them using the money shown. How much change should he get back?




- 3) At the fair Janet spent \$17.24 buying fair food. She gave the cashier the money shown. How much change should she get back?



- 4) George spent \$17.07 on candy at the mall. He gave the cashier the money shown. How much change should he get back?



- 5) Carol bought a new board game for \$12.24. She gave the cashier the money shown. How much change should she get back?



- 6) Edward bought \$12.97 worth of groceries. He gave the cashier the money shown. How much change should he get back?

**Answers**1. **\$14.08**2. **\$2.05**3. **\$0.10**4. **\$2.93**5. **\$0.10**6. **\$7.03**