



Determine the amount of money shown.

Answers




1. _____



2. _____



3. _____



4. _____



5. _____



6. _____




7. _____



8. _____



9. _____



10. _____



10. _____



Counting Change (within a dollar)

Name: **Answer Key**

Determine the amount of money shown.



Answers

1. \$0.65

2. \$0.83

3. \$0.65

4. \$0.99

5. \$0.96

6. \$0.98

7. \$0.99

8. \$0.92

9. \$0.95

10. \$0.94