



Use the units provided to measure the width of each of the bars.

Answers




1. _____




2. _____




3. _____



4. _____



5. _____



6. _____



7. _____



8. _____



9. _____



10. _____



Use the units provided to measure the width of each of the bars.



Answers

1. 5

2. 1

3. 10

4. 7

5. 3

6. 4

7. 8

8. 6

9. 9

10. 2

Cut out and use the units shown to measure the bars on the previous page.

