




Use the units provided to measure the width of each of the bars.



Answers

1. \_\_\_\_\_

2. \_\_\_\_\_

3. \_\_\_\_\_

4. \_\_\_\_\_

5. \_\_\_\_\_

6. \_\_\_\_\_

7. \_\_\_\_\_





8. \_\_\_\_\_

9. \_\_\_\_\_

10. \_\_\_\_\_



Use the units provided to measure the width of each of the bars.



Answers

1. 5

2. 10

3. 13

4. 1

5. 11

6. 15

7. 8

8. 14

9. 6

10. 9

Cut out and use the units shown to measure the bars on the previous page.

