



Measure the width of each block in inches and in centimeters.


Ex)



Answers

Ex. 3 7-8

1)



1. _____

2. _____

2)



3. _____

4. _____

3)



5. _____

6. _____

4)



7. _____


8. _____

5)



9. _____

6)



7)



8)


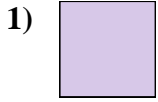


9)





Measure the width of each block in inches and in centimeters.



Answers

Ex. 3 7 - 8

1. 0 1/2 1 - 2

2. 4 10 - 11

3. 2 1/2 6 - 7

4. 3 1/2 8 - 9

5. 5 1/2 13 - 14

6. 2 5 - 6

7. 1 2 - 3

8. 5 12 - 13

9. 4 1/2 11 - 12