



Measure the width of each block in inches and in centimeters.


Ex)



Answers

Ex. 2 1/2 6 - 7

1)



1. _____

2)



2. _____

3)



3. _____

4)



4. _____

5)




5. _____

6)



6. _____

7)



7. _____

8)



8. _____

9)



9. _____



Measure the width of each block in inches and in centimeters.

Ex)



Answers

Ex. 2 1/2 6 - 7

1)



1. 4 1/2 11 - 12

2)



2. 3 7 - 8

3)



3. 5 12 - 13

4)



4. 2 5 - 6

5)




5. 3 1/2 8 - 9

6)



6. 5 1/2 13 - 14

7)



7. 0 1/2 1 - 2

8)



8. 1 2 - 3

9)



9. 4 10 - 11