



Measure the width and height of each block in inches and in centimeters.

Answers

Ex)



Ex. $2\frac{1}{2}$ $1\frac{1}{2}$ **6.4** **3.8**

1. _____

2. _____


3. _____

4. _____


1)




2)



3)



4)





Measure the width and height of each block in inches and in centimeters.

Ex)




Ex. 2 1/2 1 1/2 6.4 3.8

1)




1. 4 0 1/2 10.2 1.3

2)



2. 0 1/2 1 1.3 2.5

3)



3. 3 1 1/2 7.6 3.8

4)



4. 1 1/2 1 3.8 2.5

Answers