



Measure the width and height of each block in inches and in centimeters.

Answers

Ex)



Ex. 3 1/2 0 1/2 **8.9** **1.3**


1. _____

2. _____

3. _____

4. _____


1)




2)



3)




4)





Measure the width and height of each block in inches and in centimeters.

Ex)



Answers

Ex. $3\frac{1}{2}$ $9\frac{1}{2}$ **8.9** **1.3**


1. **1** $1\frac{1}{2}$ **2.5** **3.8**

2. $1\frac{1}{2}$ **1** **3.8** **2.5**

3. $5\frac{1}{2}$ $1\frac{1}{2}$ **14** **3.8**

4. **5** **1** **12.7** **2.5**


1)



2)



3)



4)

