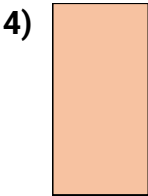






Measure the width and height of each block in inches and in centimeters.



**Answers**

Ex. 1 1 2.5 2.5

1. \_\_\_\_\_

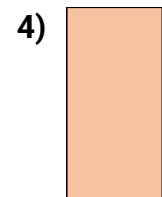


2. \_\_\_\_\_

3. \_\_\_\_\_

4. \_\_\_\_\_



Measure the width and height of each block in inches and in centimeters.



**Answers**

Ex. 1 1 2.5 2.5

1.  $3\frac{1}{2}$   $1\frac{1}{2}$  8.9 3.8

2. 2  $0\frac{1}{2}$  5.1 1.3

3.  $1\frac{1}{2}$   $1\frac{1}{2}$  3.8 3.8

4.  $0\frac{1}{2}$  1 1.3 2.5