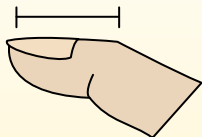



**Determine which letter best represents the length / height.****Answers****Inch (in)**

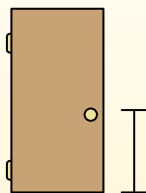
An inch is about the distance of the last joint of your finger.

**Foot (ft)**

A foot is 12 inches. The length of a ruler.

**Yard (yd)**

1 yard is the same as 3 feet. From the floor to a door knob is about 1 yard.

**Mile (mi)**

A mile is 5,280 feet. Most major roads are at least a mile long.




1)



Popcorn

- A. 1 inch
- B. 3 feet
- C. 1 mile
- D. 7 inches

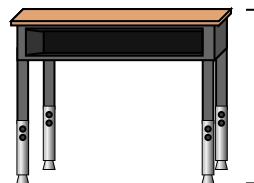
2)



Lollipop

- A. 1 mile
- B. 1 foot
- C. 5 inches
- D. 3 inches


3)



Desk

- A. 2 yards
- B. 2 feet
- C. 11 inches
- D. 6 inches

4)



Ferris Wheel

- A. 6 yards
- B. 1 mile
- C. 75 feet
- D. 100 inches


5)



Toothbrush

- A. 10 feet
- B. 1 yard
- C. 7 inches
- D. 4 inches

6)



Can of Soda

- A. 1 yard
- B. 4 inches
- C. 1 foot
- D. 1 inch

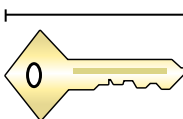
7)



Frog

- A. 2 feet
- B. 1 foot
- C. 3 inches
- D. 9 inches

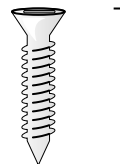
8)



Key

- A. 5 feet
- B. 2 inches
- C. 6 inches
- D. 2 yards

9)



Screw

- A. 1 yard
- B. 10 inches
- C. 8 inches
- D. 1 inch

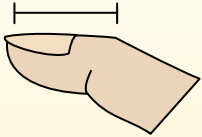
- 1. _____
- 2. _____
- 3. _____
- 4. _____
- 5. _____
- 6. _____
- 7. _____
- 8. _____
- 9. _____



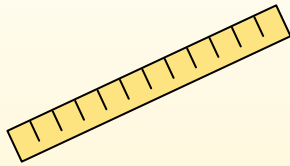
Determine which letter best represents the length / height.

Answers**Inch (in)**

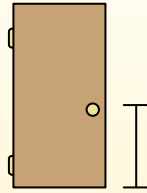
An inch is about the distance of the last joint of your finger.

**Foot (ft)**

A foot is 12 inches. The length of a ruler.

**Yard (yd)**

1 yard is the same as 3 feet. From the floor to a door knob is about 1 yard.

**Mile (mi)**

A mile is 5,280 feet. Most major roads are at least a mile long.




1)



Popcorn

- A. 1 inch
- B. 3 feet
- C. 1 mile
- D. 7 inches

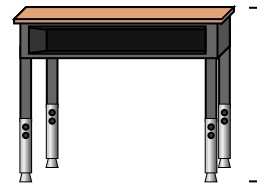
2)



Lollipop

- A. 1 mile
- B. 1 foot
- C. 5 inches
- D. 3 inches


3)



Desk

- A. 2 yards
- B. 2 feet
- C. 11 inches
- D. 6 inches

4)



Ferris Wheel

- A. 6 yards
- B. 1 mile
- C. 75 feet
- D. 100 inches


5)



Toothbrush

- A. 10 feet
- B. 1 yard
- C. 7 inches
- D. 4 inches

6)



Can of Soda

- A. 1 yard
- B. 4 inches
- C. 1 foot
- D. 1 inch

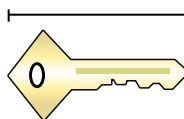
7)



Frog

- A. 2 feet
- B. 1 foot
- C. 3 inches
- D. 9 inches

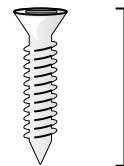
8)



Key

- A. 5 feet
- B. 2 inches
- C. 6 inches
- D. 2 yards

9)



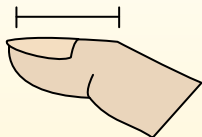
Screw

- A. 1 yard
- B. 10 inches
- C. 8 inches
- D. 1 inch


- 1. **A**
- 2. **C**
- 3. **B**
- 4. **C**
- 5. **C**
- 6. **B**
- 7. **C**
- 8. **B**
- 9. **D**

**Determine which letter best represents the length / height.****Answers****Inch (in)**

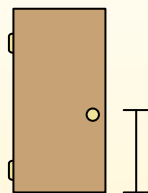
An inch is about the distance of the last joint of your finger.

**Foot (ft)**

A foot is 12 inches. The length of a ruler.

**Yard (yd)**

1 yard is the same as 3 feet. From the floor to a door knob is about 1 yard.

**Mile (mi)**

A mile is 5,280 feet. Most major roads are at least a mile long.



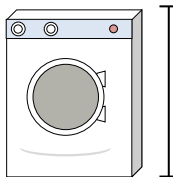
1)



Can of Beans

- A. 1 mile
- B. 2 yards
- C. 4 inches
- D. 4 feet

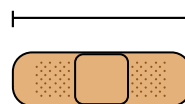
2)



Washing Machine

- A. 1 foot
- B. 4 inches
- C. 2 yards
- D. 3 feet

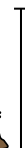

3)



Bandage

- A. 2 feet
- B. 2 miles
- C. 3 inches
- D. 1 yard


4)



Mountain

- A. 10 yards
- B. 20 feet
- C. 2 miles
- D. 300 inches


5)



Slice of Bread

- A. 4 inches
- B. 4 feet
- C. 2 yards
- D. 10 inches

6)



Elephant


- A. 5 feet
- B. 4 yards
- C. 1 mile
- D. 18 inches

7)

Dog

- A. 4 yards
- B. 2 feet
- C. 2 yards
- D. 4 inches

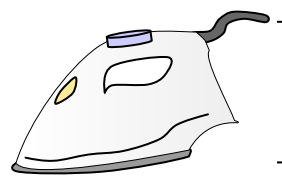
8)



Notebook Paper

- A. 11 inches
- B. 2 feet
- C. 6 inches
- D. 1 yard

9)



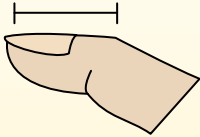
Clothes Iron

- A. 8 feet
- B. 2 feet
- C. 15 inches
- D. 6 inches

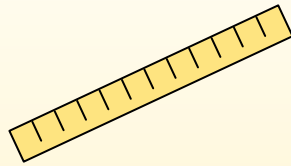
1. _____
2. _____
3. _____
4. _____
5. _____
6. _____
7. _____
8. _____
9. _____

**Determine which letter best represents the length / height.****Answers****Inch (in)**

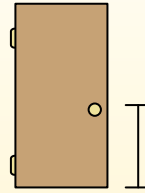
An inch is about the distance of the last joint of your finger.

**Foot (ft)**

A foot is 12 inches. The length of a ruler.

**Yard (yd)**

1 yard is the same as 3 feet. From the floor to a door knob is about 1 yard.

**Mile (mi)**

A mile is 5,280 feet. Most major roads are at least a mile long.



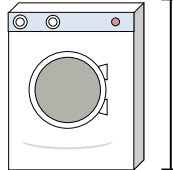
1)



Can of Beans

- A. 1 mile
- B. 2 yards
- C. 4 inches
- D. 4 feet

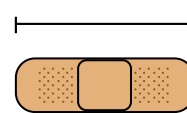
2)



Washing Machine

- A. 1 foot
- B. 4 inches
- C. 2 yards
- D. 3 feet


3)



Bandage

- A. 2 feet
- B. 2 miles
- C. 3 inches
- D. 1 yard


4)



Mountain

- A. 10 yards
- B. 20 feet
- C. 2 miles
- D. 300 inches


5)



Slice of Bread

- A. 4 inches
- B. 4 feet
- C. 2 yards
- D. 10 inches

6)



Elephant


- A. 5 feet
- B. 4 yards
- C. 1 mile
- D. 18 inches

7)

Dog

- A. 4 yards
- B. 2 feet
- C. 2 yards
- D. 4 inches

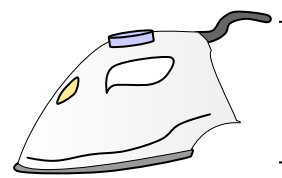
8)



Notebook Paper

- A. 11 inches
- B. 2 feet
- C. 6 inches
- D. 1 yard

9)



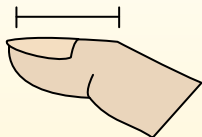
Clothes Iron

- A. 8 feet
- B. 2 feet
- C. 15 inches
- D. 6 inches


1. **C**2. **D**3. **C**4. **C**5. **A**6. **B**7. **B**8. **A**9. **D**

**Determine which letter best represents the length / height.****Answers****Inch (in)**

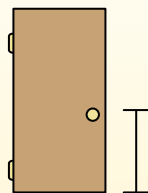
An inch is about the distance of the last joint of your finger.

**Foot (ft)**

A foot is 12 inches. The length of a ruler.

**Yard (yd)**

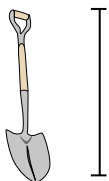
1 yard is the same as 3 feet. From the floor to a door knob is about 1 yard.

**Mile (mi)**

A mile is 5,280 feet. Most major roads are at least a mile long.



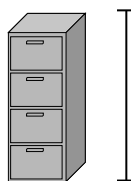
1)



Shovel

- A. 4 feet
- B. 2 feet
- C. 3 yards
- D. 11 inches


2)



File Cabinet

- A. 11 inches
- B. 2 feet
- C. 5 feet
- D. 1 foot


3)



Mountain

- A. 10 yards
- B. 2 miles
- C. 20 feet
- D. 300 inches

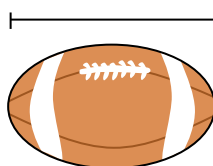
4)



Notebook Paper

- A. 2 feet
- B. 11 inches
- C. 6 inches
- D. 1 yard


5)



Football

- A. 11 inches
- B. 1 inch
- C. 2 feet
- D. 1 yard


6)



Pen

- A. 5 inches
- B. 1 foot
- C. 12 inches
- D. 5 yards

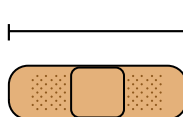
7)



Hammer

- A. 16 inches
- B. 1 inch
- C. 4 inches
- D. 1 yard

8)



Bandage

- A. 3 inches
- B. 1 yard
- C. 2 feet
- D. 2 miles

9)



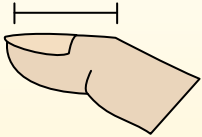
Popcorn

- A. 1 inch
- B. 1 mile
- C. 7 inches
- D. 3 feet

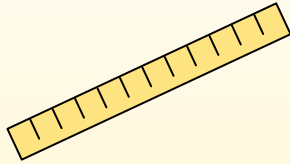
1. _____
2. _____
3. _____
4. _____
5. _____
6. _____
7. _____
8. _____
9. _____

**Determine which letter best represents the length / height.****Inch (in)**

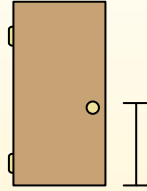
An inch is about the distance of the last joint of your finger.

**Foot (ft)**

A foot is 12 inches. The length of a ruler.

**Yard (yd)**

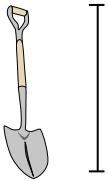
1 yard is the same as 3 feet. From the floor to a door knob is about 1 yard.

**Mile (mi)**

A mile is 5,280 feet. Most major roads are at least a mile long.



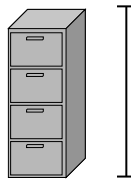
1)



Shovel

- A. 4 feet
- B. 2 feet
- C. 3 yards
- D. 11 inches


2)



File Cabinet

- A. 11 inches
- B. 2 feet
- C. 5 feet
- D. 1 foot


3)



Mountain

- A. 10 yards
- B. 2 miles
- C. 20 feet
- D. 300 inches

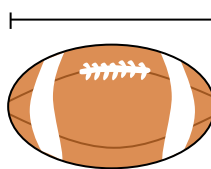
4)



Notebook Paper

- A. 2 feet
- B. 11 inches
- C. 6 inches
- D. 1 yard

5)



Football

- A. 11 inches
- B. 1 inch
- C. 2 feet
- D. 1 yard


6)



Pen

- A. 5 inches
- B. 1 foot
- C. 12 inches
- D. 5 yards

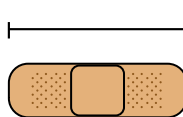
7)



Hammer

- A. 16 inches
- B. 1 inch
- C. 4 inches
- D. 1 yard

8)



Bandage

- A. 3 inches
- B. 1 yard
- C. 2 feet
- D. 2 miles

9)



Popcorn

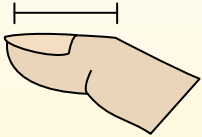
- A. 1 inch
- B. 1 mile
- C. 7 inches
- D. 3 feet

Answers

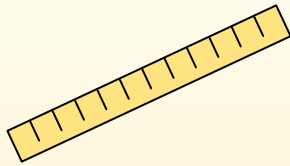
- 1. **A**
- 2. **C**
- 3. **B**
- 4. **B**
- 5. **A**
- 6. **A**
- 7. **A**
- 8. **A**
- 9. **A**

**Determine which letter best represents the length / height.****Answers****Inch (in)**

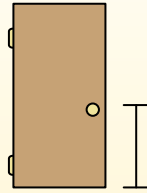
An inch is about the distance of the last joint of your finger.

**Foot (ft)**

A foot is 12 inches. The length of a ruler.

**Yard (yd)**


1 yard is the same as 3 feet. From the floor to a door knob is about 1 yard.

**Mile (mi)**

A mile is 5,280 feet. Most major roads are at least a mile long.



1)



Notebook Paper

- A. 1 yard
- B. 6 inches
- C. 2 feet
- D. 11 inches

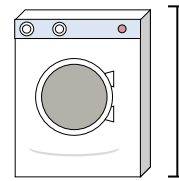
2)



Gallon of Milk

- A. 11 feet
- B. 9 inches
- C. 6 inches
- D. 3 inches

3)



Washing Machine

- A. 4 inches
- B. 1 foot
- C. 3 feet
- D. 2 yards


4)



Glue Stick

- A. 1 foot
- B. 3 inches
- C. 4 miles
- D. 10 inches

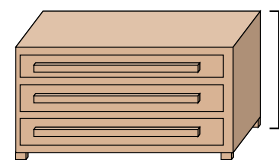
5)



Elephant

- A. 18 inches
- B. 4 yards
- C. 5 feet
- D. 1 mile

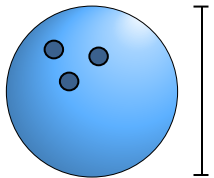
6)



Dresser

- A. 18 inches
- B. 12 inches
- C. 3 feet
- D. 3 yards

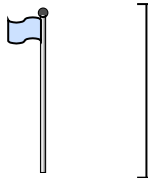
7)



Bowling Ball Height

- A. 4 inches
- B. 1 yard
- C. 10 inches
- D. 10 feet

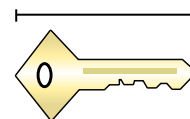
8)



Flag Pole

- A. 1 mile
- B. 10 yards
- C. 12 inches
- D. 5 feet

9)



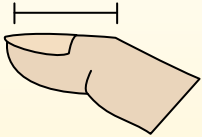
Key

- A. 5 feet
- B. 2 inches
- C. 6 inches
- D. 2 yards

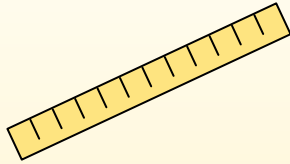
1. _____
2. _____
3. _____
4. _____
5. _____
6. _____
7. _____
8. _____
9. _____

**Determine which letter best represents the length / height.****Answers****Inch (in)**

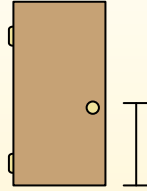
An inch is about the distance of the last joint of your finger.

**Foot (ft)**

A foot is 12 inches. The length of a ruler.

**Yard (yd)**


1 yard is the same as 3 feet. From the floor to a door knob is about 1 yard.

**Mile (mi)**

A mile is 5,280 feet. Most major roads are at least a mile long.




1)



Notebook Paper

- A. 1 yard
- B. 6 inches
- C. 2 feet
- D. 11 inches

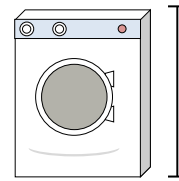
2)



Gallon of Milk

- A. 11 feet
- B. 9 inches
- C. 6 inches
- D. 3 inches

3)



Washing Machine

- A. 4 inches
- B. 1 foot
- C. 3 feet
- D. 2 yards


4)



Glue Stick

- A. 1 foot
- B. 3 inches
- C. 4 miles
- D. 10 inches

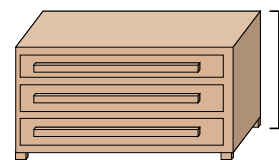
5)



Elephant

- A. 18 inches
- B. 4 yards
- C. 5 feet
- D. 1 mile

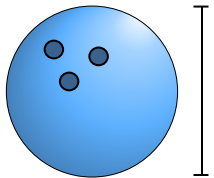
6)



Dresser

- A. 18 inches
- B. 12 inches
- C. 3 feet
- D. 3 yards

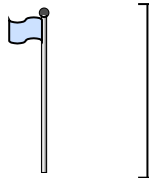
7)



Bowling Ball Height

- A. 4 inches
- B. 1 yard
- C. 10 inches
- D. 10 feet

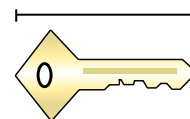
8)



Flag Pole

- A. 1 mile
- B. 10 yards
- C. 12 inches
- D. 5 feet

9)



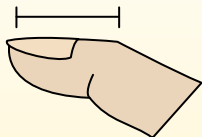
Key

- A. 5 feet
- B. 2 inches
- C. 6 inches
- D. 2 yards


1. **D**2. **B**3. **C**4. **B**5. **B**6. **C**7. **C**8. **B**9. **B**

**Determine which letter best represents the length / height.****Answers****Inch (in)**

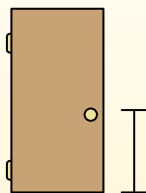
An inch is about the distance of the last joint of your finger.

**Foot (ft)**

A foot is 12 inches. The length of a ruler.

**Yard (yd)**


1 yard is the same as 3 feet. From the floor to a door knob is about 1 yard.

**Mile (mi)**

A mile is 5,280 feet. Most major roads are at least a mile long.




1)



Notebook Paper

- A. 6 inches
- B. 11 inches
- C. 1 yard
- D. 2 feet

2)



Mountain

- A. 20 feet
- B. 2 miles
- C. 300 inches
- D. 10 yards

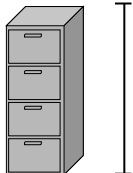
3)



Pen

- A. 5 yards
- B. 12 inches
- C. 5 inches
- D. 1 foot

4)



File Cabinet

- A. 1 foot
- B. 2 feet
- C. 5 feet
- D. 11 inches

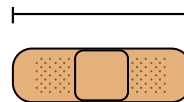
5)



Frog

- A. 1 foot
- B. 2 feet
- C. 3 inches
- D. 9 inches

6)



Bandage

- A. 3 inches
- B. 2 miles
- C. 2 feet
- D. 1 yard

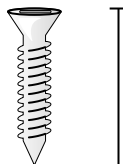
7)



Bug

- A. 3 yards
- B. 1 inch
- C. 1 foot
- D. 3 inches


8)



Screw

- A. 1 inch
- B. 10 inches
- C. 8 inches
- D. 1 yard

9)



Clothes Iron

- A. 15 inches
- B. 6 inches
- C. 2 feet
- D. 8 feet

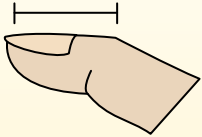
1. _____
2. _____
3. _____
4. _____
5. _____
6. _____
7. _____
8. _____
9. _____



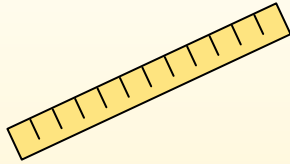
Determine which letter best represents the length / height.

Inch (in)

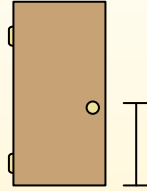
An inch is about the distance of the last joint of your finger.

**Foot (ft)**

A foot is 12 inches. The length of a ruler.

**Yard (yd)**


1 yard is the same as 3 feet. From the floor to a door knob is about 1 yard.

**Mile (mi)**

A mile is 5,280 feet. Most major roads are at least a mile long.



1)



Notebook Paper

- A. 6 inches
- B. 11 inches
- C. 1 yard
- D. 2 feet

2)



Mountain

- A. 20 feet
- B. 2 miles
- C. 300 inches
- D. 10 yards

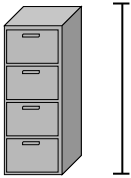
3)



Pen

- A. 5 yards
- B. 12 inches
- C. 5 inches
- D. 1 foot

4)



File Cabinet

- A. 1 foot
- B. 2 feet
- C. 5 feet
- D. 11 inches

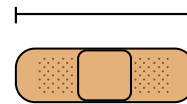
5)



Frog

- A. 1 foot
- B. 2 feet
- C. 3 inches
- D. 9 inches

6)



Bandage

- A. 3 inches
- B. 2 miles
- C. 2 feet
- D. 1 yard

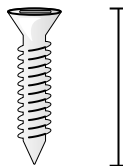
7)



Bug

- A. 3 yards
- B. 1 inch
- C. 1 foot
- D. 3 inches


8)



Screw

- A. 1 inch
- B. 10 inches
- C. 8 inches
- D. 1 yard

9)



Clothes Iron

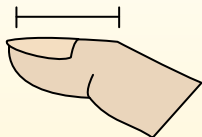
- A. 15 inches
- B. 6 inches
- C. 2 feet
- D. 8 feet

Answers


- 1. **B**
- 2. **B**
- 3. **C**
- 4. **C**
- 5. **C**
- 6. **A**
- 7. **B**
- 8. **A**
- 9. **B**

**Determine which letter best represents the length / height.****Answers****Inch (in)**

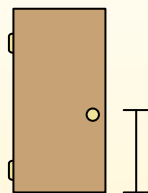
An inch is about the distance of the last joint of your finger.

**Foot (ft)**

A foot is 12 inches. The length of a ruler.

**Yard (yd)**


1 yard is the same as 3 feet. From the floor to a door knob is about 1 yard.

**Mile (mi)**

A mile is 5,280 feet. Most major roads are at least a mile long.




1)



Cooking Pot

- A. 4 inches
- B. 1 inch
- C. 2 feet
- D. 10 inches

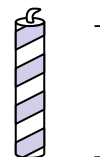
2)



Hammer

- A. 1 yard
- B. 16 inches
- C. 4 inches
- D. 1 inch

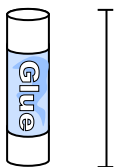
3)



Candle

- A. 8 inches
- B. 1 foot
- C. 3 inches
- D. 1 mile

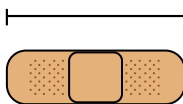
4)



Glue Stick

- A. 1 foot
- B. 4 miles
- C. 10 inches
- D. 3 inches


5)



Bandage

- A. 2 feet
- B. 2 miles
- C. 3 inches
- D. 1 yard

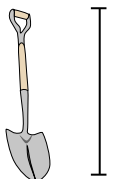
6)



File Cabinet

- A. 5 feet
- B. 1 foot
- C. 2 feet
- D. 11 inches


7)



Shovel

- A. 2 feet
- B. 4 feet
- C. 11 inches
- D. 3 yards

8)



Tree Height

- A. 1 mile
- B. 4 feet
- C. 6 yards
- D. 18 inches

9)

Flash Drive

- A. 6 inches
- B. 11 inches
- C. 2 feet
- D. 2 inches

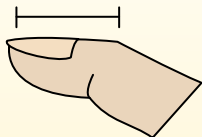
1. _____
2. _____
3. _____
4. _____
5. _____
6. _____
7. _____
8. _____
9. _____



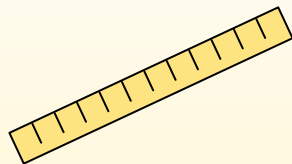
Determine which letter best represents the length / height.

Answers**Inch (in)**

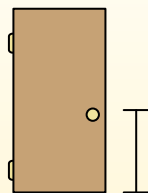
An inch is about the distance of the last joint of your finger.

**Foot (ft)**

A foot is 12 inches. The length of a ruler.

**Yard (yd)**

1 yard is the same as 3 feet. From the floor to a door knob is about 1 yard.

**Mile (mi)**

A mile is 5,280 feet. Most major roads are at least a mile long.




1)



Cooking Pot

- A. 4 inches
- B. 1 inch
- C. 2 feet
- D. 10 inches

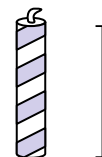
2)



Hammer

- A. 1 yard
- B. 16 inches
- C. 4 inches
- D. 1 inch

3)



Candle

- A. 8 inches
- B. 1 foot
- C. 3 inches
- D. 1 mile

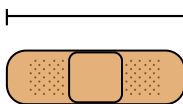
4)



Glue Stick

- A. 1 foot
- B. 4 miles
- C. 10 inches
- D. 3 inches

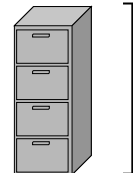
5)



Bandage

- A. 2 feet
- B. 2 miles
- C. 3 inches
- D. 1 yard

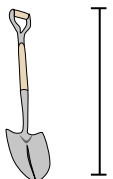
6)



File Cabinet

- A. 5 feet
- B. 1 foot
- C. 2 feet
- D. 11 inches

7)



Shovel

- A. 2 feet
- B. 4 feet
- C. 11 inches
- D. 3 yards

8)



Tree Height

- A. 1 mile
- B. 4 feet
- C. 6 yards
- D. 18 inches

9)

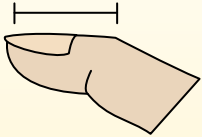
Flash Drive

- A. 6 inches
- B. 11 inches
- C. 2 feet
- D. 2 inches

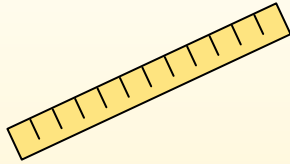
1. **D**2. **B**3. **C**4. **D**5. **C**6. **A**7. **B**8. **C**9. **D**

**Determine which letter best represents the length / height.****Answers****Inch (in)**

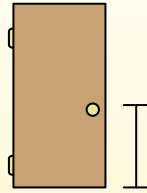
An inch is about the distance of the last joint of your finger.

**Foot (ft)**

A foot is 12 inches. The length of a ruler.

**Yard (yd)**

1 yard is the same as 3 feet. From the floor to a door knob is about 1 yard.

**Mile (mi)**

A mile is 5,280 feet. Most major roads are at least a mile long.



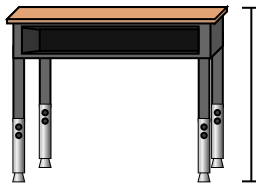
1)



Pen

- A. 5 inches
- B. 12 inches
- C. 1 foot
- D. 5 yards

2)



Desk

- A. 6 inches
- B. 2 yards
- C. 2 feet
- D. 11 inches

3)



Frog

- A. 9 inches
- B. 3 inches
- C. 1 foot
- D. 2 feet

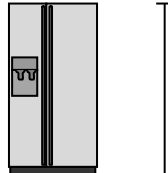
4)



Bicycle

- A. 3 inches
- B. 1 yard
- C. 3 yards
- D. 10 inches

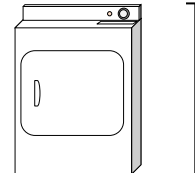
5)



Refrigerator

- A. 6 feet
- B. 1 foot
- C. 12 inches
- D. 4 yards

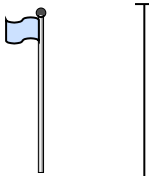
6)



Clothes Dryer

- A. 2 feet
- B. 1 yard
- C. 11 inches
- D. 6 inches


7)



Flag Pole

- A. 5 feet
- B. 10 yards
- C. 1 mile
- D. 12 inches

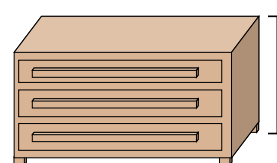
8)



Tennis Ball

- A. 1 foot
- B. 7 inches
- C. 3 inches
- D. 2 feet

9)



Dresser

- A. 18 inches
- B. 3 feet
- C. 3 yards
- D. 12 inches

1. _____

2. _____

3. _____

4. _____

5. _____

6. _____

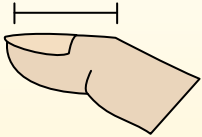
7. _____

8. _____

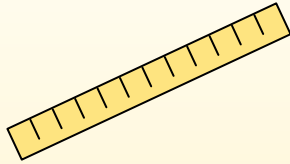
9. _____

**Determine which letter best represents the length / height.****Answers****Inch (in)**

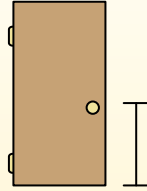
An inch is about the distance of the last joint of your finger.

**Foot (ft)**

A foot is 12 inches. The length of a ruler.

**Yard (yd)**

1 yard is the same as 3 feet. From the floor to a door knob is about 1 yard.

**Mile (mi)**

A mile is 5,280 feet. Most major roads are at least a mile long.



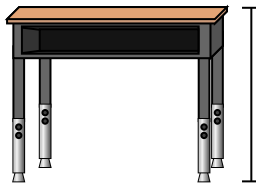
1)



Pen

- A. 5 inches
- B. 12 inches
- C. 1 foot
- D. 5 yards

2)



Desk

- A. 6 inches
- B. 2 yards
- C. 2 feet
- D. 11 inches

3)



Frog

- A. 9 inches
- B. 3 inches
- C. 1 foot
- D. 2 feet

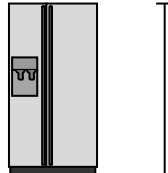
4)



Bicycle

- A. 3 inches
- B. 1 yard
- C. 3 yards
- D. 10 inches

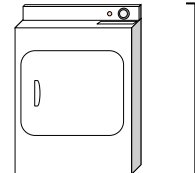
5)



Refrigerator

- A. 6 feet
- B. 1 foot
- C. 12 inches
- D. 4 yards

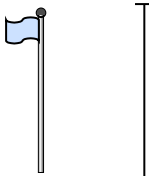
6)



Clothes Dryer

- A. 2 feet
- B. 1 yard
- C. 11 inches
- D. 6 inches


7)



Flag Pole

- A. 5 feet
- B. 10 yards
- C. 1 mile
- D. 12 inches

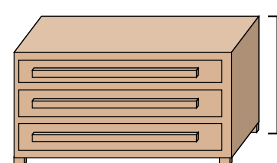
8)



Tennis Ball

- A. 1 foot
- B. 7 inches
- C. 3 inches
- D. 2 feet

9)



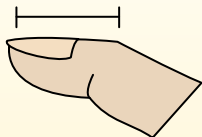
Dresser

- A. 18 inches
- B. 3 feet
- C. 3 yards
- D. 12 inches


1. **A**2. **C**3. **B**4. **B**5. **A**6. **B**7. **B**8. **C**9. **B**

**Determine which letter best represents the length / height.****Answers****Inch (in)**

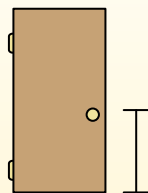
An inch is about the distance of the last joint of your finger.

**Foot (ft)**

A foot is 12 inches. The length of a ruler.

**Yard (yd)**

1 yard is the same as 3 feet. From the floor to a door knob is about 1 yard.

**Mile (mi)**

A mile is 5,280 feet. Most major roads are at least a mile long.



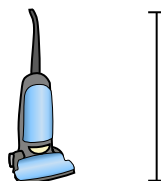
1)



Bicycle

- A. 3 inches
- B. 10 inches
- C. 1 yard
- D. 3 yards

2)



Vacuum

- A. 11 inches
- B. 4 feet
- C. 3 yards
- D. 1 foot


3)



Toothbrush

- A. 1 yard
- B. 10 feet
- C. 7 inches
- D. 4 inches


4)



Cereal Box Height

- A. 4 inches
- B. 2 feet
- C. 1 inch
- D. 1 foot

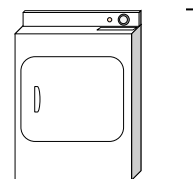
5)



Elephant

- A. 1 mile
- B. 5 feet
- C. 18 inches
- D. 4 yards

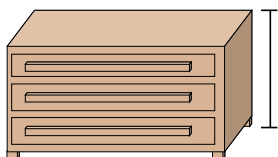
6)



Clothes Dryer

- A. 6 inches
- B. 2 feet
- C. 11 inches
- D. 1 yard

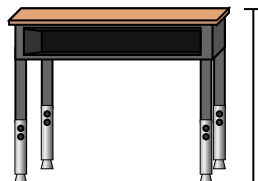
7)



Dresser

- A. 12 inches
- B. 3 yards
- C. 3 feet
- D. 18 inches

8)



Desk

- A. 6 inches
- B. 11 inches
- C. 2 feet
- D. 2 yards

9)



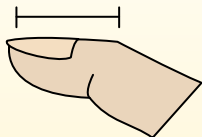
Bug

- A. 3 yards
- B. 3 inches
- C. 1 foot
- D. 1 inch

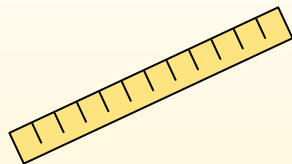
1. _____
2. _____
3. _____
4. _____
5. _____
6. _____
7. _____
8. _____
9. _____

**Determine which letter best represents the length / height.****Answers****Inch (in)**

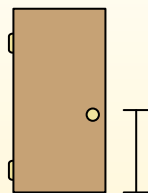
An inch is about the distance of the last joint of your finger.

**Foot (ft)**

A foot is 12 inches. The length of a ruler.

**Yard (yd)**

1 yard is the same as 3 feet. From the floor to a door knob is about 1 yard.

**Mile (mi)**

A mile is 5,280 feet. Most major roads are at least a mile long.




Bicycle

- A. 3 inches
- B. 10 inches
- C. 1 yard
- D. 3 yards




Vacuum

- A. 11 inches
- B. 4 feet
- C. 3 yards
- D. 1 foot




Toothbrush

- A. 1 yard
- B. 10 feet
- C. 7 inches
- D. 4 inches



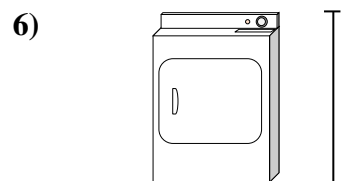
Cereal Box Height

- A. 4 inches
- B. 2 feet
- C. 1 inch
- D. 1 foot



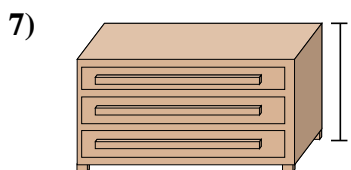
Elephant

- A. 1 mile
- B. 5 feet
- C. 18 inches
- D. 4 yards



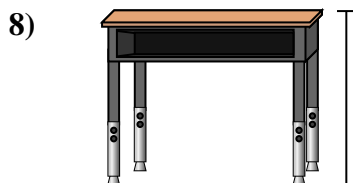
Clothes Dryer

- A. 6 inches
- B. 2 feet
- C. 11 inches
- D. 1 yard



Dresser

- A. 12 inches
- B. 3 yards
- C. 3 feet
- D. 18 inches



Desk

- A. 6 inches
- B. 11 inches
- C. 2 feet
- D. 2 yards



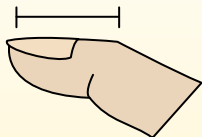
Bug

- A. 3 yards
- B. 3 inches
- C. 1 foot
- D. 1 inch


- 1. **C**
- 2. **B**
- 3. **C**
- 4. **D**
- 5. **D**
- 6. **D**
- 7. **C**
- 8. **C**
- 9. **D**

**Determine which letter best represents the length / height.****Answers****Inch (in)**

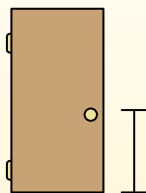
An inch is about the distance of the last joint of your finger.

**Foot (ft)**

A foot is 12 inches. The length of a ruler.

**Yard (yd)**


1 yard is the same as 3 feet. From the floor to a door knob is about 1 yard.

**Mile (mi)**

A mile is 5,280 feet. Most major roads are at least a mile long.




1)



Can of Soda

- A. 1 foot
- B. 1 inch
- C. 1 yard
- D. 4 inches


2)



Washing Machine

- A. 3 feet
- B. 1 foot
- C. 2 yards
- D. 4 inches

3)



Lollipop

- A. 1 foot
- B. 3 inches
- C. 1 mile
- D. 5 inches

4)



Bicycle

- A. 10 inches
- B. 3 inches
- C. 1 yard
- D. 3 yards


5)



Shovel

- A. 11 inches
- B. 2 feet
- C. 4 feet
- D. 3 yards

6)



Bowling Ball Height

- A. 10 inches
- B. 10 feet
- C. 1 yard
- D. 4 inches

7)



File Cabinet

- A. 11 inches
- B. 5 feet
- C. 1 foot
- D. 2 feet

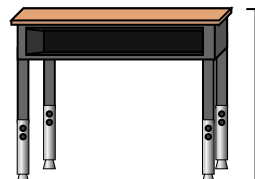
8)



Pencil

- A. 1 yard
- B. 7 inches
- C. 1 foot
- D. 1 inch

9)



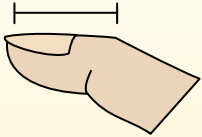
Desk

- A. 2 yards
- B. 6 inches
- C. 11 inches
- D. 2 feet

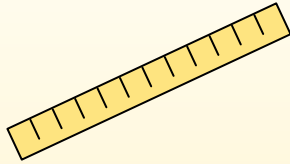
- 1. _____
- 2. _____
- 3. _____
- 4. _____
- 5. _____
- 6. _____
- 7. _____
- 8. _____
- 9. _____

**Determine which letter best represents the length / height.****Answers****Inch (in)**

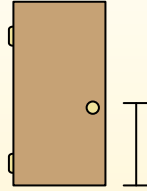
An inch is about the distance of the last joint of your finger.

**Foot (ft)**

A foot is 12 inches. The length of a ruler.

**Yard (yd)**



1 yard is the same as 3 feet. From the floor to a door knob is about 1 yard.

**Mile (mi)**

A mile is 5,280 feet. Most major roads are at least a mile long.



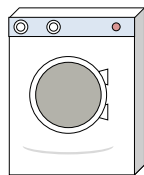
1)



Can of Soda

- A. 1 foot
- B. 1 inch
- C. 1 yard
- D. 4 inches


2)



WashingMachine

- A. 3 feet
- B. 1 foot
- C. 2 yards
- D. 4 inches

3)



Lollipop

- A. 1 foot
- B. 3 inches
- C. 1 mile
- D. 5 inches

4)



Bicycle

- A. 10 inches
- B. 3 inches
- C. 1 yard
- D. 3 yards

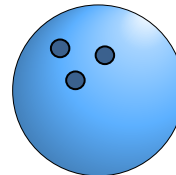
5)



Shovel

- A. 11 inches
- B. 2 feet
- C. 4 feet
- D. 3 yards

6)



Bowling Ball Height

- A. 10 inches
- B. 10 feet
- C. 1 yard
- D. 4 inches

7)



FileCabinet

- A. 11 inches
- B. 5 feet
- C. 1 foot
- D. 2 feet

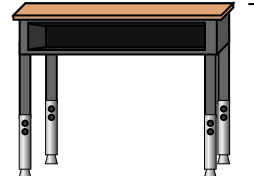
8)



Pencil

- A. 1 yard
- B. 7 inches
- C. 1 foot
- D. 1 inch

9)



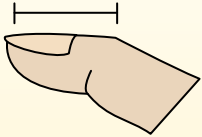
Desk

- A. 2 yards
- B. 6 inches
- C. 11 inches
- D. 2 feet

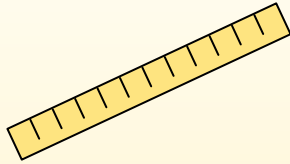
1. **D**
2. **A**
3. **D**
4. **C**
5. **C**
6. **A**
7. **B**
8. **B**
9. **D**

**Determine which letter best represents the length / height.****Answers****Inch (in)**

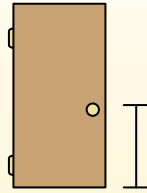
An inch is about the distance of the last joint of your finger.

**Foot (ft)**

A foot is 12 inches. The length of a ruler.

**Yard (yd)**

1 yard is the same as 3 feet. From the floor to a door knob is about 1 yard.

**Mile (mi)**

A mile is 5,280 feet. Most major roads are at least a mile long.




1)

DVD

- A. 4 inches
- B. 1 yard
- C. 12 inches
- D. 1 foot


2)



Mountain

- A. 10 yards
- B. 2 miles
- C. 300 inches
- D. 20 feet

3)



Slice of Bread

- A. 4 feet
- B. 2 yards
- C. 4 inches
- D. 10 inches

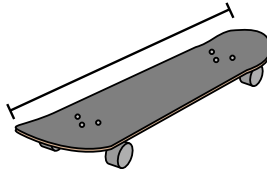
4)



Bicycle

- A. 3 yards
- B. 10 inches
- C. 3 inches
- D. 1 yard

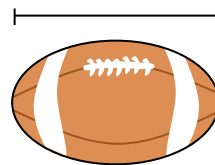
5)



Skateboard

- A. 30 inches
- B. 1 inch
- C. 2 yards
- D. 12 inches

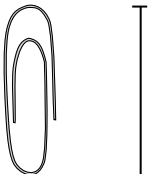
6)



Football

- A. 1 yard
- B. 11 inches
- C. 1 inch
- D. 2 feet

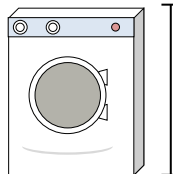
7)



Paperclip

- A. 1 inch
- B. 2 feet
- C. 1 foot
- D. 4 inches

8)



WashingMachine

- A. 1 foot
- B. 3 feet
- C. 2 yards
- D. 4 inches

9)



Glue Stick

- A. 3 inches
- B. 1 foot
- C. 10 inches
- D. 4 miles

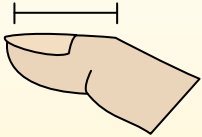
- 1. _____
- 2. _____
- 3. _____
- 4. _____
- 5. _____
- 6. _____
- 7. _____
- 8. _____
- 9. _____



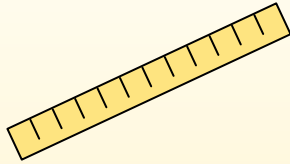
Determine which letter best represents the length / height.

Answers**Inch (in)**

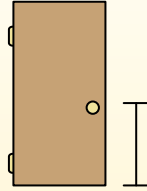
An inch is about the distance of the last joint of your finger.

**Foot (ft)**

A foot is 12 inches. The length of a ruler.

**Yard (yd)**

1 yard is the same as 3 feet. From the floor to a door knob is about 1 yard.

**Mile (mi)**

A mile is 5,280 feet. Most major roads are at least a mile long.




1)

DVD

- A. 4 inches
- B. 1 yard
- C. 12 inches
- D. 1 foot


2)



Mountain

- A. 10 yards
- B. 2 miles
- C. 300 inches
- D. 20 feet

3)



Slice of Bread

- A. 4 feet
- B. 2 yards
- C. 4 inches
- D. 10 inches

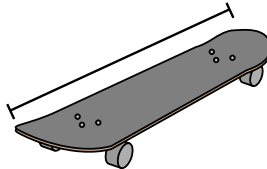
4)



Bicycle

- A. 3 yards
- B. 10 inches
- C. 3 inches
- D. 1 yard

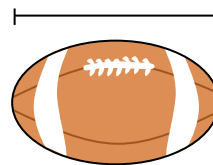
5)



Skateboard

- A. 30 inches
- B. 1 inch
- C. 2 yards
- D. 12 inches

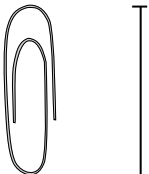
6)



Football

- A. 1 yard
- B. 11 inches
- C. 1 inch
- D. 2 feet

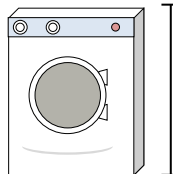
7)



Paperclip

- A. 1 inch
- B. 2 feet
- C. 1 foot
- D. 4 inches

8)



WashingMachine

- A. 1 foot
- B. 3 feet
- C. 2 yards
- D. 4 inches

9)



Glue Stick

- A. 3 inches
- B. 1 foot
- C. 10 inches
- D. 4 miles

- 1. **A**
- 2. **B**
- 3. **C**
- 4. **D**
- 5. **A**
- 6. **B**
- 7. **A**
- 8. **B**
- 9. **A**