

**Determine which letter best represents the length / height.****Answers****Inch (in)**

A quarter is almost 1 inch (0.95").

**Foot (ft)**

12 inches = 1 foot
Most rulers are 1 foot.

**Yard (yd)**

3 feet = 1 yard
From the floor to a door knob is about 1 yard.

**Mile (mi)**

5,280 feet = 1 mile
Most major roads are at least a mile long.



1)



height of a blueberry

- A. less than 1 inch
- B. 1 yard
- C. 2 inches
- D. 10 feet

2)



width of a parking space

- A. 36 inches
- B. 2 feet
- C. 9 feet
- D. 8 yards

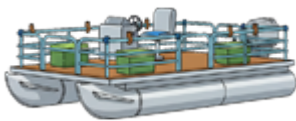
3)



length of a toothbrush

- A. 7 inches
- B. 4 feet
- C. 2 yards
- D. 2 inches

4)



length of a small pontoon boat

- A. 36 inches
- B. 16 feet
- C. 1 mile
- D. 12 yards

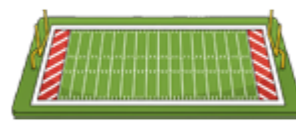
5)



width of a clothes dresser

- A. 24 inches
- B. 5 feet
- C. 1 mile
- D. 120 inches

6)



length of a football field

- A. 75 feet
- B. 2 miles
- C. 300 feet
- D. 2 yards

7)



height of a storm cloud

- A. 2 miles
- B. 10 miles
- C. 4 feet
- D. 24 inches

8)



height of a student's desk

- A. 1 yard
- B. 2 yards
- C. 22 inches
- D. 1 mile

9)



width of an envelope

- A. 1 mile
- B. 4 feet
- C. 1 inch
- D. 4 inches

- 1. _____
- 2. _____
- 3. _____
- 4. _____
- 5. _____
- 6. _____
- 7. _____
- 8. _____
- 9. _____

**Determine which letter best represents the length / height.****Answers****Inch (in)**

A quarter is almost 1 inch (0.95").

**Foot (ft)**

12 inches = 1 foot
Most rulers are 1 foot.

**Yard (yd)**

3 feet = 1 yard
From the floor to a door knob is about 1 yard.

**Mile (mi)**

5,280 feet = 1 mile
Most major roads are at least a mile long.



1)



height of a blueberry

- A. less than 1 inch
- B. 1 yard
- C. 2 inches
- D. 10 feet

2)



width of a parking space

- A. 36 inches
- B. 2 feet
- C. 9 feet
- D. 8 yards

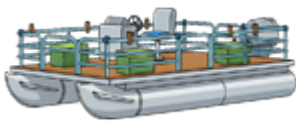
3)



length of a toothbrush

- A. 7 inches
- B. 4 feet
- C. 2 yards
- D. 2 inches

4)



length of a small pontoon boat

- A. 36 inches
- B. 16 feet
- C. 1 mile
- D. 12 yards

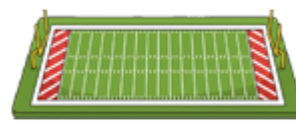
5)



width of a clothes dresser

- A. 24 inches
- B. 5 feet
- C. 1 mile
- D. 120 inches

6)



length of a football field

- A. 75 feet
- B. 2 miles
- C. 300 feet
- D. 2 yards

7)



height of a storm cloud

- A. 2 miles
- B. 10 miles
- C. 4 feet
- D. 24 inches

8)



height of a student's desk

- A. 1 yard
- B. 2 yards
- C. 22 inches
- D. 1 mile

9)



width of an envelope

- A. 1 mile
- B. 4 feet
- C. 1 inch
- D. 4 inches

1. **A**
2. **C**
3. **A**
4. **B**
5. **B**
6. **C**
7. **B**
8. **A**
9. **D**