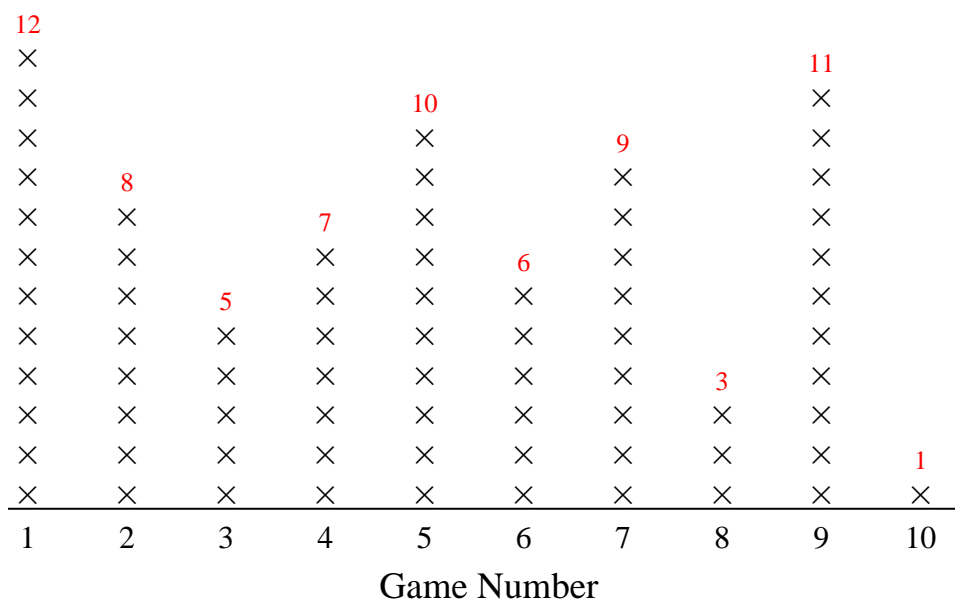




Use the line plots to answer each question.



Each x = 1 homerun

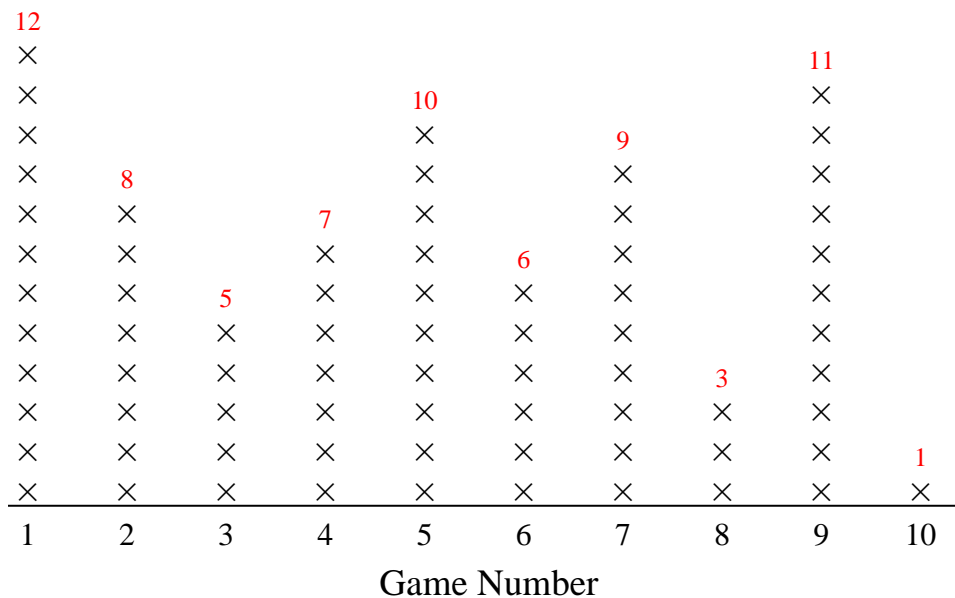
Answers

1. _____
2. _____
3. _____
4. _____
5. _____
6. _____
7. _____
8. _____
9. _____
10. _____
11. _____

- 1) How many games did they score more than 6 home runs?
- 2) Which game did they score the fewest home runs?
- 3) What is the combined homeruns they scored in game 8 and game 10?
- 4) How many games did they score fewer than 1 home runs?
- 5) Did they score fewer home runs during game 10 or game 5?
- 6) They scored the most home runs in which game?
- 7) What is the difference in the number of home runs they scored in game 10 and the number they scored in game 9?
- 8) Which games (if any) did they score more than 9 homeruns?
- 9) How many home runs did the team score in game 10?
- 10) Did they score more home runs during game 9 or game 2?
- 11) Which game number did they score exactly 5 home runs?



Use the line plots to answer each question.



Each x = 1 homerun

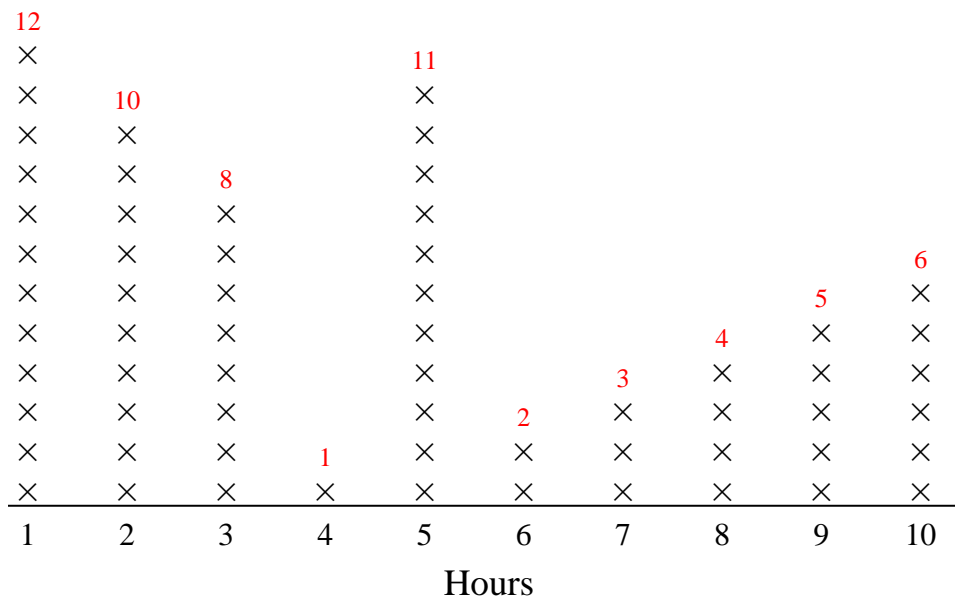
Answers

1. 6
2. 10
3. 4
4. 0
5. 10
6. 1
7. 10
8. 1,5,9
9. 1
10. 9
11. 3

- 1) How many games did they score more than 6 home runs?
- 2) Which game did they score the fewest home runs?
- 3) What is the combined homeruns they scored in game 8 and game 10?
- 4) How many games did they score fewer than 1 home runs?
- 5) Did they score fewer home runs during game 10 or game 5?
- 6) They scored the most home runs in which game?
- 7) What is the difference in the number of home runs they scored in game 10 and the number they scored in game 9?
- 8) Which games (if any) did they score more than 9 homeruns?
- 9) How many home runs did the team score in game 10?
- 10) Did they score more home runs during game 9 or game 2?
- 11) Which game number did they score exactly 5 home runs?



Use the line plots to answer each question.



Each x = 1 car

Answers

1. 2
2. 10
3. 5
4. 1,2,5
5. 1
6. 10
7. 7
8. 4
9. 4
10. 6
11. 3

- 1) How many hours did she sell fewer than 3 cars?
- 2) How many cars did she sell in hour 2?
- 3) How many hours did she sell more than 5 cars?
- 4) Which hours (if any) did she sell more than 8 cars?
- 5) She sold the most cars which hour?
- 6) What is the combined number of cars she sold in hour 10 and in hour 8?
- 7) Did she sell more cars in hour 7 or in hour 6?
- 8) Which hour did she sell the fewest cars?
- 9) Which hour did she sell exactly 1 cars?
- 10) Did she sell fewer cars in hour 6 or in hour 10?
- 11) What is the difference in the number of cars she sold in hour 5 and the number she sold in hour 3?

