


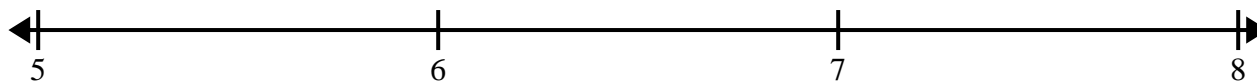


Create and label the line plot using the set of numbers provided.


- 1) $3\frac{1}{4}$ $4\frac{2}{4}$ $3\frac{2}{4}$ $5\frac{1}{4}$ $3\frac{1}{4}$ $3\frac{2}{4}$ $5\frac{1}{4}$ 3
 $5\frac{3}{4}$ $4\frac{2}{4}$ 3 $4\frac{3}{4}$ $5\frac{1}{4}$ 5 $3\frac{1}{4}$ $5\frac{3}{4}$




- 2) $7\frac{4}{8}$ $5\frac{5}{8}$ $6\frac{3}{8}$ $7\frac{2}{8}$ $6\frac{1}{8}$ $5\frac{6}{8}$ $7\frac{1}{8}$ $7\frac{5}{8}$
 $6\frac{5}{8}$ $7\frac{4}{8}$ $5\frac{2}{8}$ $5\frac{1}{8}$ $5\frac{5}{8}$ $5\frac{3}{8}$ $7\frac{1}{8}$ $7\frac{1}{8}$




- 3) 11 $9\frac{1}{8}$ $9\frac{4}{8}$ 11 $10\frac{6}{8}$ $11\frac{3}{8}$ $9\frac{5}{8}$ $11\frac{7}{8}$
 $9\frac{1}{8}$ $11\frac{4}{8}$ $11\frac{3}{8}$ 9 $9\frac{2}{8}$ $10\frac{6}{8}$ $9\frac{1}{8}$ $11\frac{6}{8}$



- 4) $11\frac{1}{2}$ $11\frac{1}{2}$ 9 $11\frac{1}{2}$ 11 $10\frac{1}{2}$ 10 9
 9 10 10 $10\frac{1}{2}$ 11 $10\frac{1}{2}$ $9\frac{1}{2}$ $9\frac{1}{2}$



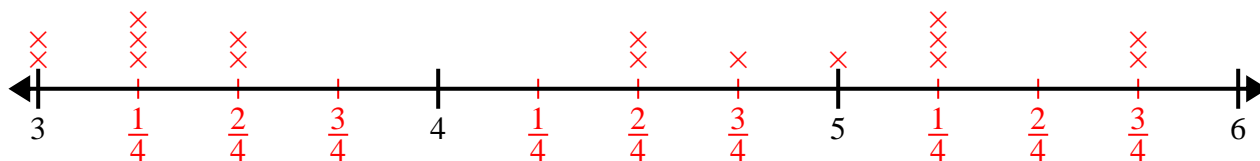
- 5) 4 $4\frac{2}{4}$ 3 $4\frac{2}{4}$ $3\frac{2}{4}$ 5 $5\frac{3}{4}$ $4\frac{2}{4}$
 4 $5\frac{3}{4}$ 4 $3\frac{3}{4}$ $5\frac{3}{4}$ $5\frac{2}{4}$ $3\frac{3}{4}$ $5\frac{2}{4}$



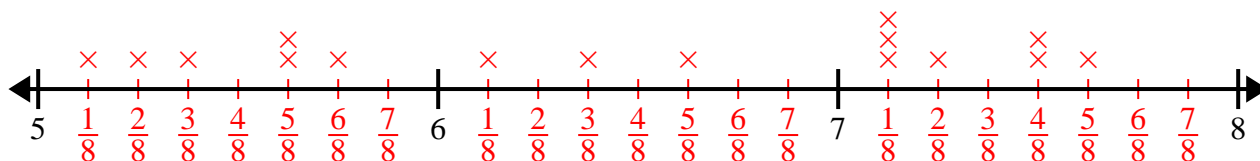


Create and label the line plot using the set of numbers provided.

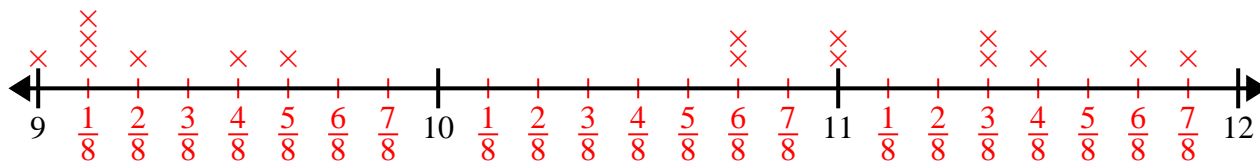
- 1) $3\frac{1}{4}$ $4\frac{2}{4}$ $3\frac{2}{4}$ $5\frac{1}{4}$ $3\frac{1}{4}$ $3\frac{2}{4}$ $5\frac{1}{4}$ 3
 $5\frac{3}{4}$ $4\frac{2}{4}$ 3 $4\frac{3}{4}$ $5\frac{1}{4}$ 5 $3\frac{1}{4}$ $5\frac{3}{4}$



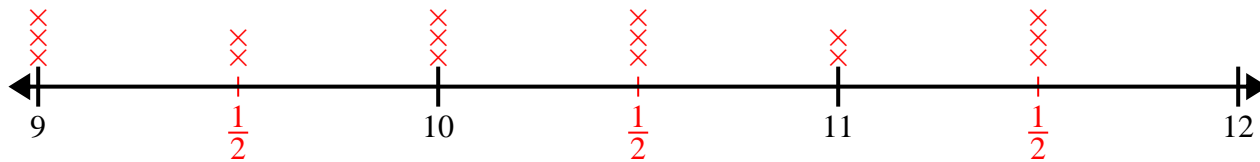
- 2) $7\frac{4}{8}$ $5\frac{5}{8}$ $6\frac{3}{8}$ $7\frac{2}{8}$ $6\frac{1}{8}$ $5\frac{6}{8}$ $7\frac{1}{8}$ $7\frac{5}{8}$
 $6\frac{5}{8}$ $7\frac{4}{8}$ $5\frac{2}{8}$ $5\frac{1}{8}$ $5\frac{5}{8}$ $5\frac{3}{8}$ $7\frac{1}{8}$ $7\frac{1}{8}$



- 3) 11 $9\frac{1}{8}$ $9\frac{4}{8}$ 11 $10\frac{6}{8}$ $11\frac{3}{8}$ $9\frac{5}{8}$ $11\frac{7}{8}$
 $9\frac{1}{8}$ $11\frac{4}{8}$ $11\frac{3}{8}$ 9 $9\frac{2}{8}$ $10\frac{6}{8}$ $9\frac{1}{8}$ $11\frac{6}{8}$



- 4) $11\frac{1}{2}$ $11\frac{1}{2}$ 9 $11\frac{1}{2}$ 11 $10\frac{1}{2}$ 10 9
 9 10 10 $10\frac{1}{2}$ 11 $10\frac{1}{2}$ $9\frac{1}{2}$ $9\frac{1}{2}$



- 5) 4 $4\frac{2}{4}$ 3 $4\frac{2}{4}$ $3\frac{2}{4}$ 5 $5\frac{3}{4}$ $4\frac{2}{4}$
 4 $5\frac{3}{4}$ 4 $3\frac{3}{4}$ $5\frac{3}{4}$ $5\frac{2}{4}$ $3\frac{3}{4}$ $5\frac{2}{4}$

