





Create and label the line plot using the set of numbers provided.

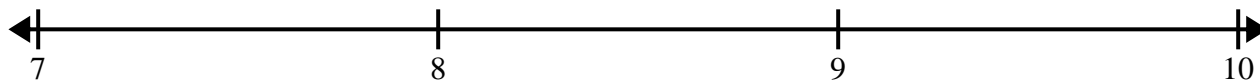
- 1)  $4$       $3\frac{1}{4}$       $5\frac{1}{4}$       $4\frac{3}{4}$       $3$       $5\frac{3}{4}$       $5\frac{1}{4}$       $4\frac{2}{4}$   
 $4\frac{3}{4}$       $3\frac{1}{4}$       $5\frac{1}{4}$       $4$       $4\frac{1}{4}$       $3\frac{3}{4}$       $3\frac{3}{4}$       $3\frac{3}{4}$




- 2)  $3\frac{1}{4}$       $3\frac{2}{4}$       $3\frac{3}{4}$       $3\frac{1}{4}$       $5\frac{3}{4}$       $4\frac{2}{4}$       $4\frac{3}{4}$       $3$   
 $4$       $4$       $5\frac{2}{4}$       $4\frac{2}{4}$       $3\frac{3}{4}$       $4\frac{1}{4}$       $3\frac{3}{4}$       $5\frac{1}{4}$




- 3)  $9\frac{1}{2}$       $8$       $7\frac{1}{2}$       $9\frac{1}{2}$       $8$       $8$       $9\frac{1}{2}$       $7$   
 $9$       $7$       $7\frac{1}{2}$       $7$       $7\frac{1}{2}$       $9$       $9$       $8\frac{1}{2}$



- 4)  $7$       $9\frac{6}{8}$       $7\frac{4}{8}$       $7\frac{7}{8}$       $7\frac{1}{8}$       $8\frac{4}{8}$       $9\frac{1}{8}$       $8\frac{6}{8}$   
 $7\frac{7}{8}$       $9\frac{1}{8}$       $9\frac{5}{8}$       $7\frac{6}{8}$       $7$       $8\frac{6}{8}$       $7\frac{4}{8}$       $7\frac{1}{8}$



- 5)  $10\frac{7}{8}$       $9\frac{6}{8}$       $10\frac{6}{8}$       $8\frac{1}{8}$       $8\frac{5}{8}$       $8\frac{4}{8}$       $8\frac{3}{8}$       $8\frac{3}{8}$   
 $9\frac{2}{8}$       $10\frac{3}{8}$       $10\frac{5}{8}$       $10\frac{6}{8}$       $9\frac{2}{8}$       $9\frac{4}{8}$       $10\frac{3}{8}$       $10\frac{2}{8}$





Create and label the line plot using the set of numbers provided.

