



Use the grid to solve each problem.



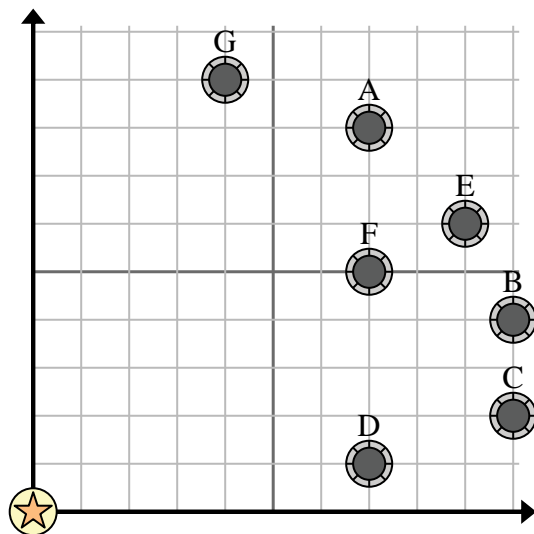
= Well



= Water Tower



= 1 Square Mile



- 1) A new law says you can't build a well within 2 miles a pre-existing well. If you wanted to build a well 5 miles east and 8 miles north of the water tower, would you be allowed to?
- 2) Which well is closest to the water tower?
- 3) Which well is furthest from the water tower?
- 4) Which well is further west? Well B or well C?
- 5) If you were to go 9 miles east and 6 miles north from the water tower which well would you end up at?

Answers

1. _____
2. _____
3. _____
4. _____
5. _____
6. _____
7. _____
8. _____
9. _____
10. _____

- 6) A new ship wanted to fish, but the captain wanted to make sure they were at least 2 miles from another ship. If he sailed 8 miles east and 6 miles north would that spot suit him?



= Ship

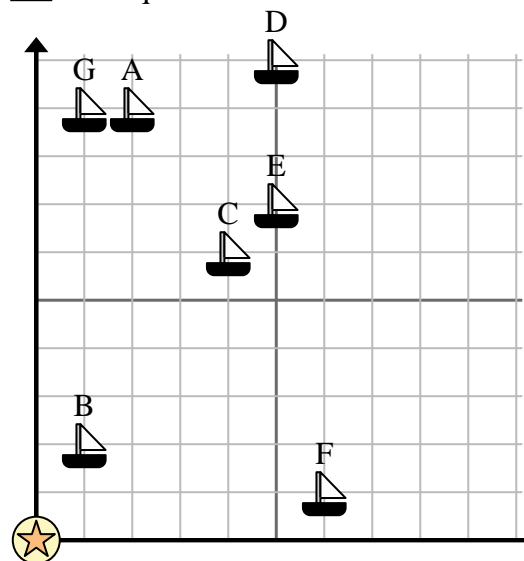


= Buoy



= 1 Square Mile

- 7) Which ship is closest to the buoy?
- 8) Which ship is furthest from the buoy?
- 9) Which ship is further west? Ship E or ship A?
- 10) Which ship is 6 miles east and 1 miles north from the buoy?





Use the grid to solve each problem.



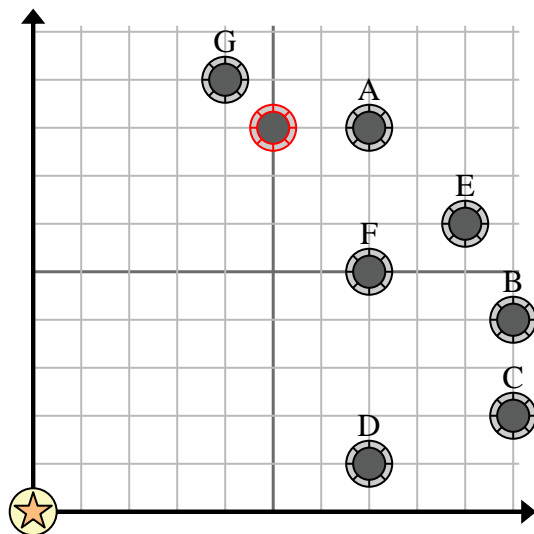
= Well



= Water Tower



= 1 Square Mile



- 1) A new law says you can't build a well within 2 miles a pre-existing well. If you wanted to build a well 5 miles east and 8 miles north of the water tower, would you be allowed to?
- 2) Which well is closest to the water tower?
- 3) Which well is furthest from the water tower?
- 4) Which well is further west? Well B or well C?
- 5) If you were to go 9 miles east and 6 miles north from the water tower which well would you end up at?

Answers

1. **no**
2. **D**
3. **E**
4. **A**
5. **E**
6. **yes**
7. **B**
8. **D**
9. **A**
10. **F**

- 6) A new ship wanted to fish, but the captain wanted to make sure they were at least 2 miles from another ship. If he sailed 8 miles east and 6 miles north would that spot suit him?



= Ship



= Buoy



= 1 Square Mile

- 7) Which ship is closest to the buoy?
- 8) Which ship is furthest from the buoy?
- 9) Which ship is further west? Ship E or ship A?
- 10) Which ship is 6 miles east and 1 miles north from the buoy?

