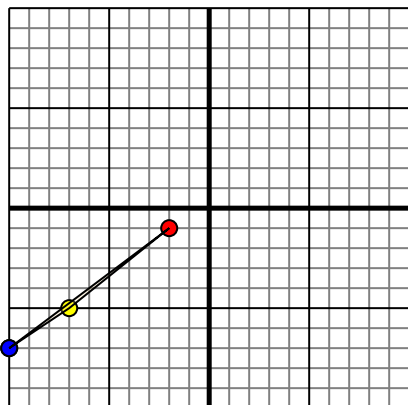




Translate each shape as described.

1)

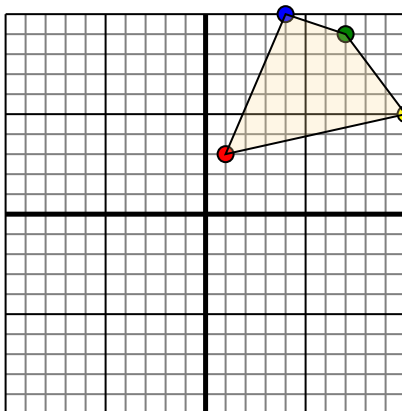


The shape above has the following coordinates:

- A. (-2,-1)
- B. (-7,-5)
- C. (-10,-7)

Move the shape 4 units right and 3 units up.

2)

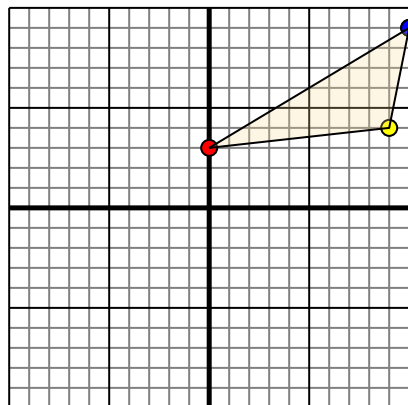


The shape above has the following coordinates:

- A. (1,3)
- B. (10,5)
- C. (7,9)
- D. (4,10)

Move the shape 7 units left and 4 units down.

3)

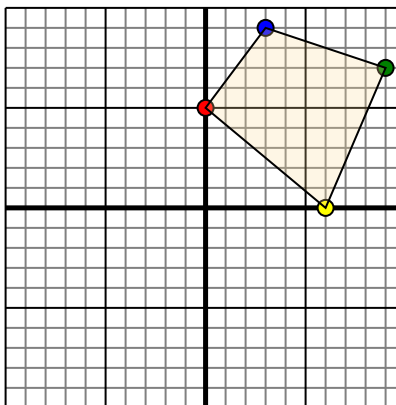


The shape above has the following coordinates:

- A. (0,3)
- B. (9,4)
- C. (10,9)

Move the shape 8 units left and 9 units down.

4)



The shape above has the following coordinates:

- A. (0,5)
- B. (6,0)
- C. (9,7)
- D. (3,9)

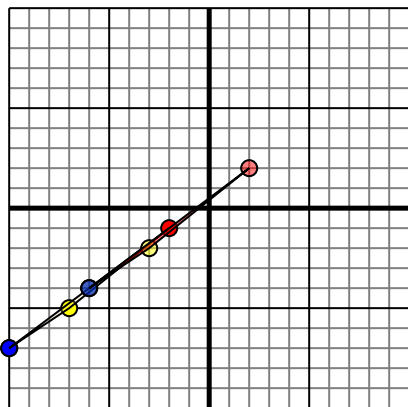
Move the shape 3 units left and 7 units down.

Answers1. _____ [Graph](#)2. _____ [Graph](#)3. _____ [Graph](#)4. _____ [Graph](#)



Translate each shape as described.

1)

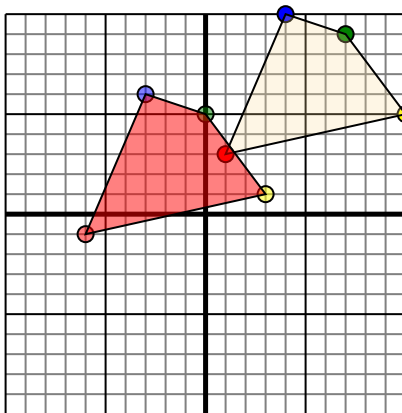


The shape above has the following coordinates:

- A. (-2,-1)
- B. (-7,-5)
- C. (-10,-7)

Move the shape 4 units right and 3 units up.

2)

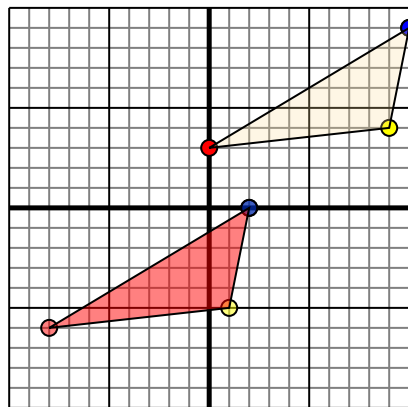


The shape above has the following coordinates:

- A. (1,3)
- B. (10,5)
- C. (7,9)
- D. (4,10)

Move the shape 7 units left and 4 units down.

3)

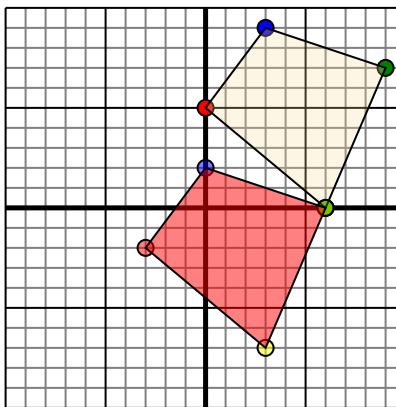


The shape above has the following coordinates:

- A. (0,3)
- B. (9,4)
- C. (10,9)

Move the shape 8 units left and 9 units down.

4)



The shape above has the following coordinates:

- A. (0,5)
- B. (6,0)
- C. (9,7)
- D. (3,9)

Move the shape 3 units left and 7 units down.

Answers

1. **2,2** **-3,-2** **-6,-4** [Graph](#)
2. **-6,-1** **3,1** **0,5** **-3,6** [Graph](#)
3. **-8,-6** **1,-5** **2,0** [Graph](#)
4. **-3,-2** **3,-7** **6,0** **0,2** [Graph](#)