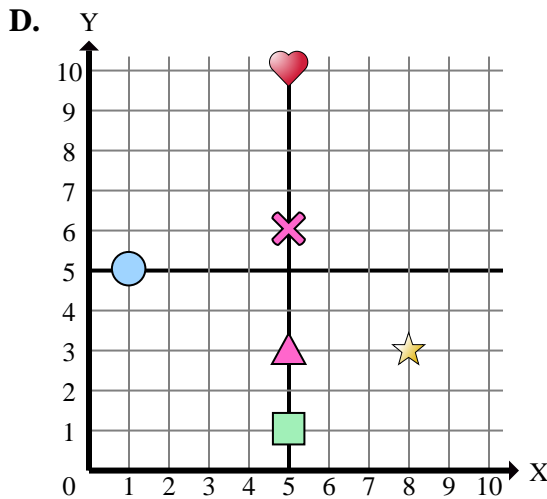
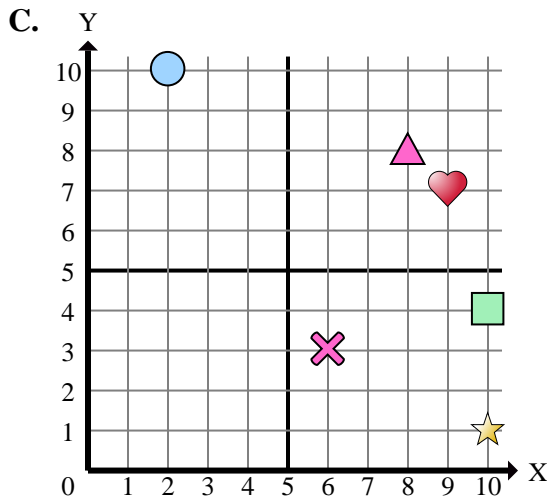
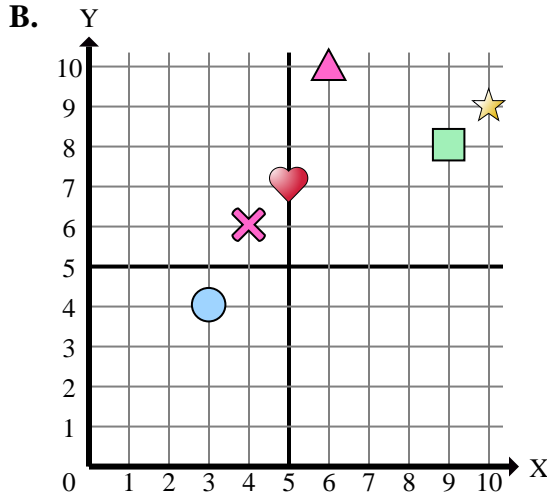
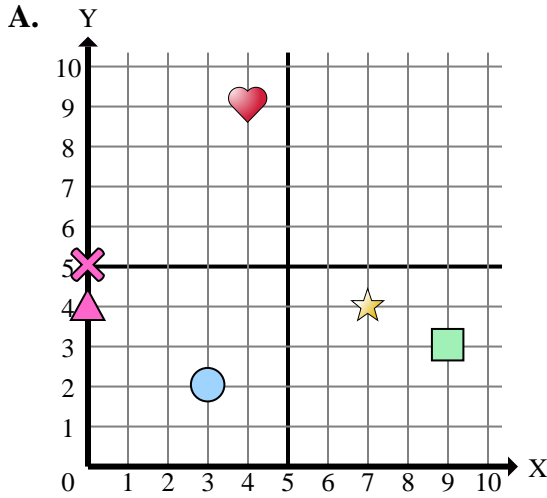




Determine which coordinate plane answers each question.



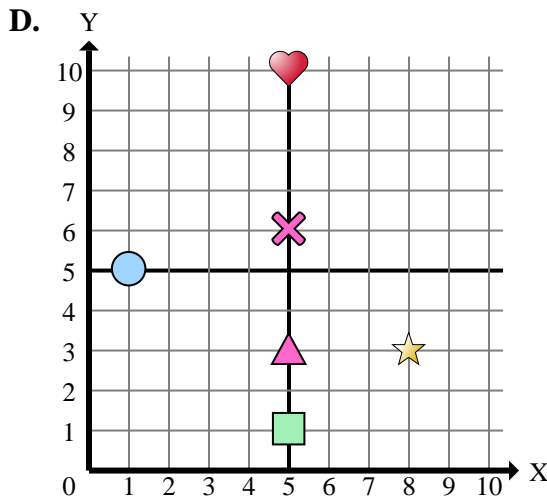
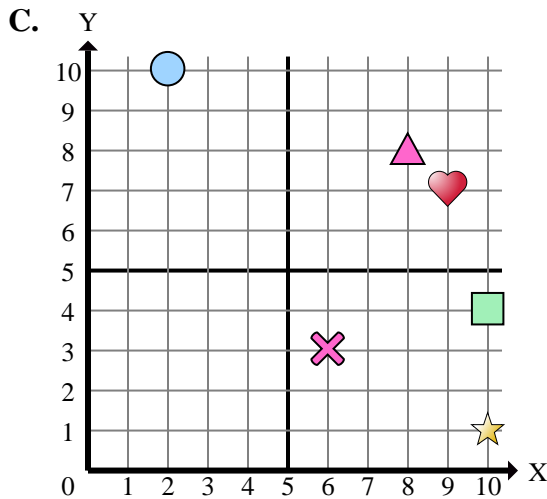
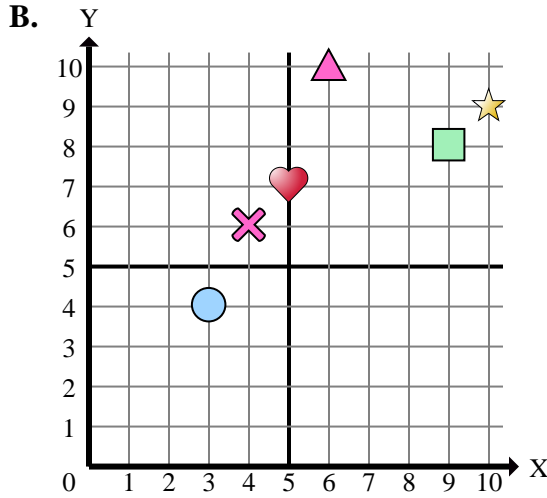
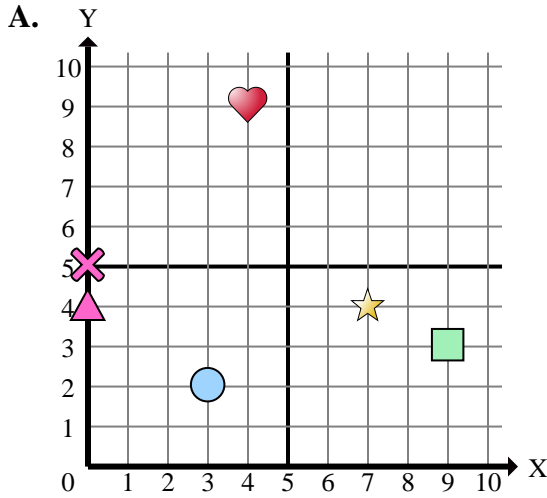
Answers

1. \_\_\_\_\_
2. \_\_\_\_\_
3. \_\_\_\_\_
4. \_\_\_\_\_
5. \_\_\_\_\_
6. \_\_\_\_\_
7. \_\_\_\_\_
8. \_\_\_\_\_
9. \_\_\_\_\_
10. \_\_\_\_\_
11. \_\_\_\_\_
12. \_\_\_\_\_
13. \_\_\_\_\_
14. \_\_\_\_\_
15. \_\_\_\_\_

- 1) Which coordinate plane has a shape at (1 , 5)?
- 2) Which coordinate plane has a shape at (0 , 4)?
- 3) Which coordinate plane has a shape at (3 , 4)?
- 4) Which coordinate plane has a shape at (3 , 2)?
- 5) Which coordinate plane has a shape at (9 , 7)?
- 6) Which coordinate plane has a shape at (10 , 1)?
- 7) Which coordinate plane has a shape at (9 , 3)?
- 8) Which coordinate plane has a shape at (4 , 9)?
- 9) Which coordinate plane has a shape at (5 , 7)?
- 10) Which coordinate plane has a shape at (8 , 3)?
- 11) Which coordinate plane has a shape at (5 , 3)?
- 12) Which coordinate plane has a shape at (5 , 1)?
- 13) Which coordinate plane has a shape at (10 , 9)?
- 14) Which coordinate plane has a shape at (8 , 8)?
- 15) Which coordinate plane has a shape at (10 , 4)?



Determine which coordinate plane answers each question.



- 1) Which coordinate plane has a shape at (1 , 5)?
- 2) Which coordinate plane has a shape at (0 , 4)?
- 3) Which coordinate plane has a shape at (3 , 4)?
- 4) Which coordinate plane has a shape at (3 , 2)?
- 5) Which coordinate plane has a shape at (9 , 7)?
- 6) Which coordinate plane has a shape at (10 , 1)?
- 7) Which coordinate plane has a shape at (9 , 3)?
- 8) Which coordinate plane has a shape at (4 , 9)?
- 9) Which coordinate plane has a shape at (5 , 7)?
- 10) Which coordinate plane has a shape at (8 , 3)?
- 11) Which coordinate plane has a shape at (5 , 3)?
- 12) Which coordinate plane has a shape at (5 , 1)?
- 13) Which coordinate plane has a shape at (10 , 9)?
- 14) Which coordinate plane has a shape at (8 , 8)?
- 15) Which coordinate plane has a shape at (10 , 4)?

Answers

1.     **D**
2.     **A**
3.     **B**
4.     **A**
5.     **C**
6.     **C**
7.     **A**
8.     **A**
9.     **B**
10.     **D**
11.     **D**
12.     **D**
13.     **B**
14.     **C**
15.     **C**