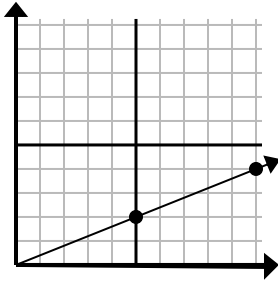




Determine which choice represents a point on the line if it were to continue.

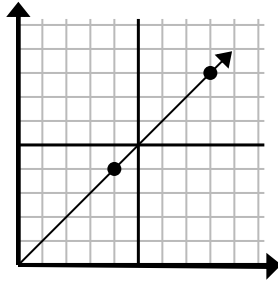
Answers

1)



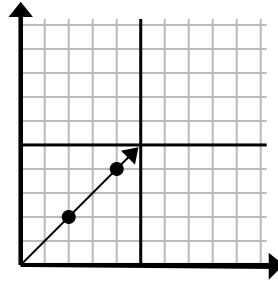
- A. (15 , 6)
- B. (25 , 10)
- C. (20 , 8)
- D. (30 , 12)

2)



- A. (20 , 20)
- B. (11 , 6)
- C. (12 , 8)
- D. (12 , 12)

3)



- A. (8 , 6)
- B. (10 , 10)
- C. (6 , 6)
- D. (14 , 14)

1. _____

2. _____

3. _____

4. _____

5. _____

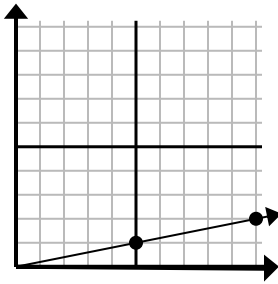
6. _____

7. _____

8. _____

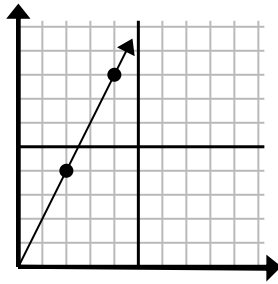
9. _____

4)



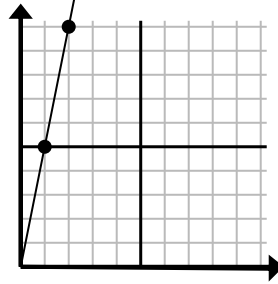
- A. (30 , 6)
- B. (14 , 5)
- C. (15 , 3)
- D. (14 , 3)

5)



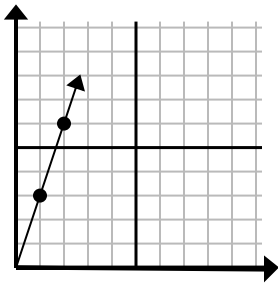
- A. (12 , 24)
- B. (6 , 12)
- C. (9 , 6)
- D. (7 , 7)

6)



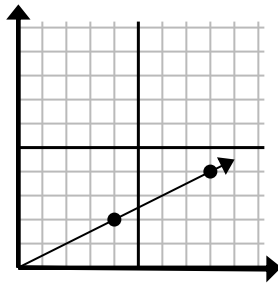
- A. (5 , 25)
- B. (6 , 7)
- C. (3 , 15)
- D. (4 , 8)

7)



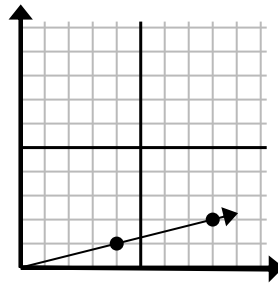
- A. (6 , 5)
- B. (6 , 18)
- C. (3 , 9)
- D. (7 , 21)

8)



- A. (20 , 10)
- B. (28 , 14)
- C. (13 , 7)
- D. (12 , 6)

9)

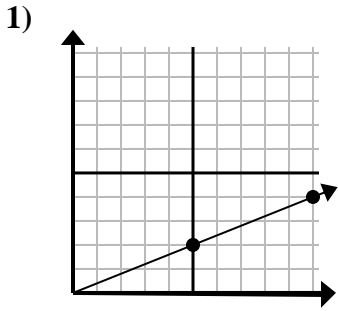


- A. (16 , 4)
- B. (24 , 6)
- C. (28 , 7)
- D. (12 , 3)

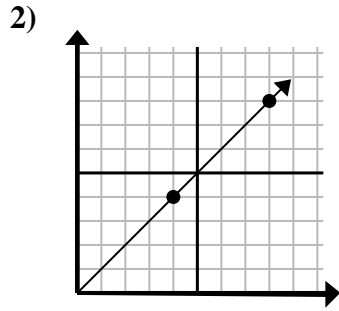


Determine which choice represents a point on the line if it were to continue.

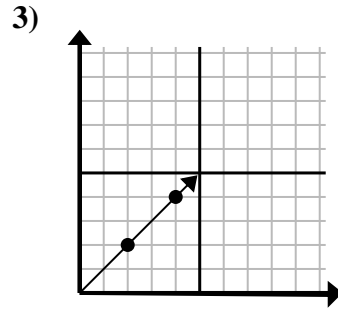
Answers



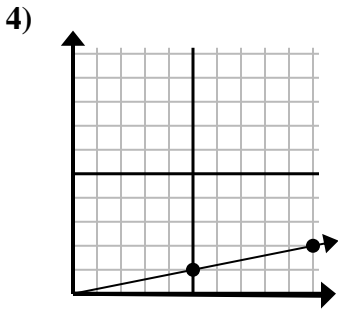
- A. (15 , 6)
- B. (25 , 10)
- C. (20 , 8)
- D. (30 , 12)



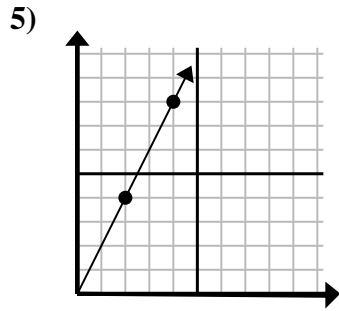
- A. (20 , 20)
- B. (11 , 6)
- C. (12 , 8)
- D. (12 , 12)



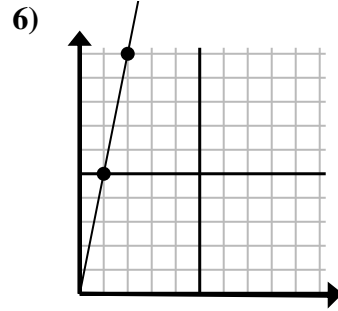
- A. (8 , 6)
- B. (10 , 10)
- C. (6 , 6)
- D. (14 , 14)



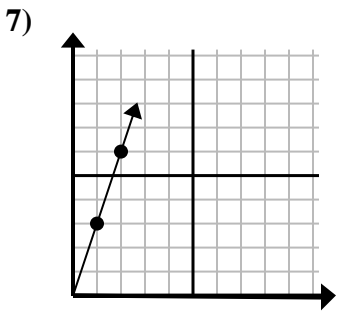
- A. (30 , 6)
- B. (14 , 5)
- C. (15 , 3)
- D. (14 , 3)



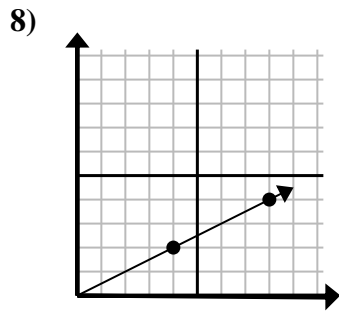
- A. (12 , 24)
- B. (6 , 12)
- C. (9 , 6)
- D. (7 , 7)



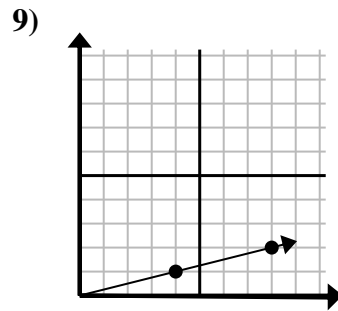
- A. (5 , 25)
- B. (6 , 7)
- C. (3 , 15)
- D. (4 , 8)



- A. (6 , 5)
- B. (6 , 18)
- C. (3 , 9)
- D. (7 , 21)



- A. (20 , 10)
- B. (28 , 14)
- C. (13 , 7)
- D. (12 , 6)



- A. (16 , 4)
- B. (24 , 6)
- C. (28 , 7)
- D. (12 , 3)

- 1. **A**
- 2. **D**
- 3. **C**
- 4. **C**
- 5. **B**
- 6. **C**
- 7. **C**
- 8. **D**
- 9. **D**