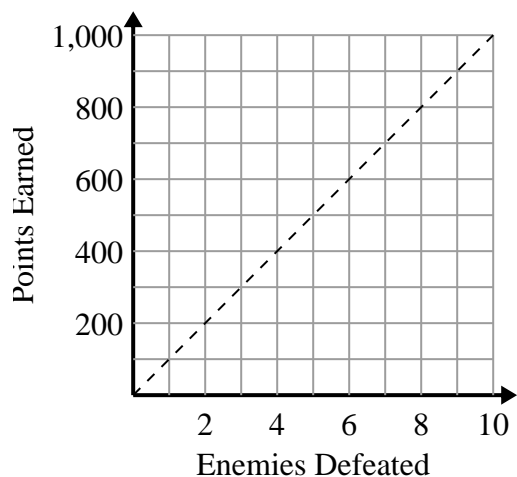




Determine which statements about the graph are true.

Answers

1)



A. The point (700 , 7) shows that defeating 7 enemies will earn you 700 points.

B. The point (200 , 2) shows that defeating 2 enemies will earn you 200 points.

C. The point (2 , 200) shows that defeating 2 enemies will earn you 200 points.

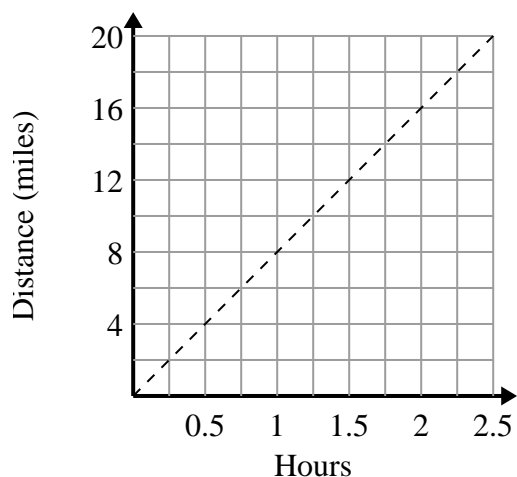
D. The point (5 , 500) shows that you would earn 500 points for defeating 5 enemies.

1. _____

2. _____

3. _____

2)



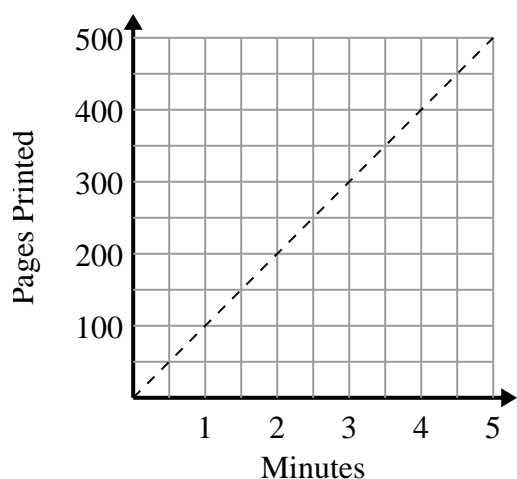
A. The point (1.75 , 14) shows that travelling 14 miles will take 1.75 hours.

B. The point (8 , 1) shows that it takes 1 hours to travel 8 miles.

C. The point (0.5 , 4) shows that it takes 0.5 hours to travel 4 miles.

D. The point (14 , 1.75) shows that travelling 14 miles will take 1.75 hours.

3)



A. The point (1.5 , 150) shows that it takes 1.5 minutes to print 150 pages.

B. The point (200 , 2) shows that printing 200 pages will take 2 minutes.

C. The point (2.5 , 250) shows that it takes 2.5 minutes to print 250 pages.

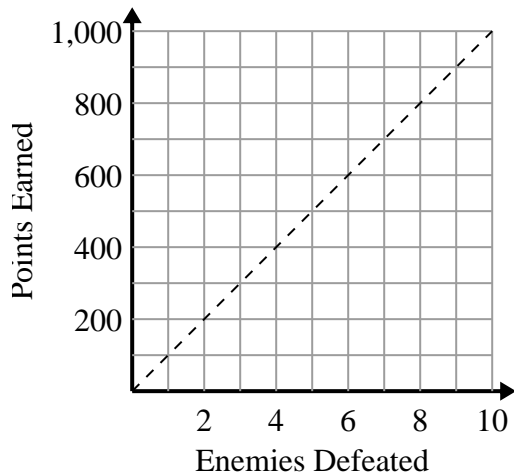
D. The point (3.5 , 350) shows that it takes 3.5 minutes to print 350 pages.



Determine which statements about the graph are true.

Answers

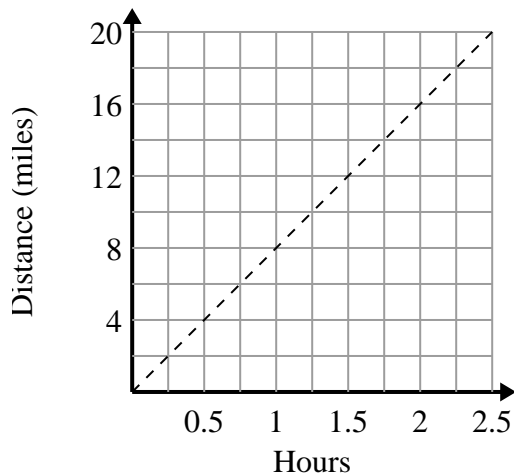
1)



- A. The point (700 , 7) shows that defeating 7 enemies will earn you 700 points.
- B. The point (200 , 2) shows that defeating 2 enemies will earn you 200 points.
- C. The point (2 , 200) shows that defeating 2 enemies will earn you 200 points.
- D. The point (5 , 500) shows that you would earn 500 points for defeating 5 enemies.

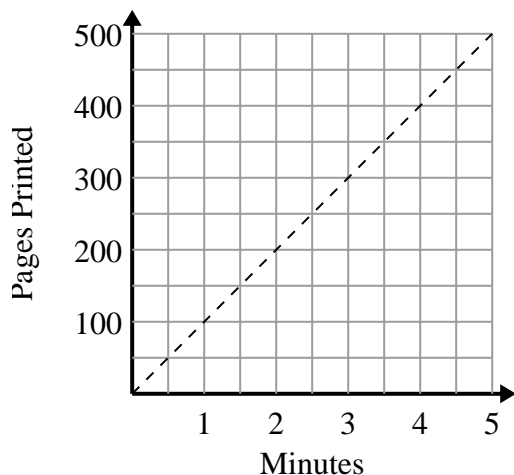
1. **C,D**2. **A,C**3. **A,C,D**

2)



- A. The point (1.75 , 14) shows that travelling 14 miles will take 1.75 hours.
- B. The point (8 , 1) shows that it takes 1 hours to travel 8 miles.
- C. The point (0.5 , 4) shows that it takes 0.5 hours to travel 4 miles.
- D. The point (14 , 1.75) shows that travelling 14 miles will take 1.75 hours.

3)



- A. The point (1.5 , 150) shows that it takes 1.5 minutes to print 150 pages.
- B. The point (200 , 2) shows that printing 200 pages will take 2 minutes.
- C. The point (2.5 , 250) shows that it takes 2.5 minutes to print 250 pages.
- D. The point (3.5 , 350) shows that it takes 3.5 minutes to print 350 pages.