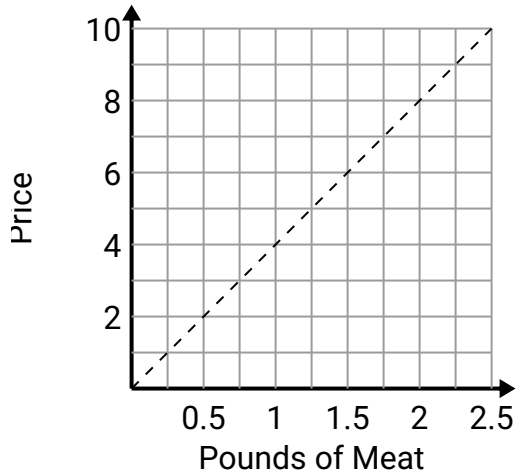




Determine which statements about the graph are true.

Answers

1)



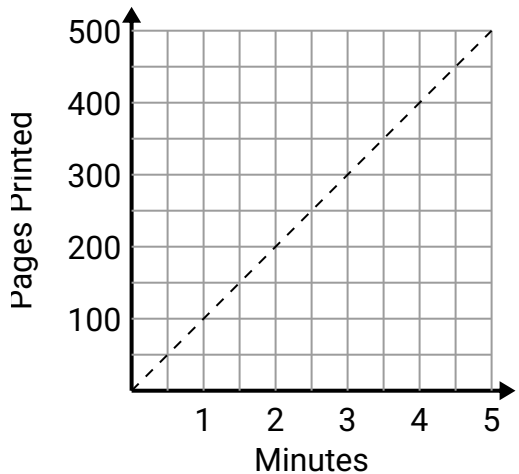
- A. The point (1 , 4) shows that \$4 will buy you 1 pounds of meat.
- B. The point (5 , 1.25) shows that \$5 will buy you 1.25 pounds of meat.
- C. The point (7 , 1.75) shows that \$7 will buy you 1.75 pounds of meat.
- D. The point (0.5 , 2) shows that buying 0.5 pounds of meat will cost \$2.

1. _____

2. _____

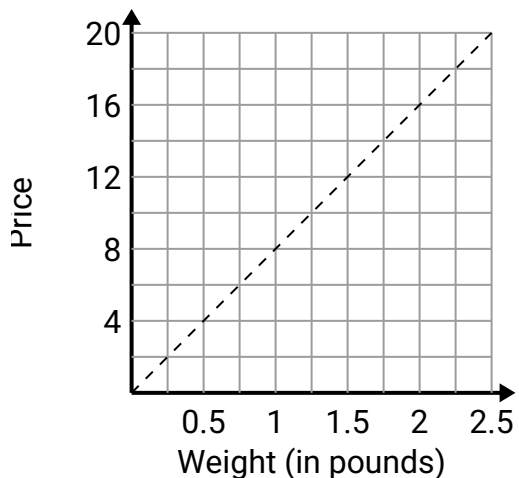
3. _____

2)



- A. The point (50 , 0.5) shows that it takes 0.5 minutes to print 50 page.
- B. The point (0.5 , 50) shows that printing 50 page will take 0.5 minutes.
- C. The point (150 , 1.5) shows that printing 150 pages will take 1.5 minutes.
- D. The point (1.5 , 150) shows that it takes 1.5 minutes to print 150 pages.

3)



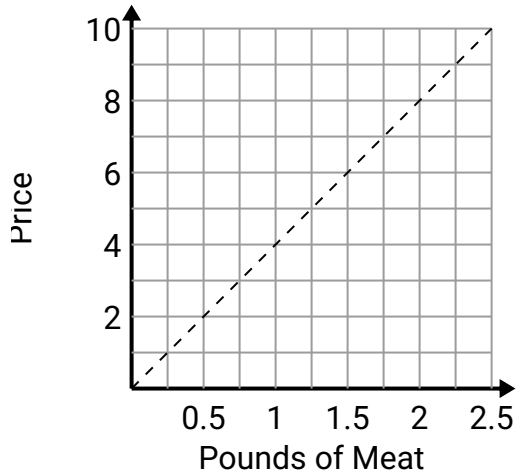
- A. The point (1.5 , 12) shows that it would cost \$12 for 1.5 pounds.
- B. The point (2 , 0.25) shows that 0.25 pound will cost \$2.
- C. The point (1.75 , 14) shows that 1.75 pounds will cost \$14.
- D. The point (2 , 16) shows that it would cost \$16 for 2 pounds.



Determine which statements about the graph are true.

Answers

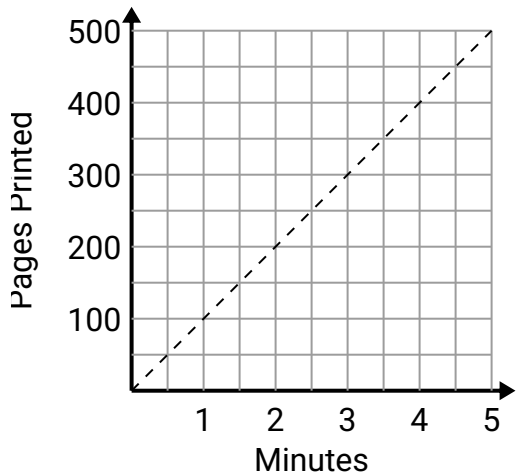
1)



- A. The point (1 , 4) shows that \$4 will buy you 1 pounds of meat.
B. The point (5 , 1.25) shows that \$5 will buy you 1.25 pounds of meat.
C. The point (7 , 1.75) shows that \$7 will buy you 1.75 pounds of meat.
D. The point (0.5 , 2) shows that buying 0.5 pounds of meat will cost \$2.

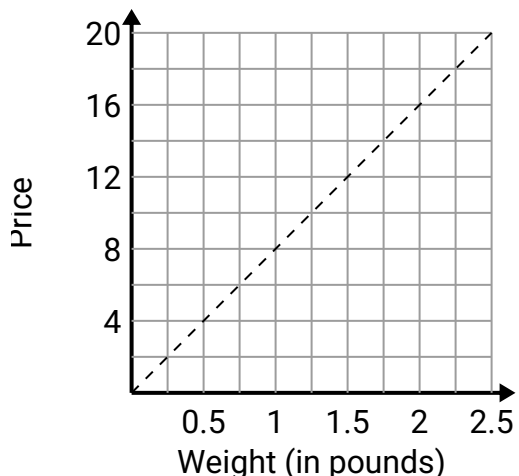
1. **A,D**2. **B,D**3. **A,C,D**

2)



- A. The point (50 , 0.5) shows that it takes 0.5 minutes to print 50 page.
B. The point (0.5 , 50) shows that printing 50 page will take 0.5 minutes.
C. The point (150 , 1.5) shows that printing 150 pages will take 1.5 minutes.
D. The point (1.5 , 150) shows that it takes 1.5 minutes to print 150 pages.

3)



- A. The point (1.5 , 12) shows that it would cost \$12 for 1.5 pounds.
B. The point (2 , 0.25) shows that 0.25 pound will cost \$2.
C. The point (1.75 , 14) shows that 1.75 pounds will cost \$14.
D. The point (2 , 16) shows that it would cost \$16 for 2 pounds.