



Fill in the grid using the chart.

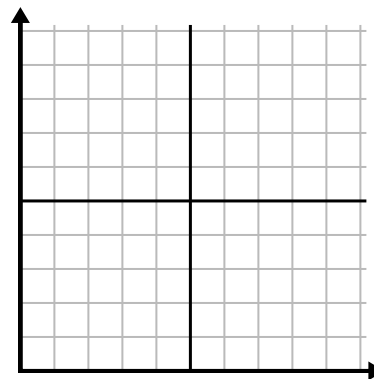
1)

| Week | 1 | 2 | 3 | 4 | 5 | 6 | 7 |
|----------------------|----|----|----|-----|----|----|----|
| Water Used (gallons) | 70 | 90 | 40 | 100 | 60 | 50 | 80 |



2)

| Week | 1 | 2 | 3 | 4 | 5 | 6 |
|---------------------|----|----|----|---|----|----|
| Hours of TV watched | 50 | 45 | 35 | 5 | 20 | 25 |



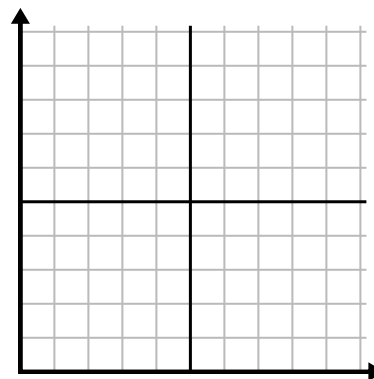
3)

| Day | 1 | 2 | 3 | 4 | 5 |
|-----------------|-----|-----|----|----|----|
| Calories Burned | 100 | 140 | 20 | 60 | 40 |



4)

| Day | 1 | 2 | 3 | 4 | 5 |
|-------------|---|---|----|---|---|
| Money Spent | 8 | 9 | 10 | 5 | 7 |



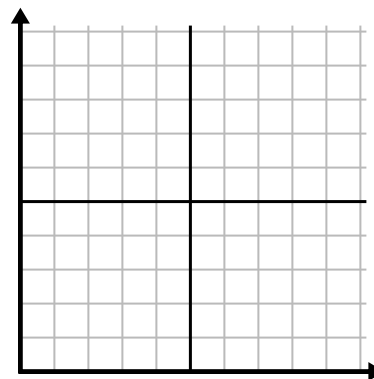
5)

| Day | 1 | 2 | 3 | 4 | 5 | 6 | 7 |
|------------|-----|-----|-----|-----|-----|-----|-----|
| Meals Sold | 600 | 500 | 800 | 200 | 700 | 400 | 900 |



6)

| Month | 1 | 2 | 3 | 4 | 5 | 6 |
|---------------------|-----|-----|-----|----|----|----|
| Electric Bill Price | 150 | 250 | 125 | 25 | 50 | 75 |

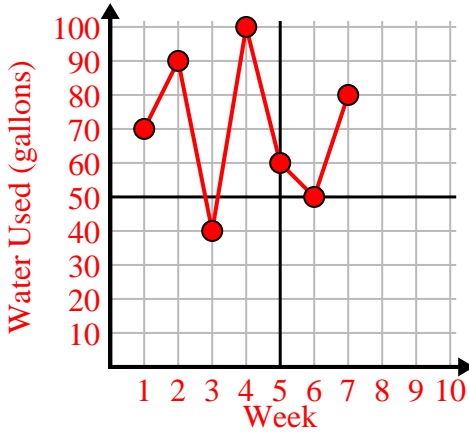




Fill in the grid using the chart.

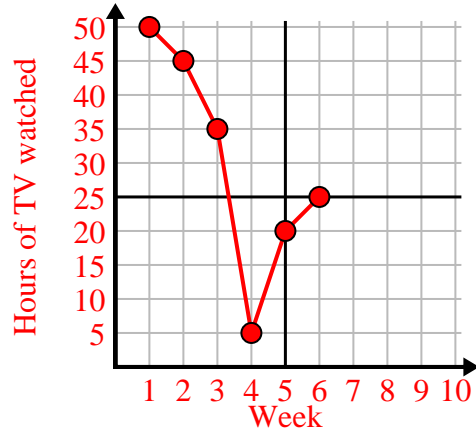
1)

| Week | 1 | 2 | 3 | 4 | 5 | 6 | 7 |
|----------------------|----|----|----|-----|----|----|----|
| Water Used (gallons) | 70 | 90 | 40 | 100 | 60 | 50 | 80 |



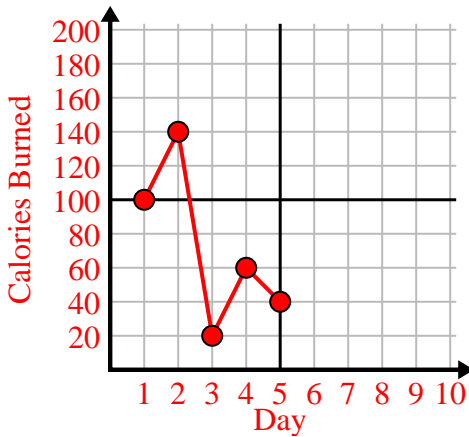
2)

| Week | 1 | 2 | 3 | 4 | 5 | 6 |
|---------------------|----|----|----|---|----|----|
| Hours of TV watched | 50 | 45 | 35 | 5 | 20 | 25 |



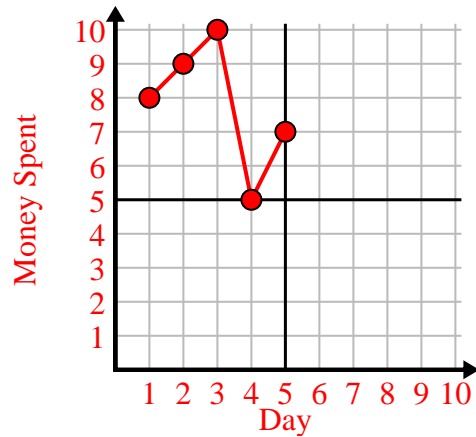
3)

| Day | 1 | 2 | 3 | 4 | 5 |
|-----------------|-----|-----|----|----|----|
| Calories Burned | 100 | 140 | 20 | 60 | 40 |



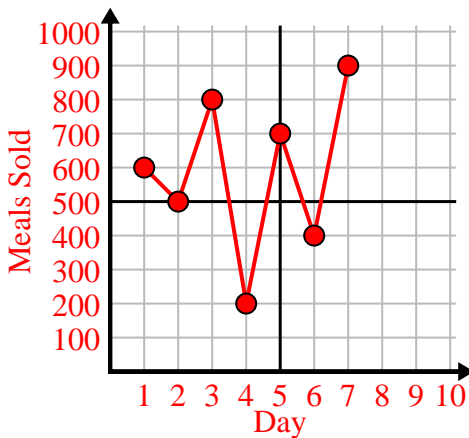
4)

| Day | 1 | 2 | 3 | 4 | 5 |
|-------------|---|---|----|---|---|
| Money Spent | 8 | 9 | 10 | 5 | 7 |



5)

| Day | 1 | 2 | 3 | 4 | 5 | 6 | 7 |
|------------|-----|-----|-----|-----|-----|-----|-----|
| Meals Sold | 600 | 500 | 800 | 200 | 700 | 400 | 900 |



6)

| Month | 1 | 2 | 3 | 4 | 5 | 6 |
|---------------------|-----|-----|-----|----|----|----|
| Electric Bill Price | 150 | 250 | 125 | 25 | 50 | 75 |

