
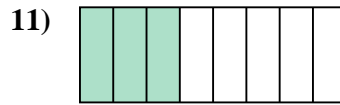
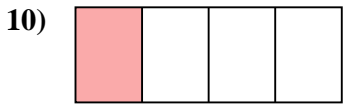
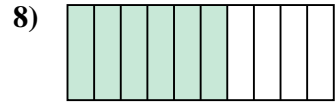
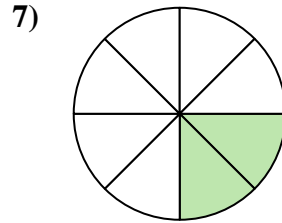
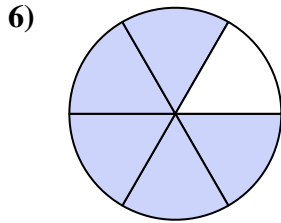
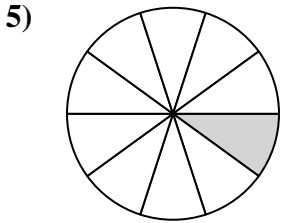


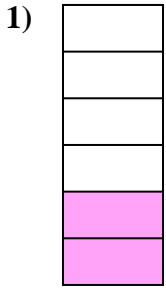




Determine if the shaded amount is 'more', 'less' or 'equal' to half.

Answers



1. _____

2. _____

3. _____

4. _____

5. _____

6. _____

7. _____

8. _____

9. _____

10. _____

11. _____

12. _____

13. _____

14. _____

15. _____

16. _____

17. _____

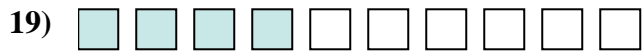



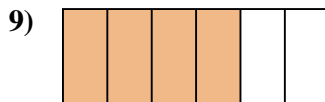
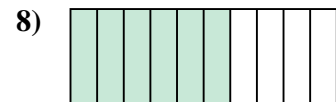
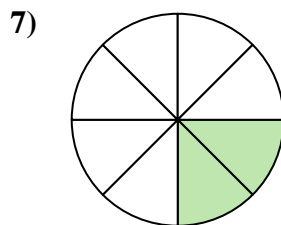
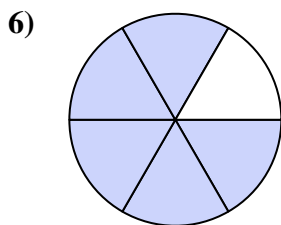
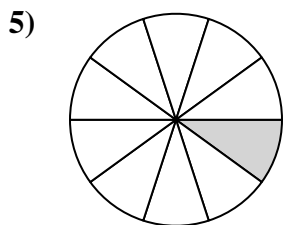



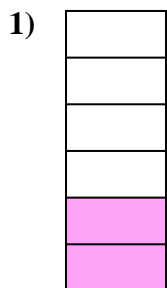
18. _____

19. _____

20. _____



Determine if the shaded amount is 'more', 'less' or 'equal' to half.



Answers

1. less

2. equal

3. more

4. less

5. less

6. more

7. less

8. more

9. more

10. less

11. less

12. equal

13. less

14. less

15. equal

16. more

17. more

18. more

19. less

20. less