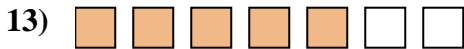
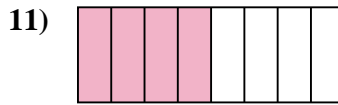
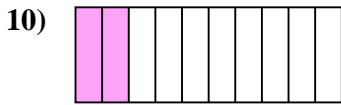
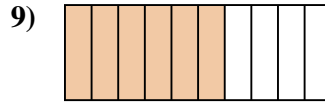
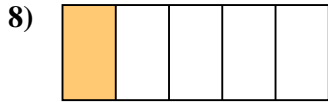
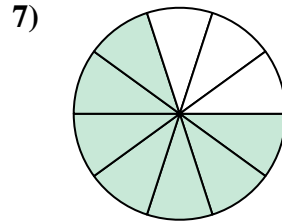
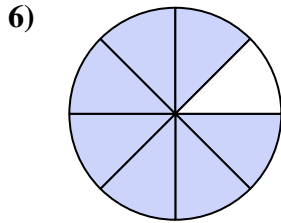
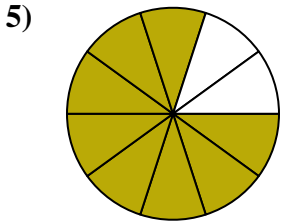


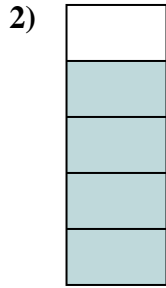




Determine if the shaded amount is 'more', 'less' or 'equal' to half.

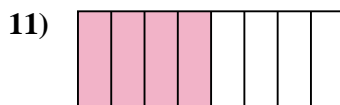
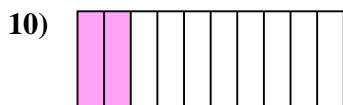
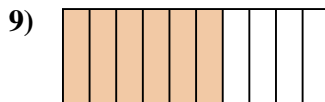

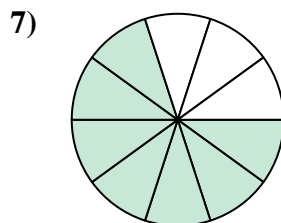
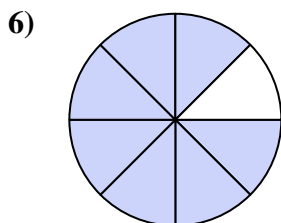
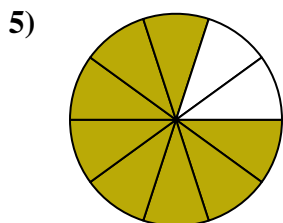


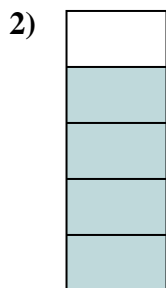

Answers



1. \_\_\_\_\_
2. \_\_\_\_\_
3. \_\_\_\_\_
4. \_\_\_\_\_
5. \_\_\_\_\_
6. \_\_\_\_\_
7. \_\_\_\_\_
8. \_\_\_\_\_
9. \_\_\_\_\_
10. \_\_\_\_\_
11. \_\_\_\_\_
12. \_\_\_\_\_
13. \_\_\_\_\_
14. \_\_\_\_\_
15. \_\_\_\_\_
16. \_\_\_\_\_
17. \_\_\_\_\_
18. \_\_\_\_\_
19. \_\_\_\_\_
20. \_\_\_\_\_



Determine if the shaded amount is 'more', 'less' or 'equal' to half.



Answers

1. less

2. more

3. less

4. less

5. more

6. more

7. more

8. less

9. more

10. less

11. equal

12. more

13. more

14. equal

15. equal

16. less

17. less

18. more

19. less

20. less