

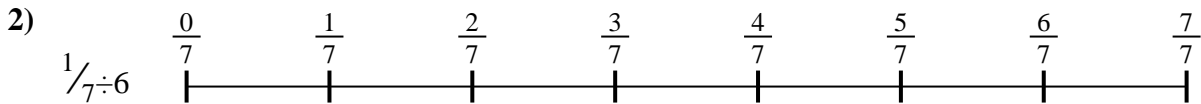


Use the numberline to solve each problem. The first is marked for you.

**Answers**



1. \_\_\_\_\_



2. \_\_\_\_\_



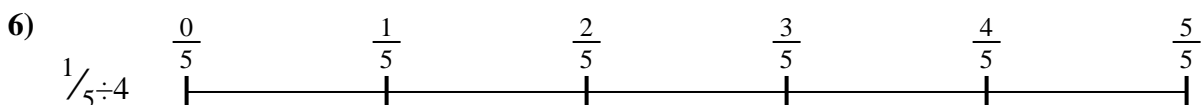
3. \_\_\_\_\_




4. \_\_\_\_\_



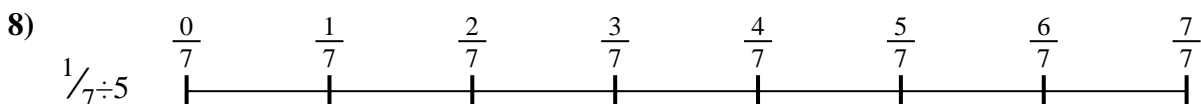
5. \_\_\_\_\_



6. \_\_\_\_\_



7. \_\_\_\_\_



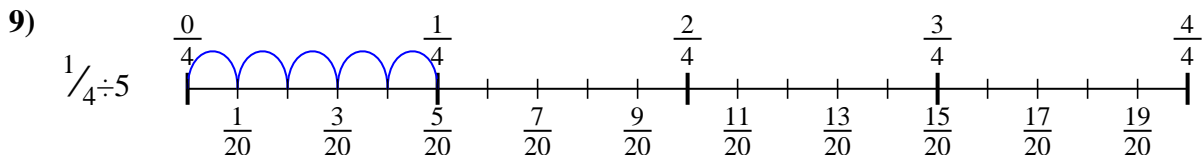
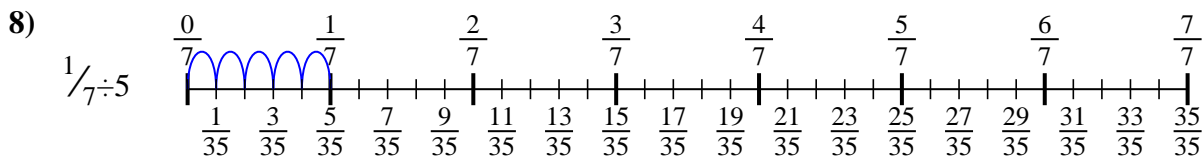
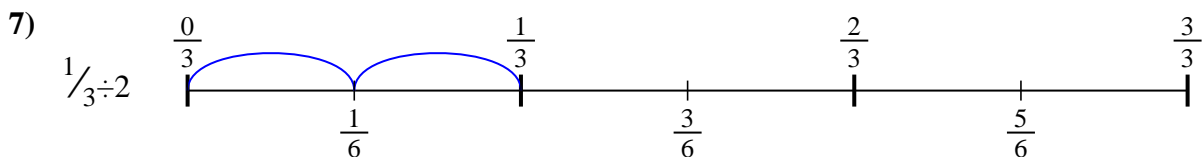
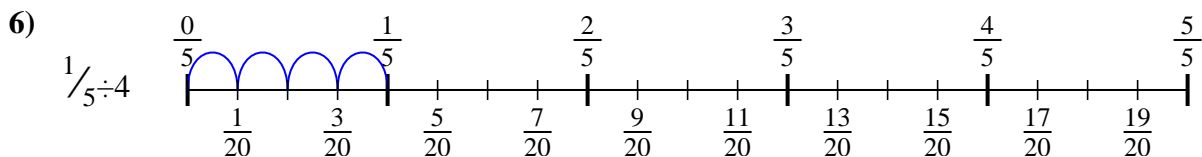
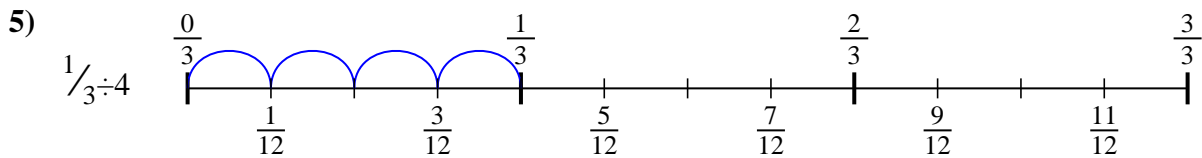
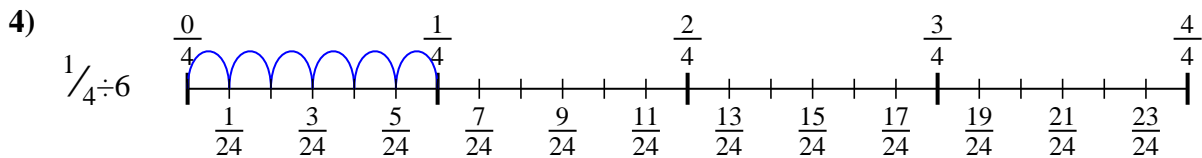
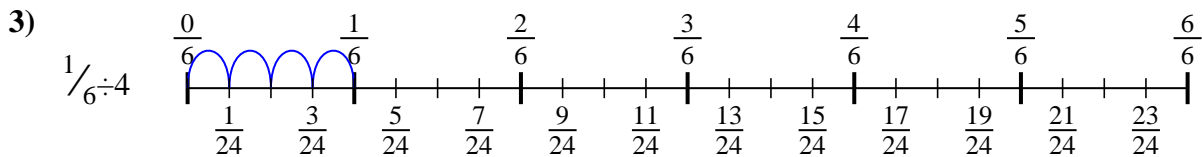
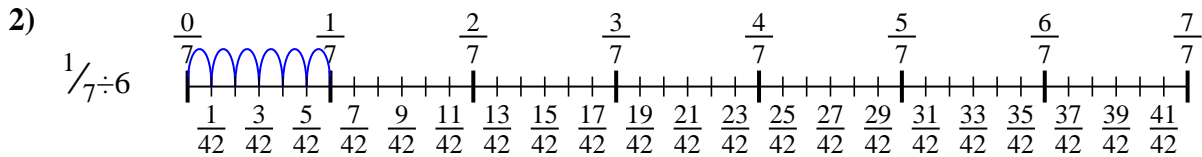
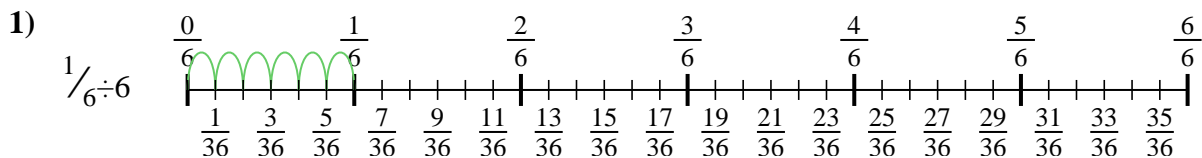
8. \_\_\_\_\_



9. \_\_\_\_\_



Use the numberline to solve each problem. The first is marked for you.



**Answers**

1.  $\frac{1}{36}$

2.  $\frac{1}{42}$

3.  $\frac{1}{24}$

4.  $\frac{1}{24}$

5.  $\frac{1}{12}$

6.  $\frac{1}{20}$

7.  $\frac{1}{6}$

8.  $\frac{1}{35}$

9.  $\frac{1}{20}$



Use the numberline to solve each problem. The first is marked for you.


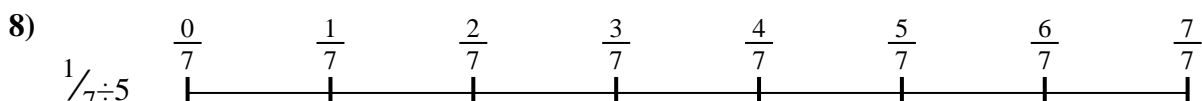
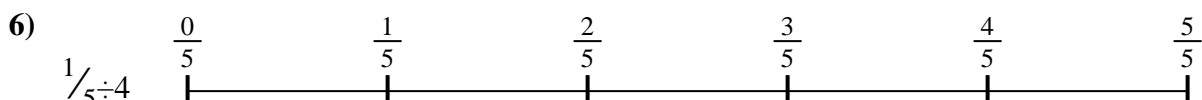


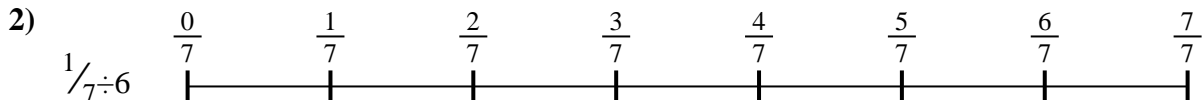
**Answers**

$\frac{1}{35}$   
 $\frac{1}{24}$   
 $\frac{1}{12}$

$\frac{1}{6}$   
 $\frac{1}{36}$

$\frac{1}{24}$   
 $\frac{1}{20}$

$\frac{1}{42}$   
 $\frac{1}{20}$



1. \_\_\_\_\_
2. \_\_\_\_\_
3. \_\_\_\_\_
4. \_\_\_\_\_
5. \_\_\_\_\_
6. \_\_\_\_\_
7. \_\_\_\_\_
8. \_\_\_\_\_
9. \_\_\_\_\_