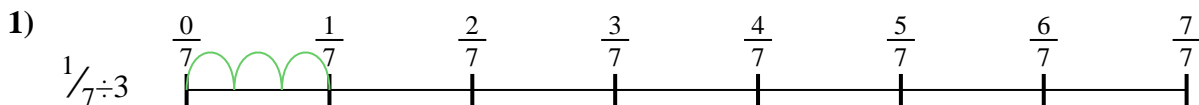




Use the numberline to solve each problem. The first is marked for you.

**Answers**



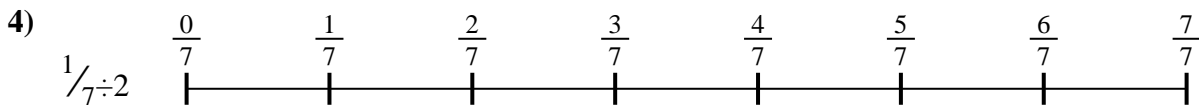
1. \_\_\_\_\_



2. \_\_\_\_\_




3. \_\_\_\_\_



4. \_\_\_\_\_




5. \_\_\_\_\_




6. \_\_\_\_\_



7. \_\_\_\_\_



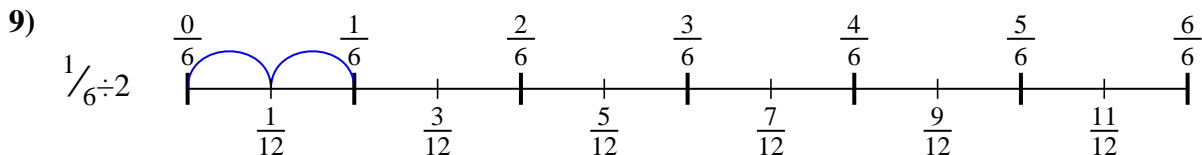
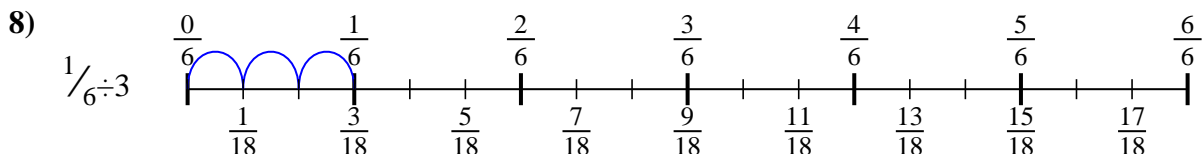
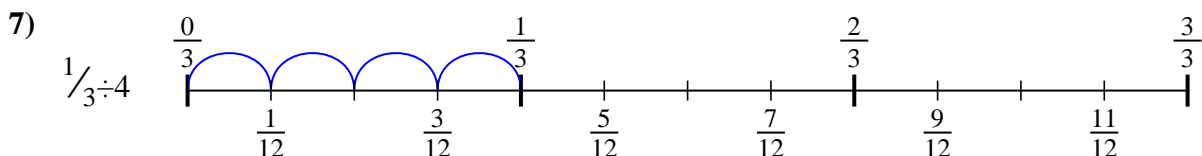
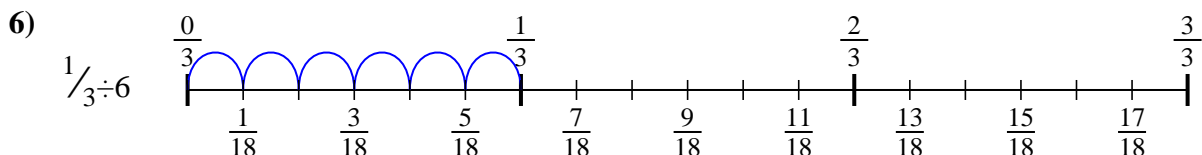
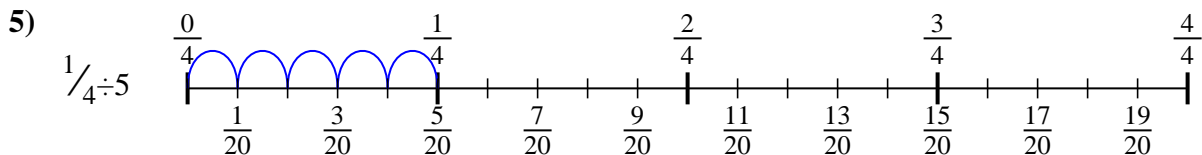
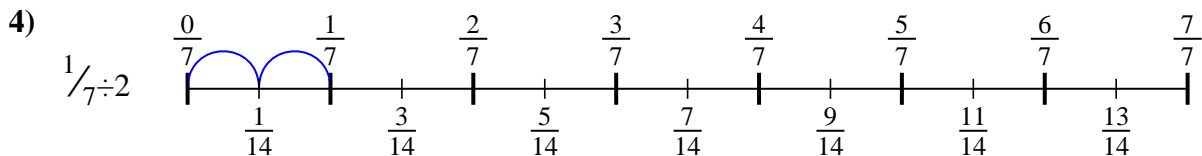
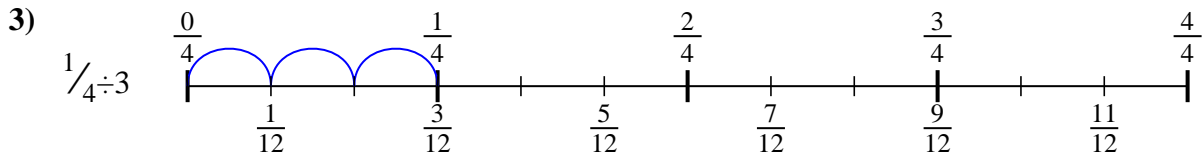
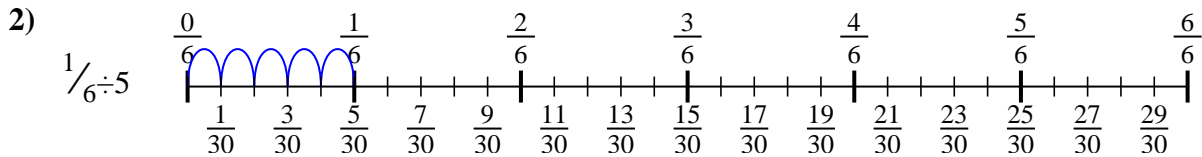
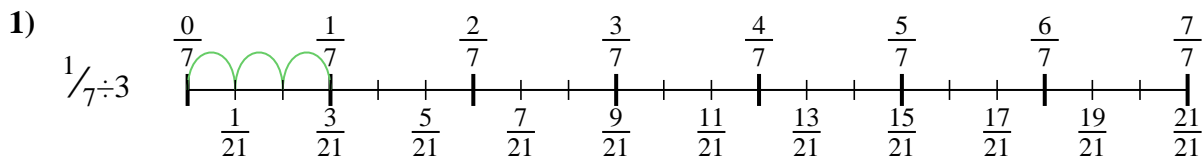
8. \_\_\_\_\_



9. \_\_\_\_\_



Use the numberline to solve each problem. The first is marked for you.



**Answers**

1.  $\frac{1}{21}$

2.  $\frac{1}{30}$

3.  $\frac{1}{12}$

4.  $\frac{1}{14}$

5.  $\frac{1}{20}$

6.  $\frac{1}{18}$

7.  $\frac{1}{12}$

8.  $\frac{1}{18}$

9.  $\frac{1}{12}$



Use the numberline to solve each problem. The first is marked for you.



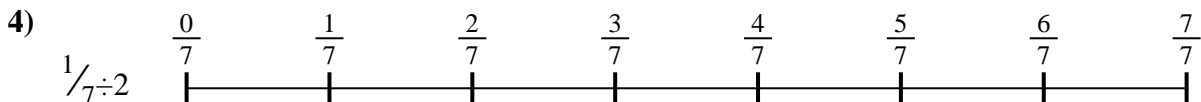

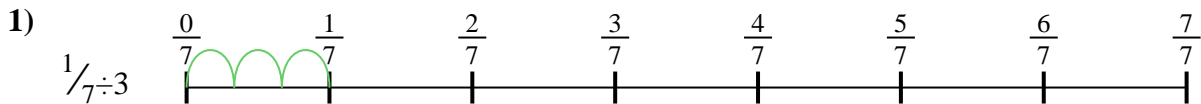
**Answers**

$\frac{1}{30}$   
 $\frac{1}{21}$   
 $\frac{1}{14}$

$\frac{1}{12}$   
 $\frac{1}{18}$

$\frac{1}{12}$   
 $\frac{1}{18}$

$\frac{1}{20}$   
 $\frac{1}{12}$



1. \_\_\_\_\_
2. \_\_\_\_\_
3. \_\_\_\_\_
4. \_\_\_\_\_
5. \_\_\_\_\_
6. \_\_\_\_\_
7. \_\_\_\_\_
8. \_\_\_\_\_
9. \_\_\_\_\_