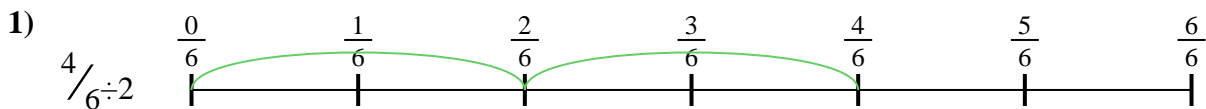


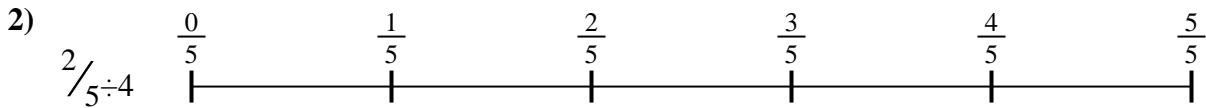


Use the numberline to solve each problem. The first is marked for you.

Answers




1. _____



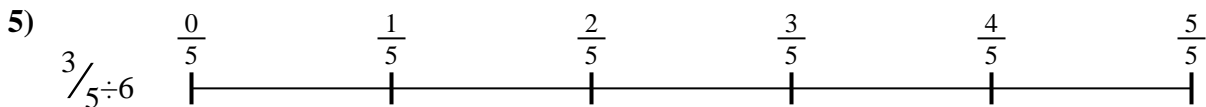
2. _____



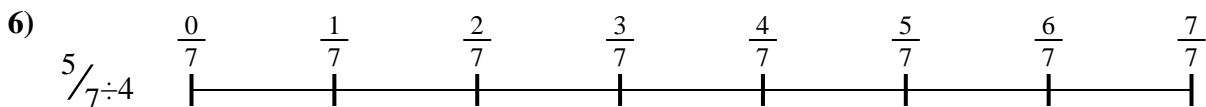
3. _____



4. _____



5. _____



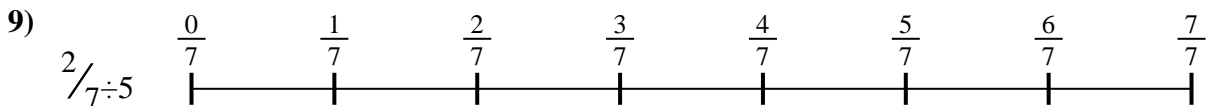
6. _____



7. _____



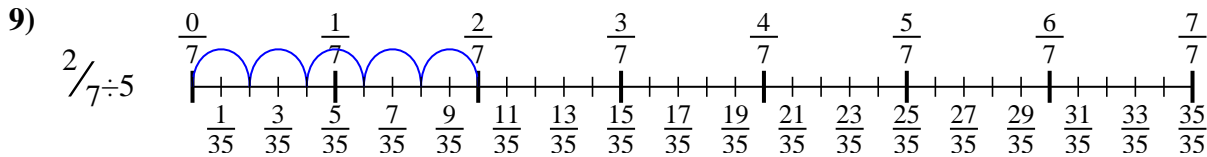
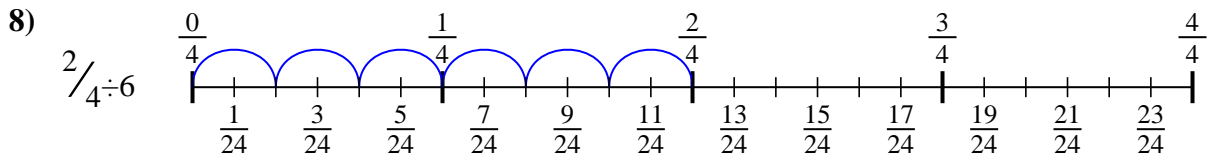
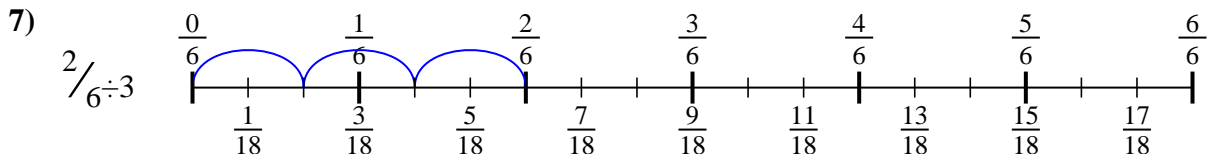
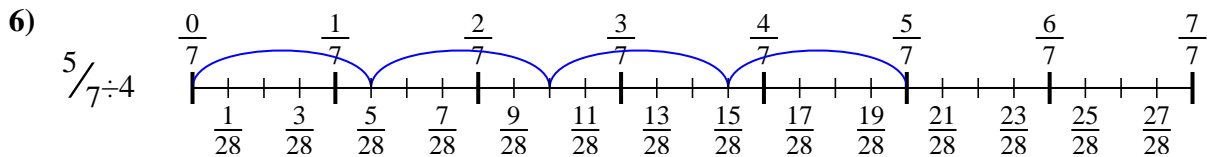
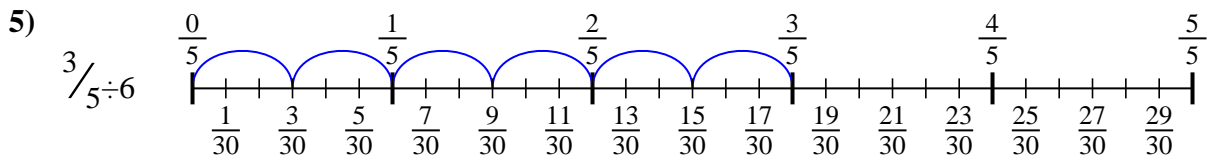
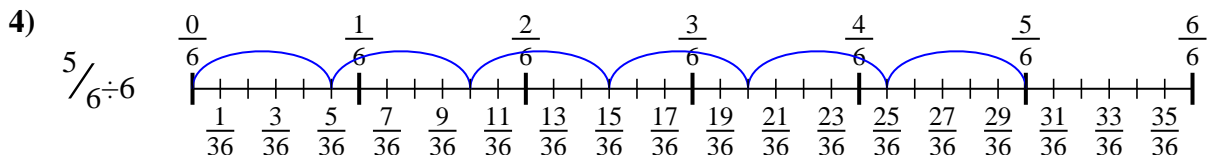
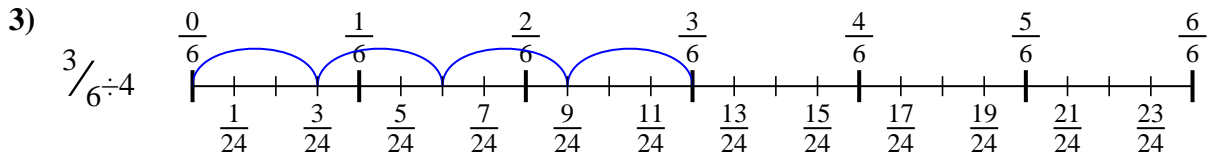
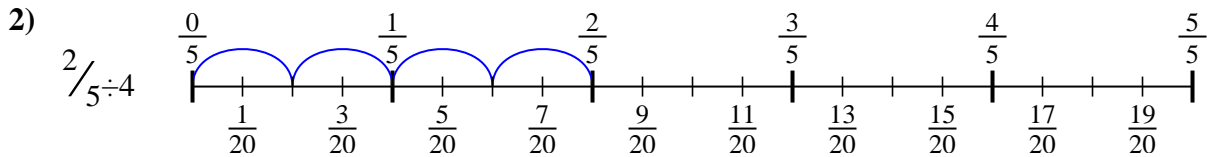
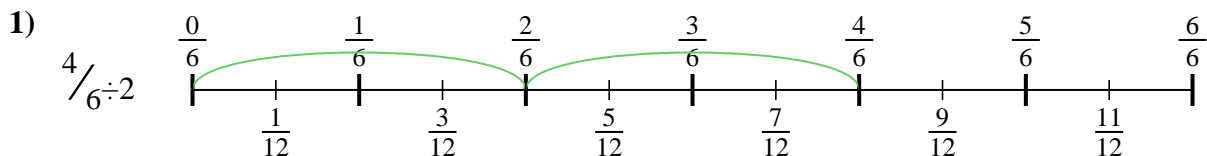
8. _____



9. _____



Use the numberline to solve each problem. The first is marked for you.



Answers

1. $\frac{4}{12}$

2. $\frac{2}{20}$

3. $\frac{3}{24}$

4. $\frac{5}{36}$

5. $\frac{3}{30}$

6. $\frac{5}{28}$

7. $\frac{2}{18}$

8. $\frac{2}{24}$

9. $\frac{2}{35}$



Use the numberline to solve each problem. The first is marked for you.

Answers

$\frac{3}{30}$

$\frac{2}{18}$

$\frac{2}{35}$

$\frac{2}{20}$

$\frac{2}{24}$

$\frac{5}{36}$

$\frac{5}{28}$

$\frac{4}{12}$

$\frac{3}{24}$

1. _____

2. _____

3. _____

4. _____

5. _____

6. _____

7. _____

8. _____

9. _____

