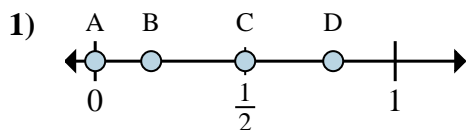
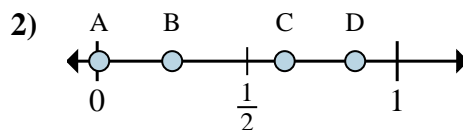
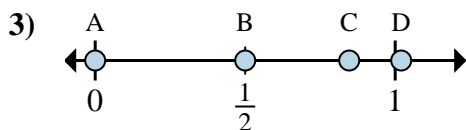
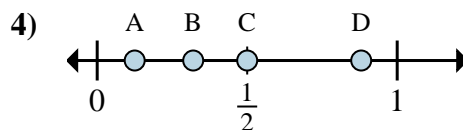
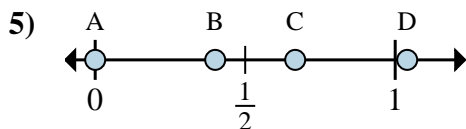
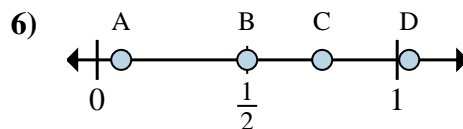
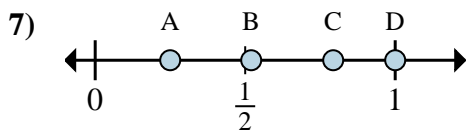
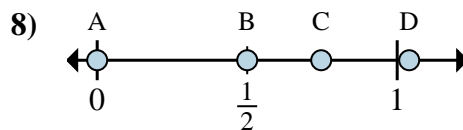


**Determine which letter best shows the location of the fraction.****Answers**a. Which letter best shows $\frac{0}{2}$?b. Which letter best shows $\frac{1}{2}$?a. Which letter best shows $\frac{2}{8}$?b. Which letter best shows $\frac{5}{8}$?a. Which letter best shows $\frac{0}{6}$?b. Which letter best shows $\frac{3}{6}$?a. Which letter best shows $\frac{1}{8}$?b. Which letter best shows $\frac{4}{8}$?a. Which letter best shows $\frac{0}{3}$?b. Which letter best shows $\frac{2}{3}$?a. Which letter best shows $\frac{2}{4}$?b. Which letter best shows $\frac{3}{4}$?a. Which letter best shows $\frac{1}{4}$?b. Which letter best shows $\frac{4}{4}$?a. Which letter best shows $\frac{0}{2}$?b. Which letter best shows $\frac{1}{2}$?

1. _____

2. _____

3. _____

4. _____

5. _____

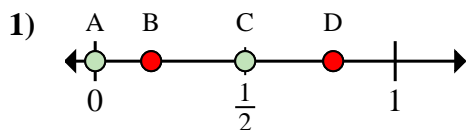
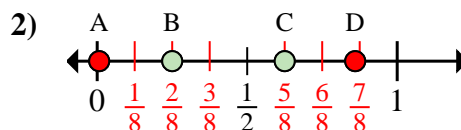
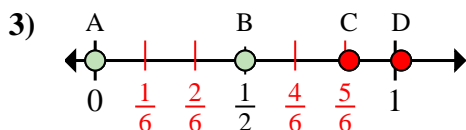
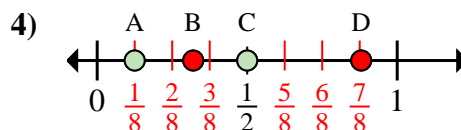
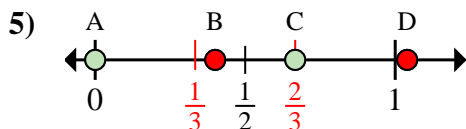
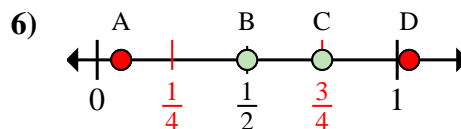
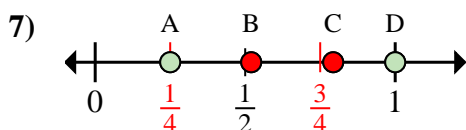
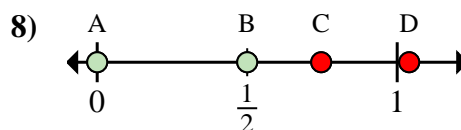
6. _____

7. _____

8. _____



Determine which letter best shows the location of the fraction.

Answersa. Which letter best shows $\frac{0}{2}$?b. Which letter best shows $\frac{1}{2}$?a. Which letter best shows $\frac{2}{8}$?b. Which letter best shows $\frac{5}{8}$?a. Which letter best shows $\frac{0}{6}$?b. Which letter best shows $\frac{3}{6}$?a. Which letter best shows $\frac{1}{8}$?b. Which letter best shows $\frac{4}{8}$?a. Which letter best shows $\frac{0}{3}$?b. Which letter best shows $\frac{2}{3}$?a. Which letter best shows $\frac{2}{4}$?b. Which letter best shows $\frac{3}{4}$?a. Which letter best shows $\frac{1}{4}$?b. Which letter best shows $\frac{4}{4}$?a. Which letter best shows $\frac{0}{2}$?b. Which letter best shows $\frac{1}{2}$?1. **A** **C**2. **B** **C**3. **A** **B**4. **A** **C**5. **A** **C**6. **B** **C**7. **A** **D**8. **A** **B**