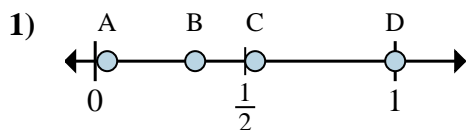
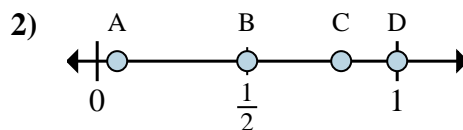
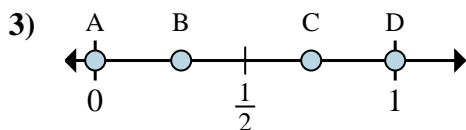
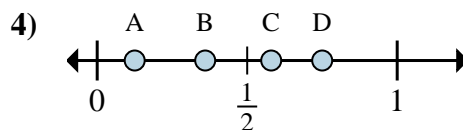
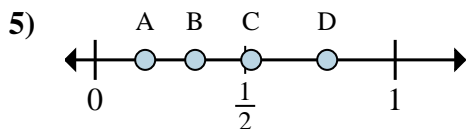
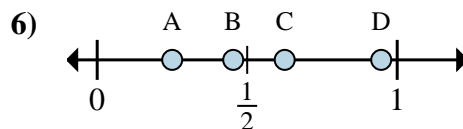
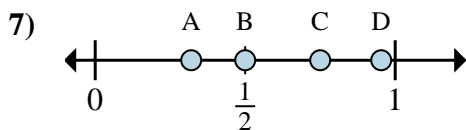
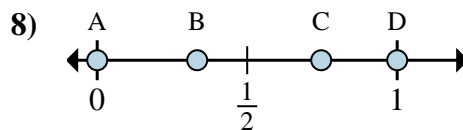




Determine which letter best shows the location of the fraction.

**Answers**a. Which letter best shows  $\frac{1}{3}$ ?b. Which letter best shows  $\frac{3}{3}$ ?a. Which letter best shows  $\frac{1}{2}$ ?b. Which letter best shows  $\frac{2}{2}$ ?a. Which letter best shows  $\frac{0}{6}$ ?b. Which letter best shows  $\frac{6}{6}$ ?a. Which letter best shows  $\frac{1}{8}$ ?b. Which letter best shows  $\frac{6}{8}$ ?a. Which letter best shows  $\frac{2}{6}$ ?b. Which letter best shows  $\frac{1}{6}$ ?a. Which letter best shows  $\frac{5}{8}$ ?b. Which letter best shows  $\frac{2}{8}$ ?a. Which letter best shows  $\frac{3}{4}$ ?b. Which letter best shows  $\frac{2}{4}$ ?a. Which letter best shows  $\frac{0}{6}$ ?b. Which letter best shows  $\frac{6}{6}$ ?

1. \_\_\_\_\_

2. \_\_\_\_\_

3. \_\_\_\_\_

4. \_\_\_\_\_

5. \_\_\_\_\_

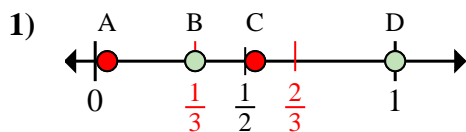
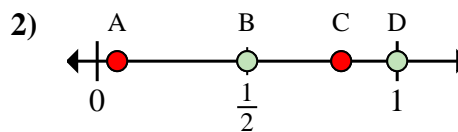
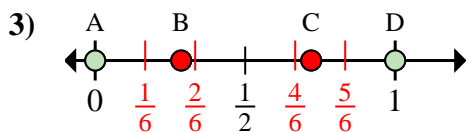
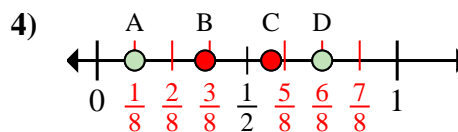
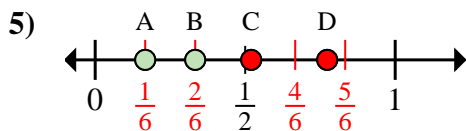
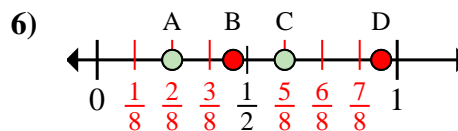
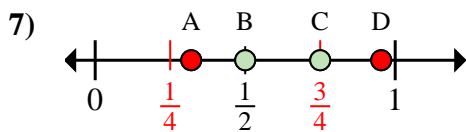
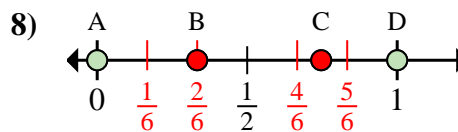
6. \_\_\_\_\_

7. \_\_\_\_\_

8. \_\_\_\_\_



Determine which letter best shows the location of the fraction.

**Answers**a. Which letter best shows  $\frac{1}{3}$ ?b. Which letter best shows  $\frac{3}{3}$ ?a. Which letter best shows  $\frac{1}{2}$ ?b. Which letter best shows  $\frac{2}{2}$ ?a. Which letter best shows  $\frac{0}{6}$ ?b. Which letter best shows  $\frac{6}{6}$ ?a. Which letter best shows  $\frac{1}{8}$ ?b. Which letter best shows  $\frac{6}{8}$ ?a. Which letter best shows  $\frac{2}{6}$ ?b. Which letter best shows  $\frac{1}{6}$ ?a. Which letter best shows  $\frac{5}{8}$ ?b. Which letter best shows  $\frac{2}{8}$ ?a. Which letter best shows  $\frac{3}{4}$ ?b. Which letter best shows  $\frac{2}{4}$ ?a. Which letter best shows  $\frac{0}{6}$ ?b. Which letter best shows  $\frac{6}{6}$ ?1. **B** **D**2. **B** **D**3. **A** **D**4. **A** **D**5. **B** **A**6. **C** **A**7. **C** **B**8. **A** **D**