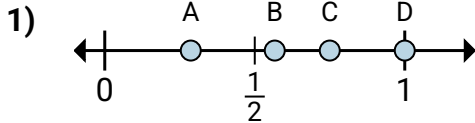
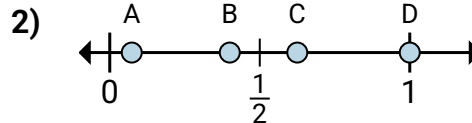




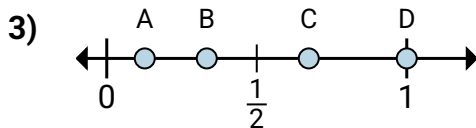
Determine which letter best shows the location of the fraction.

Answers

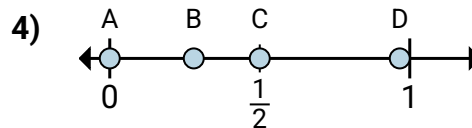
- a. Which letter best shows $\frac{3}{4}$?
b. Which letter best shows $\frac{4}{4}$?



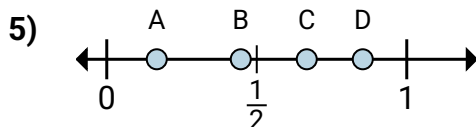
- a. Which letter best shows $\frac{5}{8}$?
b. Which letter best shows $\frac{8}{8}$?



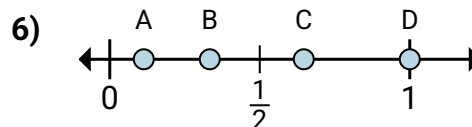
- a. Which letter best shows $\frac{6}{6}$?
b. Which letter best shows $\frac{2}{6}$?



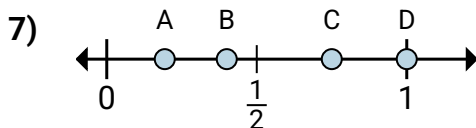
- a. Which letter best shows $\frac{0}{2}$?
b. Which letter best shows $\frac{1}{2}$?



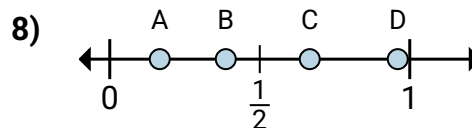
- a. Which letter best shows $\frac{4}{6}$?
b. Which letter best shows $\frac{1}{6}$?



- a. Which letter best shows $\frac{1}{3}$?
b. Which letter best shows $\frac{3}{3}$?



- a. Which letter best shows $\frac{3}{4}$?
b. Which letter best shows $\frac{4}{4}$?

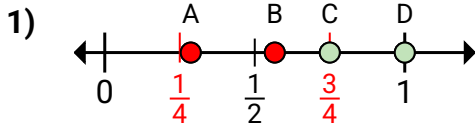


- a. Which letter best shows $\frac{4}{6}$?
b. Which letter best shows $\frac{1}{6}$?

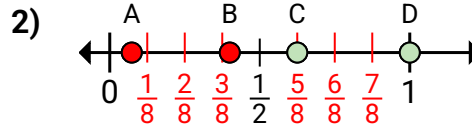
1. _____
2. _____
3. _____
4. _____
5. _____
6. _____
7. _____
8. _____



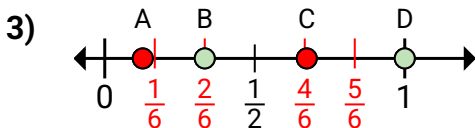
Determine which letter best shows the location of the fraction.

Answers

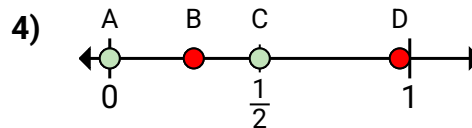
- a. Which letter best shows $\frac{3}{4}$?
b. Which letter best shows $\frac{4}{4}$?



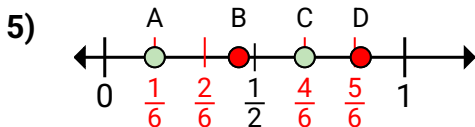
- a. Which letter best shows $\frac{5}{8}$?
b. Which letter best shows $\frac{8}{8}$?



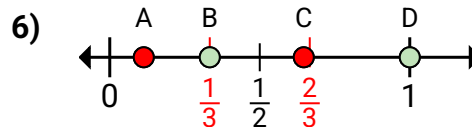
- a. Which letter best shows $\frac{6}{6}$?
b. Which letter best shows $\frac{2}{6}$?



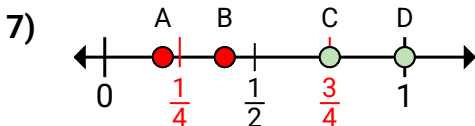
- a. Which letter best shows $\frac{0}{2}$?
b. Which letter best shows $\frac{1}{2}$?



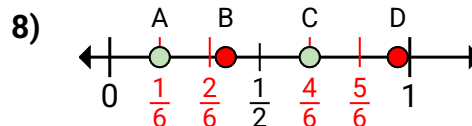
- a. Which letter best shows $\frac{4}{6}$?
b. Which letter best shows $\frac{1}{6}$?



- a. Which letter best shows $\frac{1}{3}$?
b. Which letter best shows $\frac{3}{3}$?



- a. Which letter best shows $\frac{3}{4}$?
b. Which letter best shows $\frac{4}{4}$?



- a. Which letter best shows $\frac{4}{6}$?
b. Which letter best shows $\frac{1}{6}$?

1. **C** **D**
2. **C** **D**
3. **D** **B**
4. **A** **C**
5. **C** **A**
6. **B** **D**
7. **C** **D**
8. **C** **A**